







Addition: Skill 1-2D

Picture Problems

Directions: "In all" are key words that tell you to add. Write the correct sign (+ or -) in the square. Write the answer on the blank line.

<p>1. 4 cows 1 joins them</p>  <p>How many in all?</p> <p>Write + or - in the box.</p> <p>4 <input type="text"/> 1 = _____</p>	<p>2. 4 monkeys 2 join them</p>  <p>How many in all?</p> <p>4 <input type="text"/> 2 = _____</p>
--	--

<p>3. 3 cows 3 more come</p>  <p>How many in all?</p> <p>3 <input type="text"/> 3 = _____</p>	<p>4. 3 monkeys 2 join them</p>  <p>How many in all?</p> <p>3 <input type="text"/> 2 = _____</p>
---	--



<p>5. 2 cows 3 more come</p>  <p>How many in all?</p> <p>2 <input type="text"/> 3 = _____</p>	<p>6. 1 monkey 3 more come</p>  <p>How many in all?</p> <p>1 <input type="text"/> 3 = _____</p>
--	---

Addition: Skill 1-2D

Picture Problems

Directions: "In all" are key words that tell you to add. Write the correct sign (+ or -) in the square. Write the answer on the blank line.



7. 5 cherries 1 cherry

How many in all?

5 1 = _____



8. 3 soccer balls 1 soccer ball

How many in all?

3 1 = _____



9. 2 cherries 4 cherries

How many in all?

2 4 = _____



10. 2 monkeys 2 monkeys join them

How many in all?

2 2 = _____



11. 1 cherry 5 cherries

How many in all?

1 5 = _____

12. 1 monkey 4 monkeys

How many in all?


1 4 = _____

Addition: Skill 1-2D

Picture Problems

Directions: "In all" are key words that tell you to add. Write the correct sign (+ or -) in the square. Write the answer on the blank line.

13. 2 cows 1 joins them



How many in all?

$$2 \quad \square \quad 1 \quad = \quad \underline{\hspace{2cm}}$$

14. 2 soccer balls 3 soccer balls



How many in all?

$$2 \quad \square \quad 3 \quad = \quad \underline{\hspace{2cm}}$$

15. 1 cherry



5 cherries



How many in all?

$$1 \quad \square \quad 5 \quad = \quad \underline{\hspace{2cm}}$$

16. 5 monkeys



1 monkey



How many in all?

$$5 \quad \square \quad 1 \quad = \quad \underline{\hspace{2cm}}$$

17. 1 cherry



4 cherries



How many in all?

$$1 \quad \square \quad 4 \quad = \quad \underline{\hspace{2cm}}$$

18. 2 monkeys



4 monkeys join them



How many in all?

$$2 \quad \square \quad 4 \quad = \quad \underline{\hspace{2cm}}$$

Answer Key
Skill 1- 2D

1. $4 + 1 = 5$

2. $4 + 2 = 6$

3. $3 + 3 = 6$

4. $3 + 2 = 5$

5. $2 + 3 = 5$

6. $1 + 3 = 4$

Page 2

7. $5 + 1 = 6$

8. $3 + 1 = 4$

9. $2 + 4 = 6$

10. $2 + 2 = 4$

11. $1 + 5 = 6$

12. $1 + 4 = 5$

Page 3

13. $2 + 1 = 3$

14. $2 + 3 = 5$

15. $1 + 5 = 6$

16. $5 + 1 = 6$

17. $1 + 4 = 5$

18. $2 + 4 = 6$