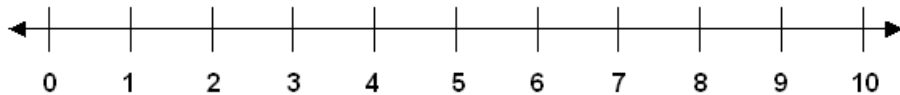


Subtraction Facts
Skill 1-3C

Subtracting from 4 and 5

Directions: Subtract. Use the number line to count back to subtract.
(subtract with pictures on pages 4 - 5)



1.

$$\begin{array}{r} 4 \\ -0 \\ \hline \end{array}$$

$$\begin{array}{r} 4 \\ -1 \\ \hline \end{array}$$

$$\begin{array}{r} 4 \\ -4 \\ \hline \end{array}$$

$$\begin{array}{r} 4 \\ -3 \\ \hline \end{array}$$

$$\begin{array}{r} 4 \\ -2 \\ \hline \end{array}$$

2.

$$\begin{array}{r} 5 \\ -2 \\ \hline \end{array}$$

$$\begin{array}{r} 5 \\ -5 \\ \hline \end{array}$$

$$\begin{array}{r} 5 \\ -3 \\ \hline \end{array}$$

$$\begin{array}{r} 5 \\ -4 \\ \hline \end{array}$$

$$\begin{array}{r} 5 \\ -2 \\ \hline \end{array}$$

3.

$$\begin{array}{r} 4 \\ -0 \\ \hline \end{array}$$

$$\begin{array}{r} 4 \\ -1 \\ \hline \end{array}$$

$$\begin{array}{r} 4 \\ -2 \\ \hline \end{array}$$

$$\begin{array}{r} 5 \\ -0 \\ \hline \end{array}$$

$$\begin{array}{r} 5 \\ -1 \\ \hline \end{array}$$

4.

$$\begin{array}{r} 5 \\ -1 \\ \hline \end{array}$$

$$\begin{array}{r} 5 \\ -0 \\ \hline \end{array}$$

$$\begin{array}{r} 4 \\ -3 \\ \hline \end{array}$$

$$\begin{array}{r} 4 \\ -4 \\ \hline \end{array}$$

$$\begin{array}{r} 5 \\ -1 \\ \hline \end{array}$$

Subtraction Facts
Skill 1-3C

Subtracting from 4 and 5

Directions: Subtract. Use the number line to count back to subtract.

(subtract with pictures on pages 4 - 5)



1.

$$\begin{array}{r} 5 \\ -0 \\ \hline \end{array}$$

$$\begin{array}{r} 5 \\ -1 \\ \hline \end{array}$$

$$\begin{array}{r} 5 \\ -2 \\ \hline \end{array}$$

$$\begin{array}{r} 4 \\ -3 \\ \hline \end{array}$$

$$\begin{array}{r} 4 \\ -1 \\ \hline \end{array}$$

2.

$$\begin{array}{r} 5 \\ -5 \\ \hline \end{array}$$

$$\begin{array}{r} 5 \\ -0 \\ \hline \end{array}$$

$$\begin{array}{r} 4 \\ -2 \\ \hline \end{array}$$

$$\begin{array}{r} 4 \\ -4 \\ \hline \end{array}$$

$$\begin{array}{r} 5 \\ -3 \\ \hline \end{array}$$

3.

$$\begin{array}{r} 5 \\ -2 \\ \hline \end{array}$$

$$\begin{array}{r} 4 \\ -0 \\ \hline \end{array}$$

$$\begin{array}{r} 4 \\ -2 \\ \hline \end{array}$$

$$\begin{array}{r} 5 \\ -2 \\ \hline \end{array}$$

$$\begin{array}{r} 5 \\ -4 \\ \hline \end{array}$$

4.

$$\begin{array}{r} 5 \\ -3 \\ \hline \end{array}$$

$$\begin{array}{r} 4 \\ -3 \\ \hline \end{array}$$

$$\begin{array}{r} 4 \\ -1 \\ \hline \end{array}$$

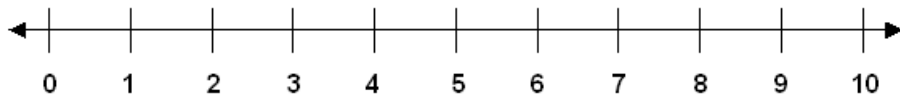
$$\begin{array}{r} 5 \\ -3 \\ \hline \end{array}$$

$$\begin{array}{r} 5 \\ -5 \\ \hline \end{array}$$

Subtraction Facts
Skill 1-3C

Subtracting from 4 and 5

Directions: Subtract. Use the number line to count back to subtract.
(subtract with pictures on pages 4 - 5)



1.

$5 - 2 =$

$5 - 4 =$

$5 - 1 =$

$4 - 3 =$

2.

$4 - 2 =$

$4 - 1 =$

$4 - 0 =$

$4 - 2 =$

3.

$4 - 3 =$

$4 - 1 =$

$4 - 2 =$

$4 - 0 =$

4.

$4 - 4 =$

$5 - 0 =$

$5 - 5 =$

$5 - 3 =$

5.

$4 - 3 =$

$5 - 3 =$

$5 - 1 =$

$4 - 4 =$

6.

$5 - 4 =$

$4 - 3 =$

$4 - 0 =$

$5 - 0 =$

7.

$5 - 4 =$

$4 - 1 =$

$4 - 3 =$

$4 - 2 =$

Subtraction Facts


Skill 1-3C

Subtracting from 4 and 5


Directions: Subtract. Cross out pictures to subtract.

1.

$4 - 0 =$



$4 - 3 =$




$4 - 1 =$




2.


$4 - 2 =$



$4 - 4 =$




$5 - 0 =$




3.


$5 - 1 =$



$5 - 4 =$




$5 - 3 =$




4.


$5 - 5 =$



$5 - 2 =$



$4 - 2 =$



5.

$4 - 1 =$



$5 - 0 =$



$5 - 2 =$



Subtraction Facts Skill 1-3C

Subtracting from 4 and 5


Directions: Subtract. Cross out pictures to subtract.

1.

$5 - 4 =$



$4 - 3 =$




$4 - 4 =$




2.


$5 - 1 =$



$5 - 3 =$




$5 - 2 =$




3.


$4 - 2 =$



$5 - 1 =$




$4 - 0 =$




4.


$5 - 2 =$



$5 - 5 =$




$4 - 4 =$




5.


$5 - 5 =$



$4 - 4 =$



$5 - 5 =$



Answer Key: Skill 1-3C

Page 1

1.	4	3	0	1	2
2.	3	0	2	1	3
3.	4	3	2	5	4
4.	4	5	1	0	4

Page 2

1.	5	4	3	1	3
2.	0	5	2	0	2
3.	3	4	2	3	1
4.	2	1	3	2	0

Page 3

1.	3	1	4	1
2.	2	3	4	2
3.	1	3	2	4
4.	0	5	0	2
5.	1	2	4	0
6.	1	1	4	5
7.	1	3	1	2

Page 4

1.	4	1	3
2.	2	0	5
3.	4	1	2
4.	0	3	2
5.	3	5	3

Page 5

1.	1	1	0
2.	4	2	3
3.	2	4	4
4.	3	0	0
5.	0	0	0