









## Subtraction Skill 1-3E

### Write a Subtraction Sentence

**Directions:** Look at the subtraction picture problem. Write a subtraction sentence.

Example	
<p>1.</p>  $\underline{6} \quad \square - \quad 2 \quad = \quad \underline{4}$	<p>2.</p>  $\underline{\quad} \quad \square - \quad \underline{\quad} \quad \square = \quad \underline{\quad}$
<p>3.</p>  $\underline{\quad} \quad \square - \quad \underline{\quad} \quad \square = \quad \underline{\quad}$	<p>4.</p>  $\underline{\quad} \quad \square - \quad \underline{\quad} \quad \square = \quad \underline{\quad}$
<p>5.</p>  $\underline{\quad} \quad \square - \quad \underline{\quad} \quad \square = \quad \underline{\quad}$	<p>6.</p>  $\underline{\quad} \quad \square - \quad \underline{\quad} \quad \square = \quad \underline{\quad}$
<p>7.</p>  $\underline{\quad} \quad \square - \quad \underline{\quad} \quad \square = \quad \underline{\quad}$	<p>8.</p>  $\underline{\quad} \quad \square - \quad \underline{\quad} \quad \square = \quad \underline{\quad}$

## Subtraction

### Skill 1-3E

### Write a Subtraction Sentence

**Directions:** Look at the subtraction picture problem. Write a subtraction sentence.

9.



\_\_\_\_\_  \_\_\_\_\_  \_\_\_\_\_

10.



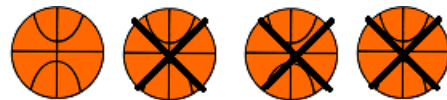
\_\_\_\_\_  \_\_\_\_\_  \_\_\_\_\_

11.



\_\_\_\_\_  \_\_\_\_\_  \_\_\_\_\_

12.



\_\_\_\_\_  \_\_\_\_\_  \_\_\_\_\_

13.



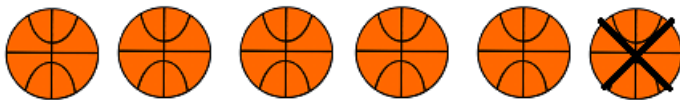
\_\_\_\_\_  \_\_\_\_\_  \_\_\_\_\_

14.



\_\_\_\_\_  \_\_\_\_\_  \_\_\_\_\_

15.



\_\_\_\_\_  \_\_\_\_\_  \_\_\_\_\_

16.



\_\_\_\_\_  \_\_\_\_\_  \_\_\_\_\_

## Subtraction

### Skill 1-3E

#### Write a Subtraction Sentence

**Directions:** Look at the subtraction picture problem. Write a subtraction sentence.

17.



\_\_\_\_\_  \_\_\_\_\_  \_\_\_\_\_

18.



\_\_\_\_\_  \_\_\_\_\_  \_\_\_\_\_

19.



\_\_\_\_\_  \_\_\_\_\_  \_\_\_\_\_

20.



\_\_\_\_\_  \_\_\_\_\_  \_\_\_\_\_

21.



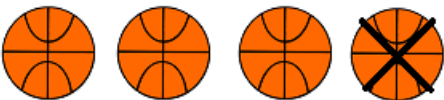
\_\_\_\_\_  \_\_\_\_\_  \_\_\_\_\_

22.



\_\_\_\_\_  \_\_\_\_\_  \_\_\_\_\_

23.



\_\_\_\_\_  \_\_\_\_\_  \_\_\_\_\_

24.



\_\_\_\_\_  \_\_\_\_\_  \_\_\_\_\_

Answer Key Skill 1-3E

1.  $6 - 2 = 4$

2.  $5 - 3 = 2$

3.  $6 - 4 = 2$

4.  $3 - 1 = 2$

5.  $4 - 2 = 2$

6.  $5 - 4 = 1$

7.  $2 - 1 = 1$

8.  $3 - 2 = 1$

9.  $6 - 5 = 1$

10.  $4 - 1 = 3$

11.  $5 - 2 = 3$

12.  $4 - 3 = 1$

13.  $5 - 1 = 4$

14.  $6 - 3 = 3$

15.  $6 - 1 = 5$

16.  $5 - 3 = 2$

17.  $3 - 2 = 1$

18.  $2 - 1 = 1$

19.  $5 - 4 = 1$

20.  $4 - 2 = 2$

21.  $3 - 1 = 2$

22.  $6 - 4 = 2$

23.  $4 - 1 = 3$

24.  $6 - 5 = 1$

Copyright © FreeMathProgram.com All rights reserved.