

Subtraction Facts: Skill 1- 4A

Subtracting from 7

Directions: Subtract. Use the number line to count back to subtract if needed.

(subtract with pictures on pages 4 - 5)

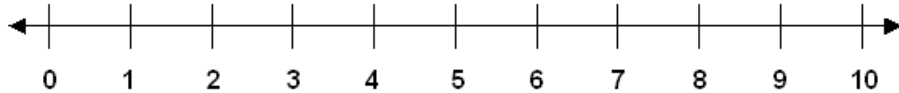


1. $\begin{array}{r} 7 \\ -0 \\ \hline \end{array}$	2. $\begin{array}{r} 7 \\ -1 \\ \hline \end{array}$	3. $\begin{array}{r} 7 \\ -5 \\ \hline \end{array}$	4. $\begin{array}{r} 7 \\ -6 \\ \hline \end{array}$	5. $\begin{array}{r} 7 \\ -4 \\ \hline \end{array}$
6. $\begin{array}{r} 7 \\ -2 \\ \hline \end{array}$	7. $\begin{array}{r} 7 \\ -3 \\ \hline \end{array}$	8. $\begin{array}{r} 7 \\ -7 \\ \hline \end{array}$	9. $\begin{array}{r} 7 \\ -5 \\ \hline \end{array}$	10. $\begin{array}{r} 7 \\ -3 \\ \hline \end{array}$
11. $\begin{array}{r} 7 \\ -4 \\ \hline \end{array}$	12. $\begin{array}{r} 7 \\ -7 \\ \hline \end{array}$	13. $\begin{array}{r} 7 \\ -5 \\ \hline \end{array}$	14. $\begin{array}{r} 7 \\ -6 \\ \hline \end{array}$	15. $\begin{array}{r} 7 \\ -4 \\ \hline \end{array}$
16. $\begin{array}{r} 7 \\ -6 \\ \hline \end{array}$	17. $\begin{array}{r} 7 \\ -7 \\ \hline \end{array}$	18. $\begin{array}{r} 7 \\ -3 \\ \hline \end{array}$	19. $\begin{array}{r} 7 \\ -5 \\ \hline \end{array}$	20. $\begin{array}{r} 7 \\ -2 \\ \hline \end{array}$
21. $\begin{array}{r} 7 \\ -2 \\ \hline \end{array}$	22. $\begin{array}{r} 7 \\ -1 \\ \hline \end{array}$	23. $\begin{array}{r} 7 \\ -4 \\ \hline \end{array}$	24. $\begin{array}{r} 7 \\ -7 \\ \hline \end{array}$	25. $\begin{array}{r} 7 \\ -0 \\ \hline \end{array}$

Subtraction Facts: Skill 1- 4A

Subtracting from 7

Directions: Subtract. Use the number line to count back to subtract if needed.
(subtract with pictures on pages 4 - 5)



26.

$$\begin{array}{r} 7 \\ -4 \\ \hline \end{array}$$

27.

$$\begin{array}{r} 7 \\ -1 \\ \hline \end{array}$$

28.

$$\begin{array}{r} 7 \\ -6 \\ \hline \end{array}$$

29.

$$\begin{array}{r} 7 \\ -5 \\ \hline \end{array}$$

30.

$$\begin{array}{r} 7 \\ -0 \\ \hline \end{array}$$

31.

$$\begin{array}{r} 7 \\ -7 \\ \hline \end{array}$$

32.

$$\begin{array}{r} 7 \\ -3 \\ \hline \end{array}$$

33.

$$\begin{array}{r} 7 \\ -1 \\ \hline \end{array}$$

34.

$$\begin{array}{r} 7 \\ -3 \\ \hline \end{array}$$

35.

$$\begin{array}{r} 7 \\ -6 \\ \hline \end{array}$$

36.

$$\begin{array}{r} 7 \\ -2 \\ \hline \end{array}$$

37.

$$\begin{array}{r} 7 \\ -4 \\ \hline \end{array}$$

38.

$$\begin{array}{r} 7 \\ -7 \\ \hline \end{array}$$

39.

$$\begin{array}{r} 7 \\ -0 \\ \hline \end{array}$$

40.

$$\begin{array}{r} 7 \\ -1 \\ \hline \end{array}$$

41.

$$\begin{array}{r} 7 \\ -5 \\ \hline \end{array}$$

42.

$$\begin{array}{r} 7 \\ -3 \\ \hline \end{array}$$

43.

$$\begin{array}{r} 7 \\ -7 \\ \hline \end{array}$$

44.

$$\begin{array}{r} 7 \\ -4 \\ \hline \end{array}$$

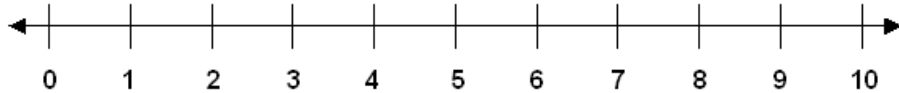
45.

$$\begin{array}{r} 7 \\ -2 \\ \hline \end{array}$$

Subtraction Facts: Skill 1- 4A

Subtracting from 7

Directions: Subtract. Use the number line to count back to subtract if needed.
(subtract with pictures on pages 4 - 5)



46.

$7 - 1 =$

47.

$7 - 5 =$

48.

$7 - 3 =$

49.

$7 - 7 =$

50.

$7 - 4 =$

51.

$7 - 2 =$

52.

$7 - 6 =$

53.

$7 - 0 =$

54.

$7 - 3 =$

55.

$7 - 1 =$

56.

$7 - 5 =$

57.

$7 - 7 =$

58.

$7 - 0 =$

59.

$7 - 4 =$

60.

$7 - 2 =$

61.

$7 - 6 =$

62.

$7 - 0 =$

63.

$7 - 3 =$

64.

$7 - 1 =$

65.

$7 - 7 =$

66.

$7 - 5 =$

67.

$7 - 2 =$

68.

$7 - 6 =$

69.

$7 - 4 =$

70.

$7 - 0 =$

71.

$7 - 1 =$

72.

$7 - 5 =$

73.

$7 - 3 =$


Subtraction Facts: Skill 1- 4A

Subtracting from 7

Directions: Subtract. Cross out pictures to subtract.

1.

$7 - 7 =$



2.

$7 - 4 =$




3.

$7 - 2 =$




4.

$7 - 1 =$




5.

$7 - 6 =$




6.

$7 - 3 =$




7.

$7 - 5 =$




8.

$7 - 7 =$



9.

$7 - 1 =$




10..

$7 - 0 =$



11.

$7 - 6 =$



12.

$7 - 2 =$



13.

$7 - 4 =$



14.

$7 - 7 =$



15.

$7 - 5 =$



16.

$7 - 3 =$



17.

$7 - 0 =$



18.

$7 - 7 =$



Subtraction Facts: Skill 1- 4A

Subtracting from 7

Directions: Subtract. Cross out pictures to subtract.


19.

$7 - 3 =$



20.

$7 - 1 =$



21.

$7 - 2 =$




22.

$7 - 4 =$




23.

$7 - 0 =$




24.

$7 - 6 =$



25.

$7 - 7 =$



26.

$7 - 3 =$



27.

$7 - 5 =$




28.

$7 - 1 =$




29.

$7 - 2 =$




30.

$7 - 0 =$



31.

$7 - 6 =$



32.

$7 - 4 =$



33.

$7 - 1 =$



34.

$7 - 5 =$



35.

$7 - 2 =$



36.

$7 - 7 =$



Answer Key: Skill 1-4A

1. 7	2. 6	3. 2	4. 1	5. 3
6. 5	7. 4	8. 0	9. 2	10. 4
11. 3	12. 0	13. 2	14. 1	15. 3
16. 1	17. 0	18. 4	19. 2	20. 5
21. 5	22. 6	23. 3	24. 0	25. 7
26. 3	27. 6	28. 1	29. 2	30. 7
31. 0	32. 4	33. 6	34. 4	35. 1
36. 5	37. 3	38. 0	39. 7	40. 6
41. 2	42. 4	43. 0	44. 3	45. 5
46. 6	47. 2	48. 4	49. 0	
50. 3	51. 5	52. 1	53. 7	
54. 4	55. 6	56. 2	57. 0	
58. 7	59. 3	60. 5	61. 1	
62. 7	63. 4	64. 6	65. 0	
66. 2	67. 5	68. 1	69. 3	
70. 7	71. 6	72. 2	73. 4	
1. 0	2. 3	3. 5		
4. 6	5. 1	6. 4		
7. 2	8. 0	9. 6		
10. 7	11. 1	12. 5		
13. 3	14. 0	15. 2		
16. 4	17. 7	18. 0		
19. 4	20. 6	21. 5		
22. 3	23. 7	24. 1		
25. 0	26. 4	27. 2		
28. 6	29. 5	30. 7		
31. 1	32. 3	33. 6		
34. 2	35. 5	36. 0		