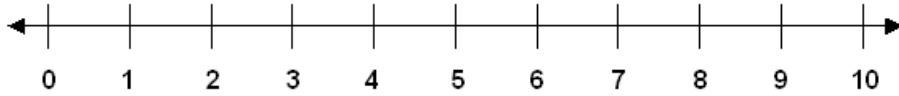


Subtraction Facts: Skill 1- 4C

Subtracting from 9

Directions: Subtract. Use the number line to count back to subtract if needed.
(subtract with pictures on pages 4 - 5)

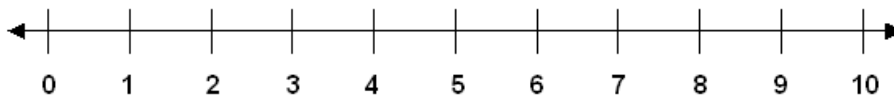


1. $\begin{array}{r} 9 \\ -4 \\ \hline \end{array}$	2. $\begin{array}{r} 9 \\ -7 \\ \hline \end{array}$	3. $\begin{array}{r} 9 \\ -2 \\ \hline \end{array}$	4. $\begin{array}{r} 9 \\ -9 \\ \hline \end{array}$	5. $\begin{array}{r} 9 \\ -6 \\ \hline \end{array}$
6. $\begin{array}{r} 9 \\ -1 \\ \hline \end{array}$	7. $\begin{array}{r} 9 \\ -8 \\ \hline \end{array}$	8. $\begin{array}{r} 9 \\ -3 \\ \hline \end{array}$	9. $\begin{array}{r} 9 \\ -5 \\ \hline \end{array}$	10. $\begin{array}{r} 9 \\ -0 \\ \hline \end{array}$
11. $\begin{array}{r} 9 \\ -6 \\ \hline \end{array}$	12. $\begin{array}{r} 9 \\ -1 \\ \hline \end{array}$	13. $\begin{array}{r} 9 \\ -8 \\ \hline \end{array}$	14. $\begin{array}{r} 9 \\ -3 \\ \hline \end{array}$	15. $\begin{array}{r} 9 \\ -2 \\ \hline \end{array}$
16. $\begin{array}{r} 9 \\ -5 \\ \hline \end{array}$	17. $\begin{array}{r} 9 \\ -4 \\ \hline \end{array}$	18. $\begin{array}{r} 9 \\ -7 \\ \hline \end{array}$	19. $\begin{array}{r} 9 \\ -9 \\ \hline \end{array}$	20. $\begin{array}{r} 9 \\ -0 \\ \hline \end{array}$
21. $\begin{array}{r} 9 \\ -1 \\ \hline \end{array}$	22. $\begin{array}{r} 9 \\ -2 \\ \hline \end{array}$	23. $\begin{array}{r} 9 \\ -8 \\ \hline \end{array}$	24. $\begin{array}{r} 9 \\ -4 \\ \hline \end{array}$	25. $\begin{array}{r} 9 \\ -9 \\ \hline \end{array}$

Subtraction Facts: Skill 1- 4C

Subtracting from 9

Directions: Subtract. Use the number line to count back to subtract if needed.
(subtract with pictures on pages 4 - 5)



26.

$$\begin{array}{r} 9 \\ -8 \\ \hline \end{array}$$

27.

$$\begin{array}{r} 9 \\ -5 \\ \hline \end{array}$$

28.

$$\begin{array}{r} 9 \\ -4 \\ \hline \end{array}$$

29.

$$\begin{array}{r} 9 \\ -1 \\ \hline \end{array}$$

30.

$$\begin{array}{r} 9 \\ -2 \\ \hline \end{array}$$

31.

$$\begin{array}{r} 9 \\ -7 \\ \hline \end{array}$$

32.

$$\begin{array}{r} 9 \\ -6 \\ \hline \end{array}$$

33.

$$\begin{array}{r} 9 \\ -3 \\ \hline \end{array}$$

34.

$$\begin{array}{r} 9 \\ -0 \\ \hline \end{array}$$

35.

$$\begin{array}{r} 9 \\ -9 \\ \hline \end{array}$$

36.

$$\begin{array}{r} 9 \\ -7 \\ \hline \end{array}$$

37.

$$\begin{array}{r} 9 \\ -8 \\ \hline \end{array}$$

38.

$$\begin{array}{r} 9 \\ -1 \\ \hline \end{array}$$

39.

$$\begin{array}{r} 9 \\ -4 \\ \hline \end{array}$$

40.

$$\begin{array}{r} 9 \\ -9 \\ \hline \end{array}$$

41.

$$\begin{array}{r} 9 \\ -2 \\ \hline \end{array}$$

42.

$$\begin{array}{r} 9 \\ -3 \\ \hline \end{array}$$

43.

$$\begin{array}{r} 9 \\ -6 \\ \hline \end{array}$$

44.

$$\begin{array}{r} 9 \\ -0 \\ \hline \end{array}$$

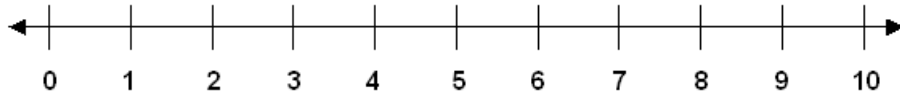
45.

$$\begin{array}{r} 9 \\ -5 \\ \hline \end{array}$$

Subtraction Facts: Skill 1- 4C

Subtracting from 9

Directions: Subtract. Use the number line to count back to subtract if needed.
(subtract with pictures on pages 4 - 5)



46.
 $9 - 7 =$

47.
 $9 - 2 =$

48.
 $9 - 4 =$

49.
 $9 - 5 =$

50.
 $9 - 3 =$

51.
 $9 - 1 =$

52.
 $9 - 6 =$

53.
 $9 - 8 =$

54.
 $9 - 0 =$

55.
 $9 - 9 =$

56.
 $9 - 2 =$

57.
 $9 - 7 =$

58.
 $9 - 6 =$

59.
 $9 - 3 =$

60.
 $9 - 5 =$

61.
 $9 - 8 =$

62.
 $9 - 4 =$

63.
 $9 - 1 =$

64.
 $9 - 0 =$

65.
 $9 - 8 =$

66.
 $9 - 2 =$

67.
 $9 - 3 =$

68.
 $9 - 1 =$

69.
 $9 - 6 =$

70.
 $9 - 4 =$

71.
 $9 - 5 =$

72.
 $9 - 9 =$

73.
 $9 - 7 =$


Subtraction Facts: Skill 1- 4C

Subtracting from 9

Directions: Subtract. Cross out the pictures that you subtract.

74.

$9 - 2 =$




75.

$9 - 8 =$



76.

$9 - 1 =$



77.

$9 - 7 =$



78.

$9 - 4 =$



79.

$9 - 3 =$



80.

$9 - 9 =$



81.

$9 - 5 =$



82.

$9 - 0 =$



83.

$9 - 6 =$



84.

$9 - 3 =$




85.

$9 - 5 =$



86.

$9 - 4 =$



87.

$9 - 8 =$



88.

$9 - 1 =$



Subtraction Facts: Skill 1- 4C

Subtracting from 9

Directions: Subtract. Cross out the pictures that you subtract.


89.

$9 - 7 =$



90.

$9 - 6 =$



91.

$9 - 4 =$



92.

$9 - 0 =$



93.

$9 - 3 =$




94.

$9 - 7 =$




95.

$9 - 8 =$




96.

$9 - 6 =$



97.

$9 - 1 =$



98.

$9 - 5 =$



99.

$9 - 4 =$



100.

$9 - 2 =$



101.

$9 - 9 =$



102.

$9 - 3 =$



103.

$9 - 5 =$



Answer Key 1- 4C

1.	5	2.	2	3.	7	4.	0	5.	3
6.	8	7.	1	8.	6	9.	4	10.	9
11.	3	12.	8	13.	1	14.	6	15.	7
16.	4	17.	5	18.	2	19.	0	20.	9
21.	8	22.	7	23.	1	24.	5	25.	0
26.	1	27.	4	28.	5	29.	8	30.	7
31.	2	32.	3	33.	6	34.	9	35.	0
36.	2	37.	1	38.	8	39.	5	40.	0
41.	7	42.	6	43.	3	44.	9	45.	4
46.	2	47.	7	48.	5	49.	4		
50.	6	51.	8	52.	3	53.	1		
54.	9	55.	0	56.	7	57.	2		
58.	3	59.	6	60.	4	61.	1		
62.	5	63.	8	64.	9	65.	1		
66.	7	67.	6	68.	8	69.	3		
70.	5	71.	4	72.	0	73.	2		
74.	7	75.	1	76.	8				
77.	2	78.	5	79.	6				
80.	0	81.	4	82.	9				
83.	3	84.	6	85.	4				
86.	5	87.	1	88.	8				
89.	2	90.	3	91.	5				
92.	9	93.	6	94.	2				
95.	1	96.	3	97.	8				
98.	4	99.	5	100.	7				
101.	0	102.	6	103.	4				