

Place Value

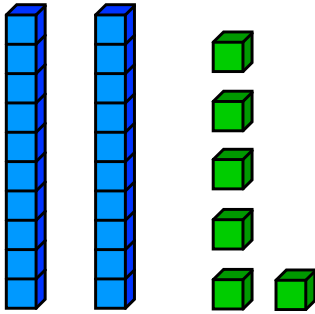
Skill 1-9B

Tens and Ones

Print in black and white or color.

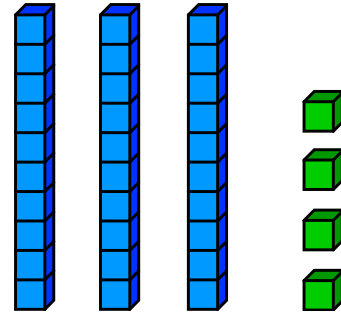
Directions: Write how many tens and ones and then write the number.

Example



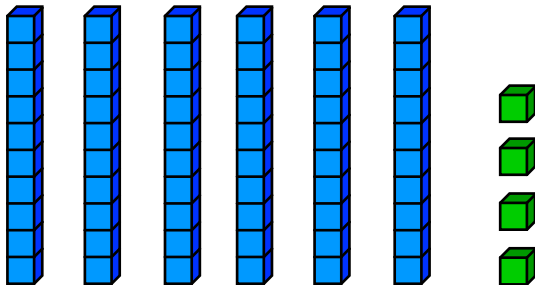
$$\underline{2} \text{ tens } \underline{6} \text{ ones } = \underline{26}$$

1.



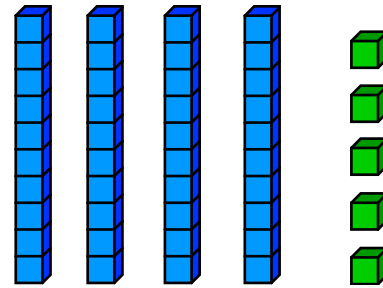
$$\underline{\quad} \text{ tens } \underline{\quad} \text{ ones } = \underline{\quad}$$

2.



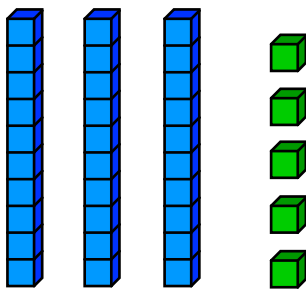
$$\underline{\quad} \text{ tens } \underline{\quad} \text{ ones } = \underline{\quad}$$

3.



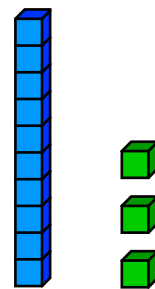
$$\underline{\quad} \text{ tens } \underline{\quad} \text{ ones } = \underline{\quad}$$

4.



$$\underline{\quad} \text{ tens } \underline{\quad} \text{ ones } = \underline{\quad}$$

5.



$$\underline{\quad} \text{ tens } \underline{\quad} \text{ ones } = \underline{\quad}$$

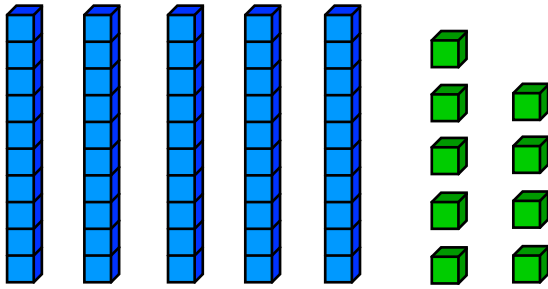
Place Value

Skill 1-9B

Tens and Ones

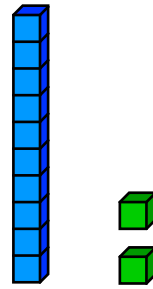
Directions: Write how many tens and ones and then write the number.

6.



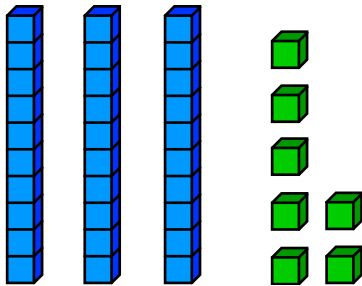
_____ tens _____ ones = _____

7.



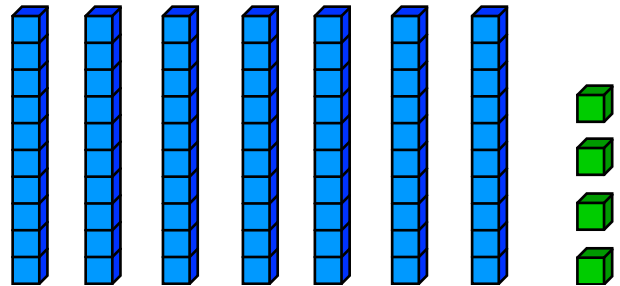
_____ tens _____ ones = _____

8.



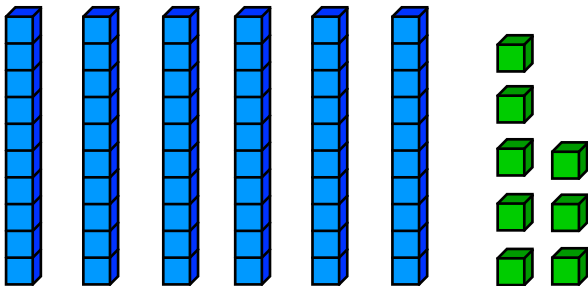
_____ tens _____ ones = _____

9.



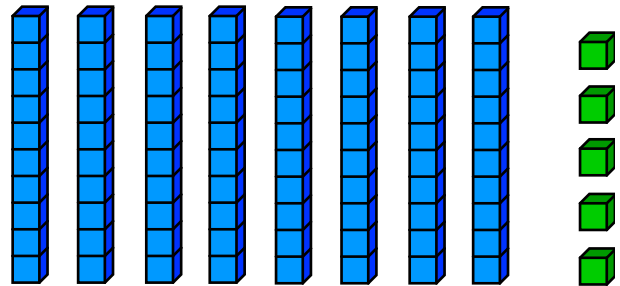
_____ tens _____ ones = _____

10.



_____ tens _____ ones = _____

11.



_____ tens _____ ones = _____


Place Value

Skill 1-9B

Tens and Ones

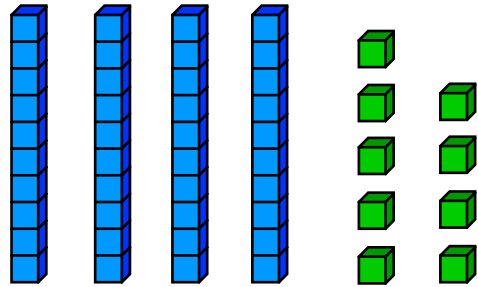
Directions: Write how many tens and ones and then write the number.

12.



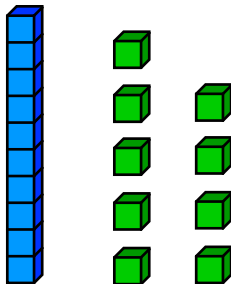
_____ tens _____ ones = _____

13.



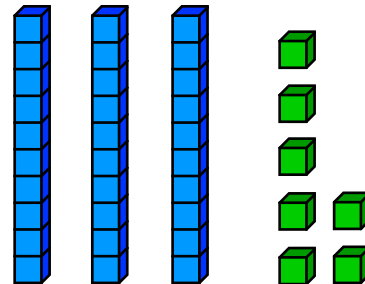
_____ tens _____ ones = _____

14.



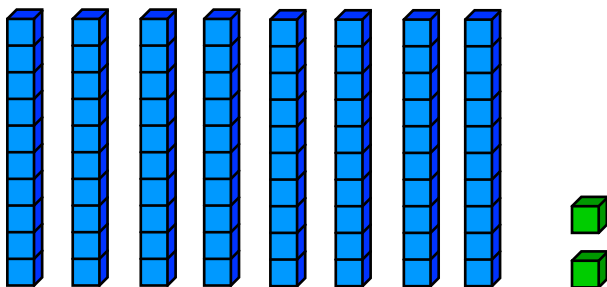
_____ tens _____ ones = _____

15.



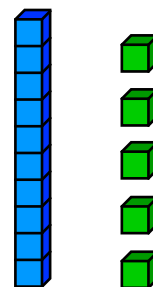
_____ tens _____ ones = _____

16.



_____ tens _____ ones = _____

17.



_____ tens _____ ones = _____

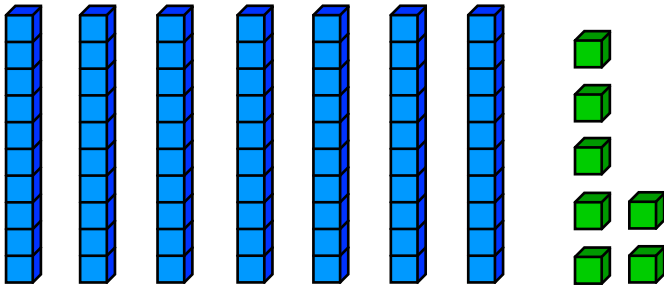
Place Value

Skill 1-9B

Tens and Ones

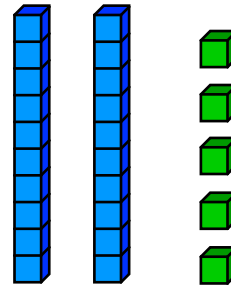
Directions: Write how many tens and ones and then write the number.

18.



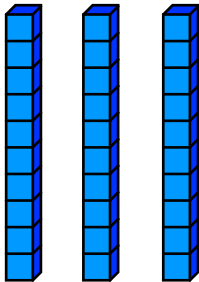
_____ tens _____ ones = _____

19.



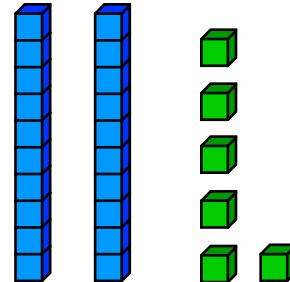
_____ tens _____ ones = _____

20.



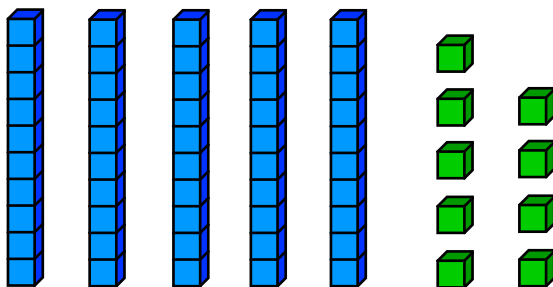
_____ tens _____ ones = _____

21.



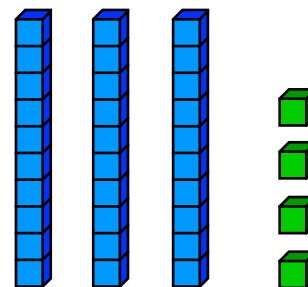
_____ tens _____ ones = _____

22.



_____ tens _____ ones = _____

23.



_____ tens _____ ones = _____

Answer Key
Skill 1-9B

<p>Example</p> <p>2 tens 6 ones = 26</p>	<p>1.</p> <p>3 tens 4 ones = 34</p>
<p>2.</p> <p>6 tens 4 ones = 64</p>	<p>3.</p> <p>4 tens 5 ones = 45</p>
<p>4.</p> <p>3 tens 5 ones = 35</p>	<p>5.</p> <p>1 ten 3 ones = 13</p>
<p>6.</p> <p>5 tens 9 ones = 59</p>	<p>7.</p> <p>1 ten 2 ones = 12</p>
<p>8.</p> <p>3 tens 7 ones = 37</p>	<p>9.</p> <p>7 tens 4 ones = 74</p>
<p>10.</p> <p>6 tens 8 ones = 68</p>	<p>11.</p> <p>8 tens 5 ones = 85</p>
<p>12.</p> <p>9 tens 3 ones = 93</p>	<p>13.</p> <p>4 tens 9 ones = 49</p>
<p>14..</p> <p>1 ten 9 ones = 19</p>	<p>15.</p> <p>3 tens 7 ones = 37</p>
<p>16..</p> <p>8 tens 2 ones = 82</p>	<p>17.</p> <p>1 ten 5 ones = 15</p>
<p>18.</p> <p>7 tens 7 ones = 77</p>	<p>19.</p> <p>2 tens 5 ones = 25</p>
<p>20.</p> <p>3 tens 0 ones = 30</p>	<p>21.</p> <p>2 tens 6 ones = 26</p>
<p>22.</p> <p>5 tens 9 ones = 59</p>	<p>23.</p> <p>3 tens 4 ones = 34</p>