

Number Patterns
Skill 1-11A

Skip Count by 2s

Directions: Count by 2s. Color or circle the twos. Some of the 2s are colored for you.

1	2	3	4	5	6	7	8	9	10
---	---	---	---	---	---	---	---	---	----

11	12	13	14	15	16	17	18	19	20
----	----	----	----	----	----	----	----	----	----

21	22	23	24	25	26	27	28	29	30
----	----	----	----	----	----	----	----	----	----

31	32	33	34	35	36	37	38	39	40
----	----	----	----	----	----	----	----	----	----

41	42	43	44	45	46	47	48	49	50
----	----	----	----	----	----	----	----	----	----

51	52	53	54	55	56	57	58	59	60
----	----	----	----	----	----	----	----	----	----

61	62	63	64	65	66	67	68	69	70
----	----	----	----	----	----	----	----	----	----

71	72	73	74	75	76	77	78	79	80
----	----	----	----	----	----	----	----	----	----

81	82	83	84	85	86	87	88	89	90
----	----	----	----	----	----	----	----	----	----

91	92	93	94	95	96	97	98	99	100
----	----	----	----	----	----	----	----	----	-----

Number Patterns
Skill 1-11A**Skip Count by 2s****Directions:** Count by 2s. Color or circle the twos. Fill in the missing numbers.

1	2	3	4	5		7		9	10
---	---	---	---	---	--	---	--	---	----

11		13	14	15	16	17		19	20
----	--	----	----	----	----	----	--	----	----

21	22	23		25		27		29	30
----	----	----	--	----	--	----	--	----	----

31		33	34	35		37	38	39	
----	--	----	----	----	--	----	----	----	--

41	42	43		45		47		49	50
----	----	----	--	----	--	----	--	----	----

51		53	54	55	56	57		59	
----	--	----	----	----	----	----	--	----	--

61	62	63		65		67		69	70
----	----	----	--	----	--	----	--	----	----

71		73	74	75		77	78	79	
----	--	----	----	----	--	----	----	----	--

81		83	84	85		87		89	90
----	--	----	----	----	--	----	--	----	----

91	92	93		95		97		99	100
----	----	----	--	----	--	----	--	----	-----

Number Patterns
Skill 1-11A**Skip Count by 2s****Directions:** Count by 2s. Write the missing numbers.

2	4	6		10
---	---	---	--	----

12				20
----	--	--	--	----

	24		28	
--	----	--	----	--

				40
--	--	--	--	----

42				
----	--	--	--	--

			58	
--	--	--	----	--

				70
--	--	--	--	----

72		76		
----	--	----	--	--

	84		88	
--	----	--	----	--

		96		
--	--	----	--	--

Number Patterns
Skill 1-11A

Skip Count by 2s

Directions: Each penguin = 2. Count by 2s and write the total. The first one is done for you.

1.  = 10

2.  = _____

3.  = _____

4.  = _____

5.  = _____

6.  = _____

7.  = _____

8.  = _____

Answer Key Skill 1-11A

Directions: Count by 5s. Color or circle the fives.

1	2	3	4	5	6	7	8	9	10
11	12	13	14	15	16	17	18	19	20
21	22	23	24	25	26	27	28	29	30
31	32	33	34	35	36	37	38	39	40
41	42	43	44	45	46	47	48	49	50
51	52	53	54	55	56	57	58	59	60
61	62	63	64	65	66	67	68	69	70
71	72	73	74	75	76	77	78	79	80
81	82	83	84	85	86	87	88	89	90
91	92	93	94	95	96	97	98	99	100









Pg 2 Directions: Count by 5s. Fill in the missing numbers.

1	2	3	4	5	6	7	8	9	10
11	12	13	14	15	16	17	18	19	20
21	22	23	24	25	26	27	28	29	30
31	32	33	34	35	36	37	38	39	40
41	42	43	44	45	46	47	48	49	50
51	52	53	54	55	56	57	58	59	60
61	62	63	64	65	66	67	68	69	70
71	72	73	74	75	76	77	78	79	80
81	82	83	84	85	86	87	88	89	90
91	92	93	94	95	96	97	98	99	100

Pg 3 Directions: Count by 5s. Write the missing numbers.

2	4	6	8	10
12	14	16	18	20
22	24	26	28	30
32	34	36	38	40
42	44	46	48	50
52	54	56	58	60
62	64	66	68	70
72	74	76	78	80
82	84	86	88	90
92	94	96	98	100

Directions: Each  = 5. Count by 5s and write the total.

1.  = 10
2.  = 6
3.  = 12
4.  = 8
5.  = 10
6.  = 12
7.  = 16
8.  = 20