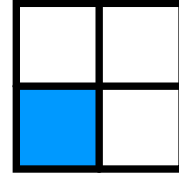


Fractions
Skill 1-20B

One Fourth

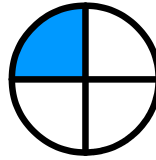


This shape has 4 equal parts.

$\frac{1}{4}$ is shaded or one fourth is shaded.


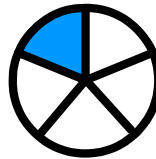
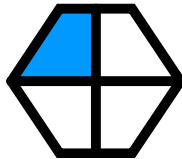
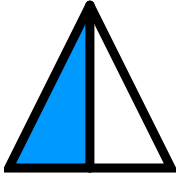


Four equal parts are called fourths.


1. Circle the shapes that have one fourth shaded.



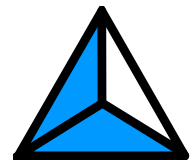
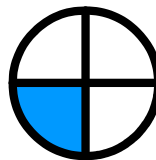

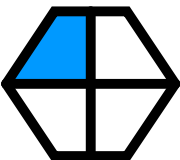
2. Circle the shapes that have $\frac{1}{4}$ shaded.



3. Circle the shapes that have one fourth shaded.



4. Circle the shapes that have $\frac{1}{4}$ shaded.




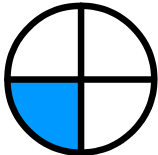


Fractions
Skill 1-20B







One Fourth

Four equal parts are called fourths.


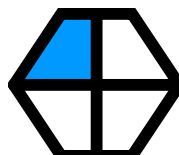
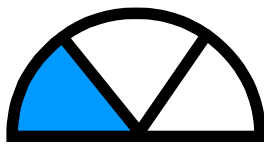
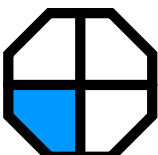
5. Circle the shapes that have one fourth shaded.

6. Circle the shapes that have $\frac{1}{4}$ shaded.

7. Circle the shapes that have one fourth shaded.

8. Circle the shapes that have $\frac{1}{4}$ shaded.


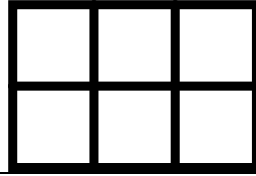



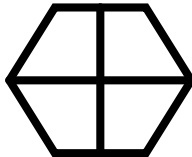
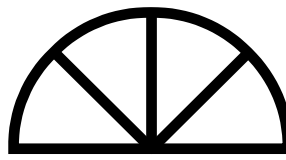
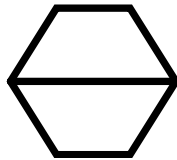
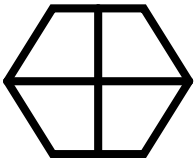

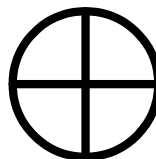
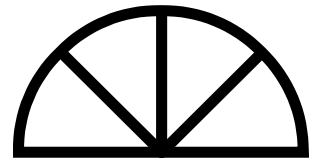



9. Circle the shapes that have one fourth shaded.



Fractions
Skill 1-20B

One Fourth





































Four equal parts are called fourths.

10. Find the shapes that show fourths. Then color $\frac{1}{4}$.11. Find the shapes that show fourths. Then color $\frac{1}{4}$.12. Find the shapes that show fourths. Then color $\frac{1}{4}$.13. Find the shapes that show fourths. Then color $\frac{1}{4}$.14. Find the shapes that show fourths. Then color $\frac{1}{4}$.

Answer Key

Skill 1-20B

Shapes with one fourth shaded have a star beside them.

| | | | |
|--|---|--|---|
| <p>1. Circle the shapes that have one fourth shaded.</p>  |  |  |  |
| <p>2. Circle the shapes that have $\frac{1}{4}$ shaded.</p> | | | |
|  |  |  |  |
| <p>3. Circle the shapes that have one fourth shaded.</p> | | | |
|  |  |  |  |
| <p>4. Circle the shapes that have $\frac{1}{4}$ shaded.</p> | | | |
|  |  |  |  |
| <p>5. Circle the shapes that have one fourth shaded.</p> | | | |
|  |  |  |  |
| <p>6. Circle the shapes that have $\frac{1}{4}$ shaded.</p> | | | |
|  |  |  |  |
| <p>7. Circle the shapes that have one fourth shaded.</p> | | | |
|  |  |  |  |
| <p>8. Circle the shapes that have $\frac{1}{4}$ shaded.</p> | | | |
|  |  |  |  |
| <p>9. Circle the shapes that have one fourth shaded.</p> | | | |
|  |  |  |  |