


Money Skill

1- 21C

Nickels and Pennies

Directions: Count by fives. Write the total in the box. Complete problem number 1 first.


1.



5 ¢ 10 ¢ ¢ ¢ ¢ ¢

¢


2.



 ¢ ¢ ¢

¢


3.



 ¢ ¢ ¢ ¢

¢

4.



 ¢ ¢ ¢ ¢ ¢


¢

Money Skill 1- 21C

Nickels and Pennies


Directions: Count by fives and ones. Write the total in the box.

5.

¢


_____ ¢
_____ ¢
_____ ¢
_____ ¢
_____ ¢

6.

¢


_____ ¢
_____ ¢
_____ ¢
_____ ¢
_____ ¢

7.

¢

_____ ¢
_____ ¢
_____ ¢
_____ ¢
_____ ¢

8.

¢

_____ ¢
_____ ¢
_____ ¢
_____ ¢
_____ ¢

Money Skill 1- 21C

Nickels and Pennies

Directions: Count by fives and ones. Write the total in the box.

9.



_____ ¢ _____ ¢ _____ ¢ _____ ¢ _____ ¢ _____ ¢

¢

10.



_____ ¢ _____ ¢ _____ ¢ _____ ¢ _____ ¢

¢

11.



_____ ¢ _____ ¢ _____ ¢ _____ ¢ _____ ¢

¢

12.



_____ ¢ _____ ¢ _____ ¢ _____ ¢ _____ ¢

¢

Answer Key
Skill 1-21C

Pg 1

1. 30¢ 2. 15¢ 3. 20¢ 4. 25¢

Pg 2

5. 9¢ 6. 17¢ 7. 13¢ 8. 9¢

Pg 3

9. 22¢ 10. 17¢ 11. 9¢ 12. 13¢

Copyright © freemathprogram.com All rights reserved.