


Money
Skill 1- 21E

Dimes and Pennies

Directions: Count by tens. Write the total in the box. Complete problem number 1 first.


1.



10 ¢ 20 ¢ _____ ¢ _____ ¢ _____ ¢ _____ ¢

¢


2.



_____ ¢ _____ ¢ _____ ¢

¢


3.



_____ ¢ _____ ¢ _____ ¢ _____ ¢

¢

4.



_____ ¢ _____ ¢ _____ ¢ _____ ¢ _____ ¢

¢

Money

Skill 1- 21E

Dimes and Pennies

Directions: Count by tens and ones. Write the total in the box.

5.



¢

_____ ¢ _____ ¢ _____ ¢ _____ ¢ _____ ¢

6.



¢

_____ ¢ _____ ¢ _____ ¢ _____ ¢ _____ ¢

7.



¢

_____ ¢ _____ ¢ _____ ¢ _____ ¢ _____ ¢

8.



¢



_____ ¢ _____ ¢ _____ ¢ _____ ¢ _____ ¢

Money Skill 1- 21E

Dimes and Pennies



Directions: Count by tens and ones. Write the total in the box.

9.


¢



_____ ¢
_____ ¢
_____ ¢
_____ ¢
_____ ¢
_____ ¢

10.


¢



_____ ¢
_____ ¢
_____ ¢
_____ ¢
_____ ¢

11.


¢

_____ ¢
_____ ¢
_____ ¢
_____ ¢
_____ ¢

12.


¢

_____ ¢
_____ ¢
_____ ¢
_____ ¢
_____ ¢

Answer Key
Skill 1-21E

Pg 1

1. 60¢ 2. 30¢ 3. 40¢ 4. 50¢

Pg 2

5. 14¢ 6. 32¢ 7. 23¢ 8. 14¢

Pg 3

9. 42¢ 10. 32¢ 11. 14¢ 12. 23¢

Copyright © freemathprogram.com All rights reserved.