
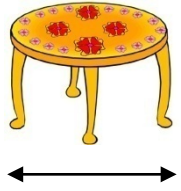
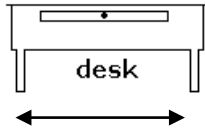
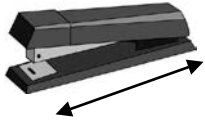

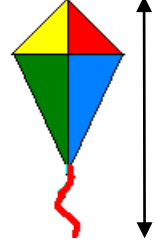



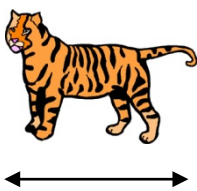




Measurement
Skill 1- 25D

Inches and Feet

Directions: Circle the best answer.

<p>1.</p>  <p>11 inches</p> <p>11 feet</p>	<p>2.</p>  <p>2 inches</p> <p>2 feet</p>	<p>3.</p>  <p>4 inches</p> <p>4 feet</p>
<p>4.</p>  <p>6 inches</p> <p>6 feet</p>	<p>5.</p>  <p>12 inches</p> <p>12 feet</p>	<p>6.</p>  <p>3 inches</p> <p>3 feet</p>
<p>7.</p>  <p>5 inches</p> <p>5 feet</p>	<p>8.</p>  <p>1 inch</p> <p>1 foot</p>	<p>9.</p>  <p>5 inches</p> <p>5 feet</p>
<p>10.</p>  <p>8 inches</p> <p>8 feet</p>	<p>11.</p>  <p>12 inches</p> <p>12 feet</p>	<p>12.</p>  <p>12 inches</p> <p>12 feet</p>

Answer Key
Skill 1- 25D

Pg 1

- | | | | |
|--------------|------------|---------------|---------------|
| 1. 11 inches | 2. 2 feet | 3. 4 feet | 4. 6 inches |
| 5. 12 inches | 6. 3 feet | 7. 5 inches | 8. 1 inch |
| 9. 5 inches | 10. 8 feet | 11. 12 inches | 12. 12 inches |

Copyright © freemathprogram.com All rights reserved.