

Measurement
Skill 1- 25E

Centimeters

Directions: First, estimate how many centimeters long each pencil is. Then, use a centimeter ruler to measure each pencil.

1.



Estimate: about _____ centimeters

Measure: about _____ centimeters


2.



Estimate: about _____ centimeters

Measure: about _____ centimeters

3.



Estimate: about _____ centimeters

Measure: about _____ centimeters


4.



Estimate: about _____ centimeters

Measure: about _____ centimeters

5.



Estimate: about _____ centimeters

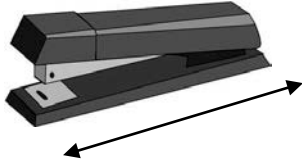
Measure: about _____ centimeters

Measurement
Skill 1- 25E

Centimeters

Directions: First, estimate how many centimeters long each object is. Then, use a centimeter ruler to measure each object.

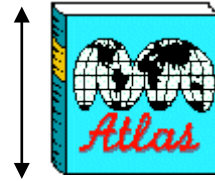
6.



Estimate: about _____ centimeters

Measure: about _____ centimeters

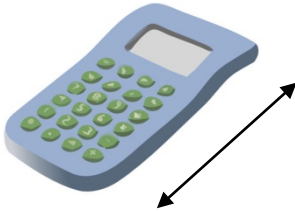
7.



Estimate: about _____ centimeters

Measure: about _____ centimeters

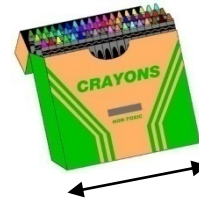
8.



Estimate: about _____ centimeters

Measure: about _____ centimeters


9.



Estimate: about _____ centimeters

Measure: about _____ centimeters

10.



Estimate: about _____ centimeters

Measure: about _____ centimeters

11.



Estimate: about _____ centimeters

Measure: about _____ centimeters

Answer Key
Skill 1- 25E

Differences in computers and printers may cause varied results.

Pg 1

1. Measure: about 5 centimeters
2. Measure: about 10 centimeters
3. Measure: about 15 centimeters
4. Measure: about 8 centimeters
5. Measure: about 13 centimeters

Copyright © freemathprogram.com All rights reserved.