

Name _____

Date _____









Counting
Skill 2 - 1D

Print in black and white or color.









Counting by 5's using Pictures

Directions: Count by 5's using the pictures below. Write the number below each group of pictures as you count.









1.

 <u>5</u>	 <u>10</u>	 _____	 _____	 _____	 _____	 _____	 _____
---	--	--	--	--	---	--	--









2.

 <u>45</u>	 <u>50</u>	 _____	 _____	 _____	 _____	 _____	 _____
---	---	---	---	---	--	---	---

3.

 <u>20</u>	 _____	 _____	 _____	 _____	 _____	 _____	 _____
--	--	--	--	--	---	--	--

4.

 <u>50</u>	 _____	 _____	 _____	 _____	 _____	 _____	 _____
--	--	--	--	--	---	--	--

Name _____









Date _____

Counting
Skill 2 - 1D









Counting by 5's using Pictures

Directions: Count by 5's using the pictures below. Write the number below each group of pictures as you count.









5.

 <u>10</u>	 _____	 _____	 _____	 _____	 _____	 _____	 _____
--	--	--	--	--	---	--	--









6.

 <u>35</u>	 <u>40</u>	 _____	 _____	 _____	 _____	 _____	 _____
--	--	--	--	--	---	--	--

7.

 <u>45</u>	 _____	 _____	 _____	 _____	 _____	 _____	 _____
--	--	--	--	--	---	--	--

8.

 <u>60</u>	 _____	 _____	 _____	 _____	 _____	 _____	 _____
--	--	--	--	--	---	--	--

Name _____









Date _____

Counting Skill 2 - 1D









Counting by 5's using Pictures

Directions: Count by 5's using the pictures below. Write the number below each group of pictures as you count.









9.

 <u>15</u>	 <u>20</u>	 _____	 _____	 _____	 _____	 _____	 _____
--	--	--	--	--	---	--	--









10.

 <u>25</u>	 _____	 _____	 _____	 _____	 _____	 _____	 _____
--	--	--	--	--	---	--	--

11.

 <u>30</u>	 _____	 _____	 _____	 _____	 _____	 _____	 _____
--	--	--	--	--	---	--	--

12.

 <u>65</u>	 _____	 _____	 _____	 _____	 _____	 _____	 _____
--	--	--	--	--	---	--	--

Answer Key
Skill 2 -1D

Pg 1

1. 5, 10, 15, 20, 25, 30, 35, 40

2. 45, 50, 55, 60, 65, 70, 75, 80

3. 20, 25, 30, 35, 40, 45, 50, 55

4. 50, 55, 60, 65, 70, 75, 80, 85

Pg 2

5. 10, 15, 20, 25, 30, 35, 40, 45

6. 35, 40, 45, 50, 55, 60, 65, 70

7. 45, 50, 55, 60, 65, 70, 75, 80

8. 60, 65, 70, 75, 80, 85, 90, 95

Pg 3

9. 15, 20, 25, 30, 35, 40, 45, 50

10. 25, 30, 35, 40, 45, 50, 55, 60

11. 30, 35, 40, 45, 50, 55, 60, 65

12. 65, 70, 75, 80, 85, 90, 95, 100

Copyright © freemathprogram.com All rights reserved.