

### Skill 2 - 7C: Money

#### Pennies, Nickels and Dimes

Directions: Count the coins. Write the total below as you count.



10¢

20¢

25¢

26¢

27¢

= 27 cents

1.

							=	<u>        </u> ¢
--	--	--	--	--	--	--	---	-------------------

2.

							=	<u>        </u> ¢
--	--	--	--	--	--	--	---	-------------------

3.

							=	<u>        </u> ¢
--	--	--	--	--	--	--	---	-------------------

4.

							=	<u>        </u> ¢
--	--	--	--	--	--	--	---	-------------------

5.

							=	<u>        </u> ¢
--	--	--	--	--	--	--	---	-------------------

## Skill 2 - 7C: Money

## Pennies, Nickels and Dimes

Directions: Count the coins. Write the total below as you count.

6.



\_\_\_ ¢

\_\_\_ ¢

\_\_\_ ¢

\_\_\_ ¢

\_\_\_ ¢

\_\_\_ ¢

= \_\_\_\_\_ ¢

7.



\_\_\_ ¢

\_\_\_ ¢

\_\_\_ ¢

\_\_\_ ¢

\_\_\_ ¢

\_\_\_ ¢

= \_\_\_\_\_ ¢

8.



\_\_\_ ¢

\_\_\_ ¢

\_\_\_ ¢

\_\_\_ ¢

\_\_\_ ¢

\_\_\_ ¢

= \_\_\_\_\_ ¢

9.



\_\_\_ ¢

\_\_\_ ¢

\_\_\_ ¢

\_\_\_ ¢

\_\_\_ ¢

\_\_\_ ¢

= \_\_\_\_\_ ¢

10.



\_\_\_ ¢

\_\_\_ ¢

\_\_\_ ¢

\_\_\_ ¢

\_\_\_ ¢

\_\_\_ ¢

= \_\_\_\_\_ ¢

## Skill 2 - 7C: Money

## Pennies, Nickels and Dimes

Directions: Count the coins. Write the total below as you count.

11.



\_\_\_\_\_ ¢

\_\_\_\_\_ ¢

\_\_\_\_\_ ¢

\_\_\_\_\_ ¢

\_\_\_\_\_ ¢



\_\_\_\_\_ ¢

\_\_\_\_\_ ¢

\_\_\_\_\_ ¢

\_\_\_\_\_ ¢

\_\_\_\_\_ ¢

= \_\_\_\_\_ ¢

12.



\_\_\_\_\_ ¢

\_\_\_\_\_ ¢

\_\_\_\_\_ ¢

\_\_\_\_\_ ¢

\_\_\_\_\_ ¢

\_\_\_\_\_ ¢



\_\_\_\_\_ ¢

\_\_\_\_\_ ¢

\_\_\_\_\_ ¢

\_\_\_\_\_ ¢

\_\_\_\_\_ ¢

= \_\_\_\_\_ ¢

13.



\_\_\_\_\_ ¢

\_\_\_\_\_ ¢

\_\_\_\_\_ ¢

\_\_\_\_\_ ¢

\_\_\_\_\_ ¢

\_\_\_\_\_ ¢



\_\_\_\_\_ ¢

\_\_\_\_\_ ¢

\_\_\_\_\_ ¢

\_\_\_\_\_ ¢

\_\_\_\_\_ ¢

\_\_\_\_\_ ¢











= \_\_\_\_\_ ¢

### Skill 2 - 7C: Money












#### Pennies, Nickels and Dimes

**Directions:** Count the coins. Write the total below as you count.













14.

					
_____ ¢	_____ ¢	_____ ¢	_____ ¢	_____ ¢	
					
_____ ¢	_____ ¢	_____ ¢	_____ ¢	_____ ¢	= _____ ¢

15.

						
_____ ¢	_____ ¢	_____ ¢	_____ ¢	_____ ¢	_____ ¢	
						
_____ ¢	_____ ¢	_____ ¢	_____ ¢	_____ ¢		= _____ ¢

16.

						
_____ ¢	_____ ¢	_____ ¢	_____ ¢	_____ ¢	_____ ¢	
						
_____ ¢	_____ ¢	_____ ¢	_____ ¢	_____ ¢	_____ ¢	= _____ ¢

Answer Key  
Skill 2 - 7C

Page 1

1. 10¢ 15¢ 16¢ 17¢ 18¢ 19¢ = 19¢  
2. 10¢ 20¢ 25¢ 26¢ 27¢ 28¢ = 28¢  
3. 10¢ 20¢ 30¢ 31¢ 32¢ 33¢ = 33¢  
4. 10¢ 20¢ 30¢ 35¢ 36¢ 37¢ = 37¢  
5. 10¢ 20¢ 25¢ 30¢ 35¢ 36¢ = 36¢

Page 2

6.  
10¢ 20¢ 30¢ 35¢ 40¢ 41¢ = 41¢  
7.  
10¢ 15¢ 20¢ 25¢ 26¢ 27¢ = 27¢  
8.  
10¢ 20¢ 25¢ 30¢ 31¢ 32¢ = 32¢  
9.  
10¢ 20¢ 25¢ 30¢ 35¢ 36¢ = 36¢  
10.  
10¢ 20¢ 30¢ 40¢ 45¢ 46¢ = 46¢

Page 3

11.  
10¢ 20¢ 30¢ 35¢ 40¢ 45¢ 46¢ 47¢ 48¢ 49¢ = 49¢  
12.  
10¢ 20¢ 30¢ 40¢ 45¢ 50¢ 51¢ 52¢ 53¢ 54¢ 55¢ = 55¢  
13.  
10¢ 20¢ 30¢ 40¢ 50¢ 55¢ 60¢ 65¢ 66¢ 67¢ 68¢ 69¢ = 69¢

Page 4

14.  
10¢ 20¢ 30¢ 35¢ 40¢ 45¢ 50¢ 55¢ 56¢ 57¢ = 57¢  
15.  
10¢ 20¢ 30¢ 40¢ 50¢ 60¢ 65¢ 70¢ 75¢ 76¢ 77¢ = 77¢  
16.  
10¢ 20¢ 30¢ 40¢ 50¢ 60¢ 70¢ 75¢ 80¢ 85¢ 90¢ 91¢ = 91¢