

Skill 2 - 7E: Money

Skill 7E: Coin Value to \$1

Directions: Count the coins. Write the total below as you count.



50¢



75¢



80¢



90¢



91¢

= 91 cents

1.



_____ ¢



_____ ¢



_____ ¢



_____ ¢



_____ ¢

= _____ cents

2.



_____ ¢



_____ ¢



_____ ¢



_____ ¢



_____ ¢

= _____ cents

3.



_____ ¢



_____ ¢



_____ ¢



_____ ¢



_____ ¢

= _____ cents

Name _____


Date _____

Skill 2 - 7E: Money

Skill 7E: Coin Value to \$1


Directions: Count the coins. Write the total below as you count.

4.




_____ ¢ _____ ¢ _____ ¢ _____ ¢ _____ ¢ = _____ cents

5.




_____ ¢ _____ ¢ _____ ¢ _____ ¢ _____ ¢ = _____ cents

6.



_____ ¢ _____ ¢ _____ ¢ _____ ¢ _____ ¢ = _____ cents

7.



_____ ¢ _____ ¢ _____ ¢ _____ ¢ _____ ¢ = _____ cents

Skill 2 - 7E: Money

Skill 7E: Coin Value to \$1

Directions: Count the coins. Write the total below as you count.

8.



_____ ¢



_____ ¢



_____ ¢



_____ ¢



_____ ¢



_____ ¢



_____ ¢



_____ ¢



_____ ¢



_____ ¢

= _____ ¢

9.



_____ ¢



_____ ¢



_____ ¢



_____ ¢



_____ ¢



_____ ¢



_____ ¢



_____ ¢



_____ ¢



_____ ¢



_____ ¢

= _____ ¢

10.



_____ ¢



_____ ¢



_____ ¢



_____ ¢



_____ ¢

= _____ ¢

Name _____

Date _____

Skill 2 - 7E: Money

Skill 7E: Coin Value to \$1

Directions: Count the coins. Write the total below as you count.

11.



_____ ¢



_____ ¢



_____ ¢



_____ ¢



_____ ¢



_____ ¢



_____ ¢



_____ ¢



_____ ¢



_____ ¢

= _____ ¢

12.



_____ ¢



_____ ¢



_____ ¢



_____ ¢



_____ ¢



_____ ¢



_____ ¢



_____ ¢



_____ ¢



_____ ¢



_____ ¢



_____ ¢

= _____ ¢

13.



_____ ¢



_____ ¢



_____ ¢



_____ ¢



_____ ¢



_____ ¢

= _____ ¢

Answer Key
Skill 2 - 7E

Page 1

1.

$$\underline{75\text{¢}} \quad \underline{85\text{¢}} \quad \underline{95\text{¢}} \quad \underline{96\text{¢}} \quad = 96\text{¢}$$

2.

$$\underline{75\text{¢}} \quad \underline{80\text{¢}} \quad \underline{81\text{¢}} \quad \underline{82\text{¢}} \quad = 82\text{¢}$$

3.

$$\underline{75\text{¢}} \quad \underline{85\text{¢}} \quad \underline{86\text{¢}} \quad \underline{87\text{¢}} \quad = 87\text{¢}$$

Page 2

4.

$$\underline{75\text{¢}} \quad \underline{76\text{¢}} \quad \underline{77\text{¢}} \quad \underline{78\text{¢}} \quad = 78\text{¢}$$

5.

$$\underline{75\text{¢}} \quad \underline{80\text{¢}} \quad \underline{85\text{¢}} \quad \underline{90\text{¢}} \quad = 90\text{¢}$$

6.

$$\underline{75\text{¢}} \quad \underline{80\text{¢}} \quad \underline{90\text{¢}} \quad \underline{100\text{¢}} \quad = 100\text{¢ or } \$1.00$$

7.

$$\underline{60\text{¢}} \quad \underline{70\text{¢}} \quad \underline{75\text{¢}} \quad \underline{76\text{¢}} \quad = 76\text{¢}$$

Page 3

8.

$$\underline{75\text{¢}} \quad \underline{80\text{¢}} \quad \underline{90\text{¢}} \quad \underline{91\text{¢}} \quad \underline{92\text{¢}} \quad \underline{93\text{¢}} \quad \underline{94\text{¢}} \quad \underline{95\text{¢}} \quad \underline{96\text{¢}} \quad = 96\text{¢}$$

9.

$$\underline{75\text{¢}} \quad \underline{80\text{¢}} \quad \underline{85\text{¢}} \quad \underline{90\text{¢}} \quad \underline{91\text{¢}} \quad \underline{92\text{¢}} \quad \underline{93\text{¢}} \quad \underline{94\text{¢}} \quad \underline{95\text{¢}} \quad \underline{96\text{¢}} \quad = 96\text{¢}$$

10.

$$\underline{75\text{¢}} \quad \underline{85\text{¢}} \quad \underline{95\text{¢}} \quad \underline{96\text{¢}} \quad = 96\text{¢}$$

Page 4

11.

$$\underline{55\text{¢}} \quad \underline{60\text{¢}} \quad \underline{65\text{¢}} \quad \underline{70\text{¢}} \quad \underline{75\text{¢}} \quad \underline{80\text{¢}} \quad \underline{81\text{¢}} \quad \underline{82\text{¢}} \quad \underline{83\text{¢}} \quad = 83\text{¢}$$

12.

$$\underline{75\text{¢}} \quad \underline{80\text{¢}} \quad \underline{85\text{¢}} \quad \underline{95\text{¢}} \quad \underline{96\text{¢}} \quad \underline{97\text{¢}} \quad \underline{98\text{¢}} \quad \underline{99\text{¢}} \quad \underline{100\text{¢}} \quad \underline{102\text{¢}} \quad = 102\text{¢ or } \$1.02$$

13.

$$\underline{75\text{¢}} \quad \underline{80\text{¢}} \quad \underline{85\text{¢}} \quad \underline{90\text{¢}} \quad \underline{95\text{¢}} \quad = 95\text{¢}$$