

Name \_\_\_\_\_



Date \_\_\_\_\_

### Skill 2 - 8C: Money



#### Compare Coin Amounts

**Directions:** Add each group of coins and write the total. Then write  $>$   $<$  or  $=$  in the box.



1.

		
_____ ¢	<div style="border: 1px solid black; width: 100px; height: 100px; display: inline-block;"></div>	_____ ¢

2.

		
_____ ¢	<div style="border: 1px solid black; width: 100px; height: 100px; display: inline-block;"></div>	_____ ¢

3.

		
_____ ¢	<div style="border: 1px solid black; width: 100px; height: 100px; display: inline-block;"></div>	_____ ¢

Name \_\_\_\_\_






Date \_\_\_\_\_

### Skill 2 - 8C: Money







#### Compare Coin Amounts

**Directions:** Add each group of coins and write the total. Then write  $>$   $<$  or  $=$  in the box.











4.

 	  
_____	_____
<div style="border: 1px solid black; width: 100px; height: 60px; margin: 0 auto;"></div>	

5.

 	   
_____	_____
<div style="border: 1px solid black; width: 100px; height: 60px; margin: 0 auto;"></div>	

6.

   	     
_____	_____
<div style="border: 1px solid black; width: 100px; height: 60px; margin: 0 auto;"></div>	

Name \_\_\_\_\_



Date \_\_\_\_\_

### Skill 2 - 8C: Money



#### Compare Coin Amounts

**Directions:** Add each group of coins and write the total. Then write  $>$   $<$  or  $=$  in the box.



7.

	
_____	_____
<div style="border: 1px solid black; width: 100px; height: 100px; margin: 0 auto;"></div>	

8.

	
_____	_____
<div style="border: 1px solid black; width: 100px; height: 100px; margin: 0 auto;"></div>	

9.

	
_____	_____
<div style="border: 1px solid black; width: 100px; height: 100px; margin: 0 auto;"></div>	

Name \_\_\_\_\_



Date \_\_\_\_\_

### Skill 2 - 8C: Money



#### Compare Coin Amounts

**Directions:** Add each group of coins and write the total. Then write  $>$   $<$  or  $=$  in the box.



10.

	
_____	_____
<div style="border: 1px solid black; width: 100px; height: 50px; margin: 0 auto;"></div>	

11.

	
_____	_____
<div style="border: 1px solid black; width: 100px; height: 50px; margin: 0 auto;"></div>	

12.

	
_____	_____
<div style="border: 1px solid black; width: 100px; height: 50px; margin: 0 auto;"></div>	

Answer Key  
Skill 2 - 8C

Page 1

1.  $30¢ > 25¢$

2.  $31¢ < 35¢$

3.  $22¢ < 25¢$

Page 2

4.  $26¢ < 30¢$

5.  $35¢ = 35¢$

6.  $28¢ > 23¢$

Page 3

7.  $25¢ < 35¢$

8.  $50¢ > 45¢$

9.  $75¢ = 75¢$

Page 4

10.  $40¢ > 35¢$

11.  $30¢ < 35¢$

12.  $85¢ < 90¢$