



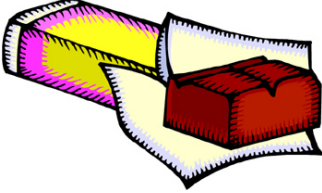






Print in black and white or in color.

Skill 2: 18C: Measurement

Ounces







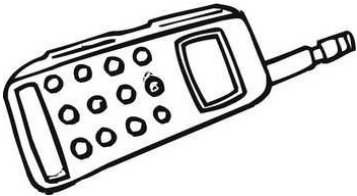


Directions: Circle the best answer.

<p>1.</p>  <p>4 ounces or 4 pounds</p>	<p>2.</p>  <p>4 ounces or 4 pounds</p>	<p>3.</p>  <p>50 ounces or 50 pounds</p>
<p>4.</p>  <p>2 ounces or 2 pounds</p>	<p>5.</p>  <p>2 ounces or 2 pounds</p>	<p>6.</p>  <p>1 ounce or 1 pound</p>
<p>7.</p>  <p>10 ounces or 10 pounds</p>	<p>8.</p>  <p>100 ounces or 100 pounds</p>	<p>9.</p>  <p>6 ounces or 6 pounds</p>










Skill 2: 18C: Measurement

Ounces







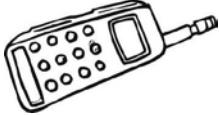


Directions: Circle the best answer.

<p>10.</p>  <p>7 ounces or 7 pounds</p>	<p>11.</p>  <p>1 ounce or 1 pound</p>	<p>12.</p>  <p>1,000 ounces or 1,000 pounds</p>
<p>13.</p>  <p>4 ounces or 4 pounds</p>	<p>14.</p>  <p>2 ounces or 2 pounds</p>	<p>15.</p>  <p>6 ounces or 6 pounds</p>
<p>16.</p>  <p>4 ounces or 4 pounds</p>	<p>17.</p>  <p>3 ounces or 3 pounds</p>	<p>18.</p>  <p>15 ounces or 15 pounds</p>

Answer Key
Skill 2: 18C

1.  4 ounces	2.  4 ounces	3.  50 pounds
4.  2 ounces	5.  2 ounces	6.  1 ounce
7.  10 pounds	8.  100 pounds	9.  6 pounds

Page 2

10.  7 ounces	11.  1 ounce	12.  1,000 pounds
13.  4 ounces	14.  2 pounds	15.  6 ounces
16.  4 ounces	17.  3 ounces	18.  15 ounces