

Place Value

Skill 2 - 21A

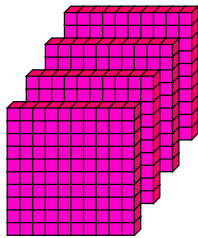
FreeMathProgram.com

Print in black and white or color.

Hundreds, Tens, and Ones

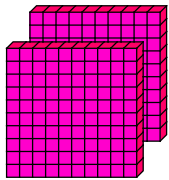
Directions: Write how many tens. Write how many ones. Then write the number.

1.



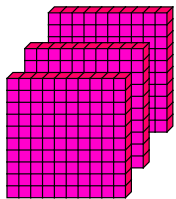
4 hundreds = _____ tens = _____ ones = _____

2.



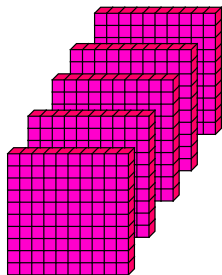
2 hundreds = _____ tens = _____ ones = _____

3.



3 hundreds = _____ tens = _____ ones = _____

4.



5 hundreds = _____ tens = _____ ones = _____

Place Value


Skill 2 - 21A

FreeMathProgram.com

Hundreds, Tens, and Ones

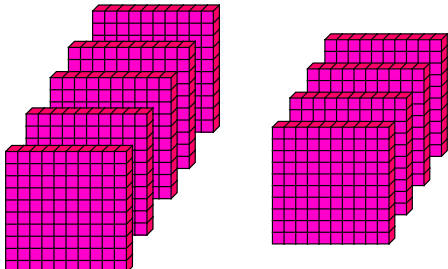
Directions: Write how many tens. Write how many ones. Then write the number.

5.




7 hundreds = _____ tens = _____ ones = _____

6.




9 hundreds = _____ tens = _____ ones = _____

7.



6 hundreds = _____ tens = _____ ones = _____

8.



8 hundreds = _____ tens = _____ ones = _____

Place Value

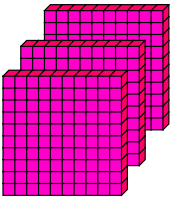
Skill 2 - 21A

FreeMathProgram.com

Hundreds, Tens, and Ones

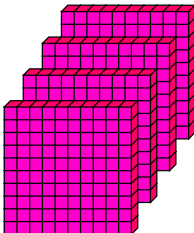
Directions: Write how many tens. Write how many ones. Then write the number.

9.



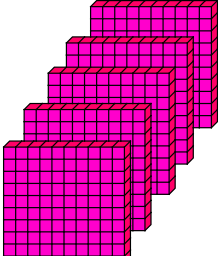
3 hundreds = _____ tens = _____ ones = _____

10.



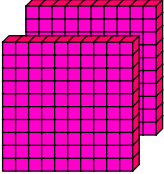
4 hundreds = _____ tens = _____ ones = _____

11.



5 hundreds = _____ tens = _____ ones = _____

12.



2 hundreds = _____ tens = _____ ones = _____

Place Value


Skill 2 - 21A

FreeMathProgram.com

Hundreds, Tens, and Ones


Directions: Write how many tens. Write how many ones. Then write the number.

13.



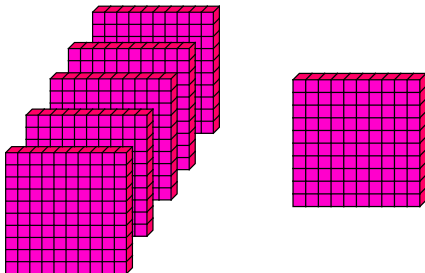
$$8 \text{ hundreds} = \underline{\quad} \text{ tens} = \underline{\quad} \text{ ones} = \underline{\quad}$$

14.



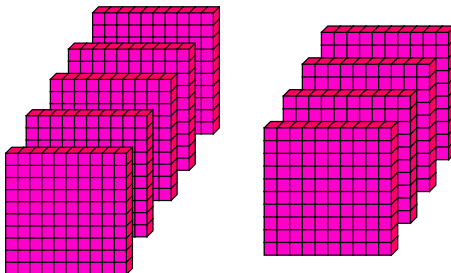
$$7 \text{ hundreds} = \underline{\quad} \text{ tens} = \underline{\quad} \text{ ones} = \underline{\quad}$$

15.



$$6 \text{ hundreds} = \underline{\quad} \text{ tens} = \underline{\quad} \text{ ones} = \underline{\quad}$$

16.



$$9 \text{ hundreds} = \underline{\quad} \text{ tens} = \underline{\quad} \text{ ones} = \underline{\quad}$$

Answer Key
Skill 2 - 21A
FreeMathProgram.com

1.	4 hundreds	=	<u>40</u>	tens	=	<u>400</u>	ones	=	<u>400</u>
2.	2 hundreds	=	<u>20</u>	tens	=	<u>200</u>	ones	=	<u>200</u>
3.	3 hundreds	=	<u>30</u>	tens	=	<u>300</u>	ones	=	<u>300</u>
4.	5 hundreds	=	<u>50</u>	tens	=	<u>500</u>	ones	=	<u>500</u>

Page 2

5.	7 hundreds	=	<u>70</u>	tens	=	<u>700</u>	ones	=	<u>700</u>
6.	9 hundreds	=	<u>90</u>	tens	=	<u>900</u>	ones	=	<u>900</u>
7.	6 hundreds	=	<u>60</u>	tens	=	<u>600</u>	ones	=	<u>600</u>
8.	8 hundreds	=	<u>80</u>	tens	=	<u>800</u>	ones	=	<u>800</u>

Page 3

9.	3 hundreds	=	<u>30</u>	tens	=	<u>300</u>	ones	=	<u>300</u>
10.	4 hundreds	=	<u>40</u>	tens	=	<u>400</u>	ones	=	<u>400</u>
11.	5 hundreds	=	<u>50</u>	tens	=	<u>500</u>	ones	=	<u>500</u>
12.	2 hundreds	=	<u>20</u>	tens	=	<u>200</u>	ones	=	<u>200</u>

Page 4

13.	8 hundreds	=	<u>80</u>	tens	=	<u>800</u>	ones	=	<u>800</u>
14.	7 hundreds	=	<u>70</u>	tens	=	<u>700</u>	ones	=	<u>700</u>
15.	6 hundreds	=	<u>60</u>	tens	=	<u>600</u>	ones	=	<u>600</u>
16.	9 hundreds	=	<u>90</u>	tens	=	<u>900</u>	ones	=	<u>900</u>