
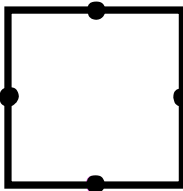
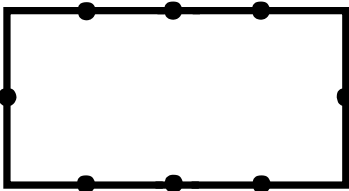
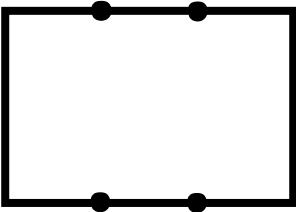
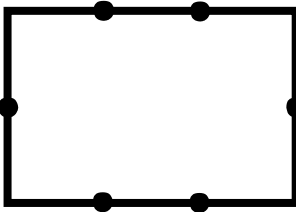
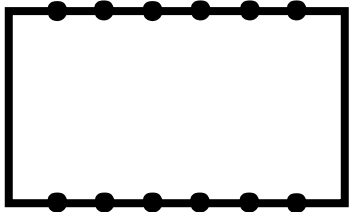
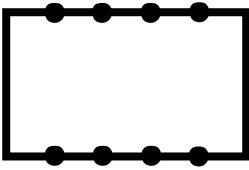
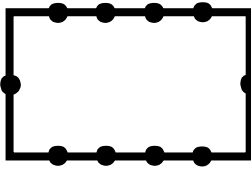



# Fractions

## Skill 2 - 25H

### Connect Dots and Write Fraction for the Shaded Part.

**Directions:** Draw lines to connect the dots so that the divided shape will show equal parts. Shade one part and write the fraction for the shaded part.

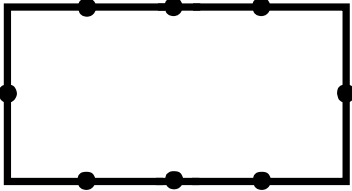
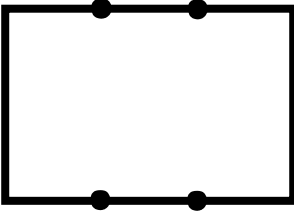
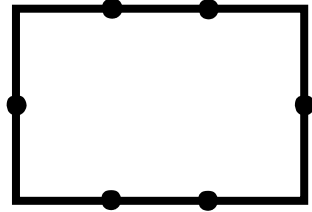
<p>1.</p>  <p>2 equal parts</p> <p>_____</p>	<p>2.</p>  <p>4 equal parts</p> <p>_____</p>	<p>3.</p>  <p>8 equal parts</p> <p>_____</p>
<p>4.</p>  <p>3 equal parts</p> <p>_____</p>	<p>5.</p>  <p>6 equal parts</p> <p>_____</p>	<p>6.</p>  <p>7 equal parts</p> <p>_____</p>
<p>7.</p>  <p>5 equal parts</p> <p>_____</p>	<p>8.</p>  <p>10 equal parts</p> <p>_____</p>	<p>9.</p>  <p>2 equal parts</p> <p>_____</p>

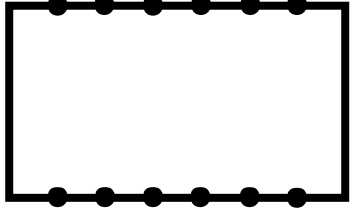
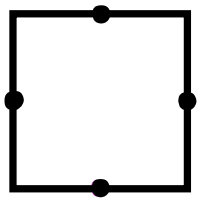
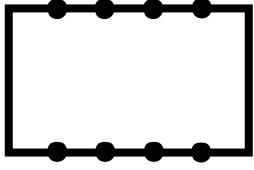
# Fractions

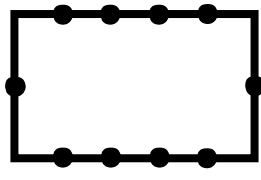
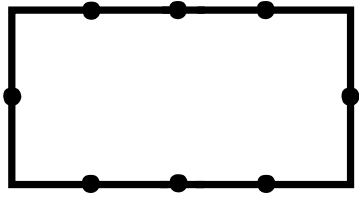

## Skill 2 - 25H

### Connect Dots and Write Fraction for the Shaded Part.

**Directions:** Draw lines to connect the dots so that the divided shape will show equal parts. Shade one part and write the fraction for the shaded part.

<p>10.</p>  <p>8 equal parts</p> <p>_____</p>	<p>11.</p>  <p>3 equal parts</p> <p>_____</p>	<p>12.</p>  <p>6 equal parts</p> <p>_____</p>
--	--	--

<p>13.</p>  <p>7 equal parts</p> <p>_____</p>	<p>14.</p>  <p>4 equal parts</p> <p>_____</p>	<p>15.</p>  <p>5 equal parts</p> <p>_____</p>
--	--	--

<p>16.</p>  <p>10 equal parts</p> <p>_____</p>	<p>17.</p>  <p>8 equal parts</p> <p>_____</p>	<p>18.</p>  <p>2 equal parts</p> <p>_____</p>
---	--	--

Answer Key  
Skill 2 - 25H

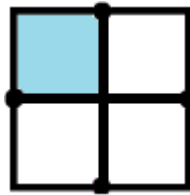
1.



2 equal parts

$$\frac{1}{2}$$

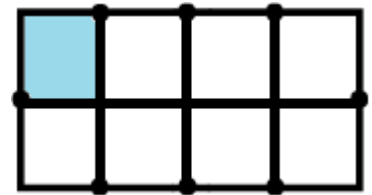
2.



4 equal parts

$$\frac{1}{4}$$

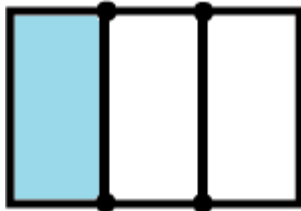
3.



8 equal parts

$$\frac{1}{8}$$

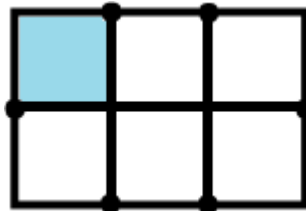
4.



3 equal parts

$$\frac{1}{3}$$

5.



6 equal parts

$$\frac{1}{6}$$

6.



7 equal parts

$$\frac{1}{7}$$

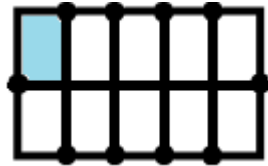
7.



5 equal parts

$$\frac{1}{5}$$


8.



10 equal parts

$$\frac{1}{10}$$

9.

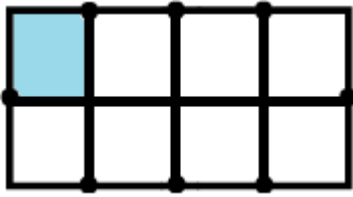


2 equal parts

$$\frac{1}{2}$$

Answer Key  
Skill 2 - 25H

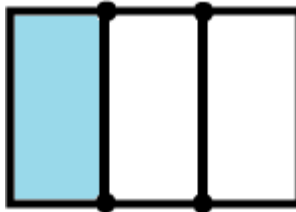
10.



8 equal parts

$$\frac{1}{8}$$

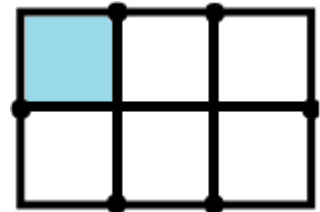
11.



3 equal parts

$$\frac{1}{3}$$

12.



6 equal parts

$$\frac{1}{6}$$

13.



7 equal parts

$$\frac{1}{7}$$

14.



4 equal parts

$$\frac{1}{4}$$

15.



5 equal parts

$$\frac{1}{5}$$

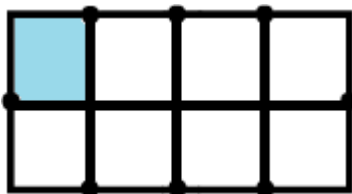
16.



10 equal parts

$$\frac{1}{10}$$


17.



8 equal parts

$$\frac{1}{8}$$

18.



2 equal parts

$$\frac{1}{2}$$