


Probability

Skill 2 - 26A

Certain, Probable, Impossible


Directions: Read each problem and circle the answer.

1. There are 5 black marbles in the bag. What is the chance that you will pick a black marble? Circle one.




certain
probable
impossible

2. There are 12 black marbles in the bag. What is the chance that you will pick a white marble? Circle one.




certain
probable
impossible

3. There are 5 white marbles in the bag. What is the chance that you will pick a black marble? Circle one.




certain
probable
impossible

4. There are 10 black marbles and 2 white marbles in the bag. What is the chance that you will pick a black marble? Circle one.




certain
probable
impossible

5. There are 10 white marbles and 2 black marbles in the bag. What is the chance that you will pick a white marble? Circle one.



certain
probable
impossible

6. There are 5 white marbles in the bag. What is the chance that you will pick a white marble? Circle one.



certain
probable
impossible


Probability

Skill 2 - 26A

Certain, Probable, Impossible


Directions: Read each problem and circle the answer.

7. There are 10 white marbles and 2 black marbles in the bag. What is the chance that you will pick a white marble? Circle one.




certain
probable
impossible

8. There are 10 black marbles and 2 white marbles in the bag. What is the chance that you will pick a black marble? Circle one.




certain
probable
impossible

9. There are 5 white marbles in the bag. What is the chance that you will pick a white marble? Circle one.




certain
probable
impossible

10. There are 5 black marbles in the bag. What is the chance that you will pick a white marble? Circle one.




certain
probable
impossible

11. There are 5 black marbles in the bag. What is the chance that you will pick a black marble? Circle one.



certain
probable
impossible

12. There are 5 white marbles in the bag. What is the chance that you will pick a black marble? Circle one.



certain
probable
impossible

Answer Key

Skill 2 - 26A

1. certain 2. impossible 3. impossible 4. probable 5. probable 6. certain
7. probable 8. probable 9. certain 10. impossible 11. certain 12. impossible

Copyright © FreeMathProgram.com All rights reserved.