



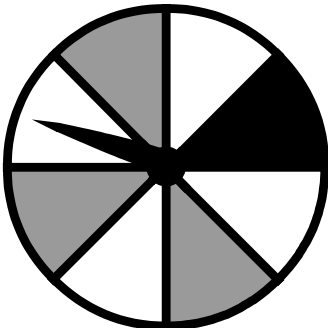
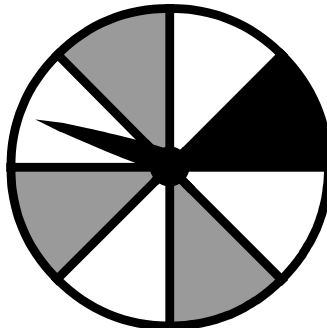
Probability



Skill 2 - 26B

Likely, Unlikely

Directions: Read each problem and circle the answer.

<p>1. On which number is the pointer least likely to land?</p> <div style="text-align: center;">  _____ </div>	<p>2. On which number is the pointer most likely to land?</p> <div style="text-align: center;">  _____ </div>
---	---

<p>3. On which color is the pointer least likely to land? Gray, black or white?</p> <div style="text-align: center;">  _____ </div>	<p>4. On which color is the pointer most likely to land? Gray, black or white?</p> <div style="text-align: center;">  _____ </div>
--	--



<p>5. On which number is the pointer least likely to land?</p> <div style="text-align: center;">  _____ </div>	<p>6. On which number is the pointer most likely to land?</p> <div style="text-align: center;">  _____ </div>
---	---


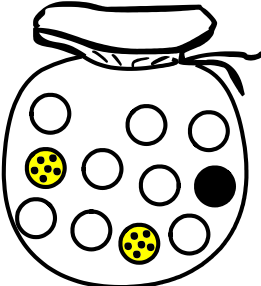
Probability



Skill 2 - 26B

Likely or Unlikely

Directions: Read each problem and circle the answer.

<p>7. Which color marble are you least likely to pull from the bag? Circle one.</p> <div style="display: flex; align-items: center; justify-content: center;">  <div style="margin-left: 20px;"> <p>white</p> <p>black</p> <p>spotted</p> </div> </div>	<p>8. Which color marble are you most likely to pull from the bag? Circle one.</p> <div style="display: flex; align-items: center; justify-content: center;">  <div style="margin-left: 20px;"> <p>white</p> <p>black</p> <p>spotted</p> </div> </div>
---	---

<p>9. Which color marble are you most likely to pull from the bag? Circle one.</p> <div style="display: flex; align-items: center; justify-content: center;">  <div style="margin-left: 20px;"> <p>white</p> <p>black</p> <p>spotted</p> </div> </div>	<p>10. Which color marble are you least likely to pull from the bag? Circle one.</p> <div style="display: flex; align-items: center; justify-content: center;">  <div style="margin-left: 20px;"> <p>white</p> <p>black</p> <p>spotted</p> </div> </div>
--	---



<p>11. Which color marble are you most likely to pull from the bag? Circle one.</p> <div style="display: flex; align-items: center; justify-content: center;">  <div style="margin-left: 20px;"> <p>white</p> <p>black</p> <p>spotted</p> </div> </div>	<p>12. Which color marble are you least likely to pull from the bag? Circle one.</p> <div style="display: flex; align-items: center; justify-content: center;">  <div style="margin-left: 20px;"> <p>white</p> <p>black</p> <p>spotted</p> </div> </div>
---	---

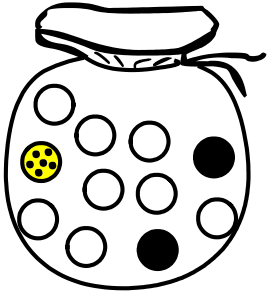

Probability



Skill 2 - 26B

Likely or Unlikely

Directions: Read each problem and circle the answer.

<p>13. Which color marble are you least likely to pull from the bag? Circle one.</p> <div style="display: flex; align-items: center; justify-content: center;">  <div style="margin-left: 20px;"> <p>white</p> <p>black</p> <p>spotted</p> </div> </div>	<p>14. Which color marble are you most likely to pull from the bag? Circle one.</p> <div style="display: flex; align-items: center; justify-content: center;">  <div style="margin-left: 20px;"> <p>white</p> <p>black</p> <p>spotted</p> </div> </div>
---	---

<p>15. Which color marble are you least likely to pull from the bag? Circle one.</p> <div style="display: flex; align-items: center; justify-content: center;">  <div style="margin-left: 20px;"> <p>white</p> <p>black</p> <p>spotted</p> </div> </div>	<p>16. Which color marble are you most likely to pull from the bag? Circle one.</p> <div style="display: flex; align-items: center; justify-content: center;">  <div style="margin-left: 20px;"> <p>white</p> <p>black</p> <p>spotted</p> </div> </div>
---	---



<p>17. Which color marble are you least likely to pull from the bag? Circle one.</p> <div style="display: flex; align-items: center; justify-content: center;">  <div style="margin-left: 20px;"> <p>white</p> <p>black</p> <p>spotted</p> </div> </div>	<p>18. Which color marble are you most likely to pull from the bag? Circle one.</p> <div style="display: flex; align-items: center; justify-content: center;">  <div style="margin-left: 20px;"> <p>white</p> <p>black</p> <p>spotted</p> </div> </div>
---	---



Probability



Skill 2 - 26B

Likely or Unlikely

Directions: Read each problem and circle the answer.

<p>19. Which color marble are you least likely to pull from the bag? Circle one.</p> <div style="display: flex; align-items: center; justify-content: center;">  <div style="margin-left: 20px;"> <p>white</p> <p>black</p> <p>spotted</p> </div> </div>	<p>20. Which color marble are you most likely to pull from the bag? Circle one.</p> <div style="display: flex; align-items: center; justify-content: center;">  <div style="margin-left: 20px;"> <p>white</p> <p>black</p> <p>spotted</p> </div> </div>
--	--

<p>21. Which color marble are you most likely to pull from the bag? Circle one.</p> <div style="display: flex; align-items: center; justify-content: center;">  <div style="margin-left: 20px;"> <p>white</p> <p>black</p> <p>spotted</p> </div> </div>	<p>22. Which color marble are you least likely to pull from the bag? Circle one.</p> <div style="display: flex; align-items: center; justify-content: center;">  <div style="margin-left: 20px;"> <p>white</p> <p>black</p> <p>spotted</p> </div> </div>
---	---

<p>23. Which color marble are you most likely to pull from the bag? Circle one.</p> <div style="display: flex; align-items: center; justify-content: center;">  <div style="margin-left: 20px;"> <p>white</p> <p>black</p> <p>spotted</p> </div> </div>	<p>24. Which color marble are you least likely to pull from the bag? Circle one.</p> <div style="display: flex; align-items: center; justify-content: center;">  <div style="margin-left: 20px;"> <p>white</p> <p>black</p> <p>spotted</p> </div> </div>
---	---

Answer Key
Skill 2 - 26B

Pg 1

1. 4 2. 1 3. black 4. white 5. 4 6. 3

Pg 2

7. spotted 8. black 9. white 10. black 11. black 12. spotted

Pg 3

13. spotted 14. black 15. spotted 16. white 17. white 18. spotted

Pg 4

19. black 20. white 21. black 22. black 23. black 24. black

Copyright © FreeMathProgram.com All rights reserved.