


Problem Solving

Skill 3 - 8B

Tell Time: Elapsed Time

Directions: Read the problem below and write the correct time.

EXAMPLE




The clock shows the time that the school play begins.

The school play will last for two hours.
At what time will the play end?

9:30

1.

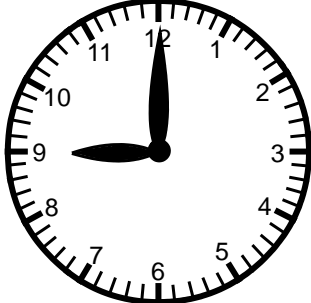


The clock shows the time that the art show begins.

The art show will last for three hours.
At what time will the show end?

_____ : _____

2.




The clock shows the time that school begins.

The school day will last for five hours.
At what time will the school day end?

_____ : _____

3.



The clock shows the time that the lunch room opens.

The lunch room will stay open for three hours.
At what time will the lunch room close?

_____ : _____

Name _____

Date _____

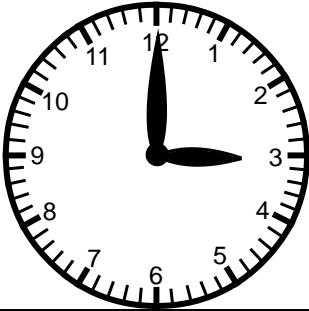
Problem Solving

Skill 3 - 8B

Tell Time: Elapsed Time

Directions: Read the problem below and write the correct time.

4.



The clock shows the time that the zoo opens.

The zoo will be open for six hours.

At what time will the zoo close?

_____ : _____

5.



The clock shows the time that the music festival begins.

The festival will last for two hours and 30 minutes.

At what time will the festival end?

_____ : _____

6.



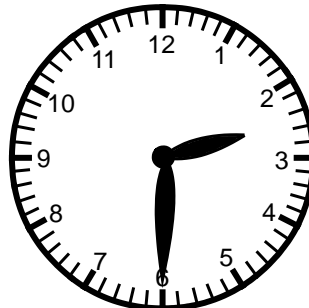
The clock shows the time that the dance begins.

The dance will last for four hours.

At what time will the dance end?

_____ : _____

7.



The clock shows the time that the dog show begins.

The dog show will last for three hours and 30 minutes.

At what time will the dog show end?

_____ : _____


Problem Solving

Skill 3 - 8B

Elapsed Time

Directions: Read the problem below and write the correct time.

8.




The clock shows the time that the sailboat race begins.

The sailboat race will last for two hours.
At what time will the race end?

_____ : _____

9.




The clock shows the time that the pep rally begins.

The pep rally will last for one hour and 15 minutes.
At what time will the rally end?

_____ : _____

10.

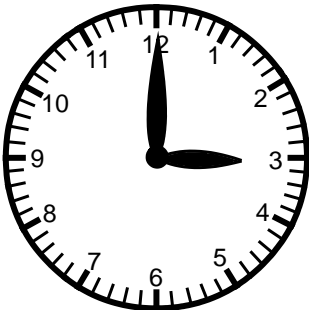


The clock shows the time that piano recital begins.

The piano recital will last for one hour and 10 minutes.
At what time will the recital end?

_____ : _____

11.



The clock shows the time that the violin recital begins.

The violin recital will last for one hour and forty-five minutes. At what time will the recital end?

_____ : _____

Answer Key
Skill 3 - 8B

1. 1:30

2. 2 :00

3. 1:00

4. 9:00

5. 5:30

6. 8:00

7. 6:00

8. 12:45

9. 12 :30

10. 6:00

11. 4:45