

Multiplication

Skill 3 - 12F

Write a Word Problem

Directions: Write a word problem using the pictures below.
Then write a number sentence that solves your word problem.




Write a word problem that you could solve by using the picture of birds in their nest.



Ella saw 3 bird nests in a tree. She counted 3 baby birds in each nest.

How many baby birds did Ella see in all? Answer: $3 \times 3 = 9$

1. Write a word problem that you could solve by using the picture below.



Name _____

Date _____




Multiplication

Skill 3 - 12F

Write a Word Problem

Directions: Write a word problem using the pictures below.
Then write a number sentence that solves your word problem.

2. Write a word problem that you could solve by using the picture below.



3. Write a word problem that you could solve by using the picture below.



Answer Key
Skill 3 - 12F

1. Liam bought 3 bags of hamburgers. There were 5 burgers in each bag. How many burgers did Liam buy in all? $3 \times 5 = 15$
2. Isabella bought 3 bunches of flowers. Each bunch had 4 flowers. How many flowers did Isabella buy in all? $3 \times 4 = 12$
3. There are 3 school buses. Each bus has 20 children. How many children are riding a school bus in all? $3 \times 20 = 60$