





Measurement



Skill 3 - 21D



Capacity: Cup, Pint, Quart, Gallon



Directions: Circle the container or group of containers that hold more.




 2 cups = 1 pint
 



1.
 
 or
 

2.
 
 or
 

3.
 
 or
 

4.
 
 or
 

5.
 
 or
 


6.
 
 or
 

Measurement

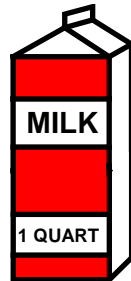
Skill 3 - 21D

Capacity: Cups, Pints, Quarts

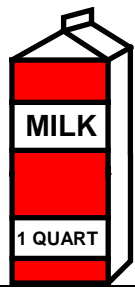
Directions: Circle the container or group of containers that hold more.



$$2 \text{ pints} = 1 \text{ quart}$$



7.



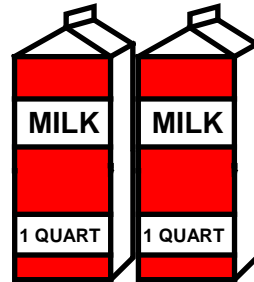
or



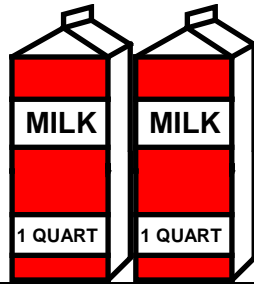
8.



or




9.




or



10.



or







Measurement



Skill 3 - 21D



Capacity: Quart, Gallon



Directions: Circle the container or group of containers that hold more.

 4 quarts = 1 gallon 

11.  or 

12.  or 

13.  or 

14.  or 

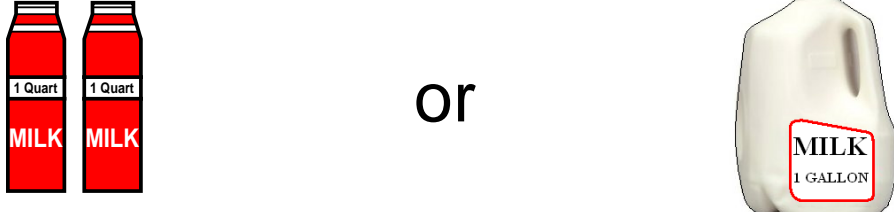
Measurement

Skill 3 - 21D

Capacity: Quart, Gallon

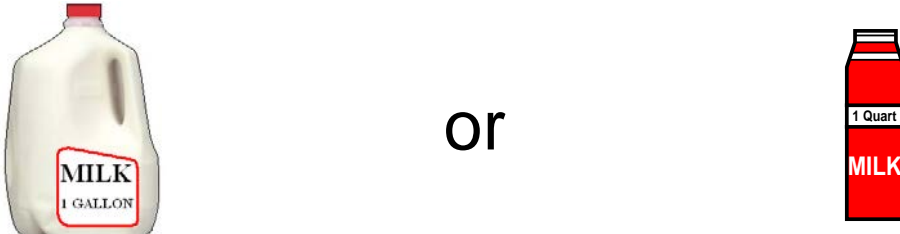
Directions: Circle the container or group of containers that hold more.

15.



Two red 1 quart milk containers are shown on the left, each labeled "1 Quart" and "MILK". To the right of the word "or" is a white 1 gallon milk jug labeled "MILK" and "1 GALLON".

16.




A white 1 gallon milk jug labeled "MILK" and "1 GALLON" is on the left. To the right of the word "or" is a red 1 quart milk container labeled "1 Quart" and "MILK".

17.




A white 1 gallon milk jug labeled "MILK" and "1 GALLON" is on the left. To the right of the word "or" are five red 1 quart milk containers, each labeled "1 Quart" and "MILK".

18.



A white 1 gallon milk jug labeled "MILK" and "1 GALLON" is on the left. To the right of the word "or" are seven red 1 quart milk containers, each labeled "1 Quart" and "MILK".

19.



Two white 1 gallon milk jugs labeled "MILK" and "1 GALLON" are on the left. To the right of the word "or" are eight red 1 quart milk containers, each labeled "1 Quart" and "MILK".

Answer Key
Skill 3 - 21D

Page 1

- 1. 3 cups
- 3. 2 pints
- 5. 1 pint

- 2. 5 cups
- 4. 3 pints
- 6. 2 pints

- 7. 3 pints
- 9. 5 pints

- 8. 2 quarts
- 10. 6 pints

Page 3

- 11. 1 gallon
- 13. 2 gallons

- 12. 2 gallons
- 14. 5 quarts

Page 4

- 15. 1 gallon
- 17. 5 quarts
- 19. 2 gallons is equal to 8 quarts

- 16. 1 gallon
- 18. 7 quarts

Copyright © FreeMathProgram.com All rights reserved.