

Measurement

Skill 3 - 22C





Metric Units: Capacity

Directions: Choose the better estimate.

1,000 milliliters = 1 liter

1. Which is the best estimate of how much liquid a dropper holds? 2 mL or 2 L
2. About how much liquid does a glass hold? 250 mL or 250 L
3. Which is the best estimate of how much a water bottle will hold? 1 mL or 1L
4. About how much water does a regular size bathtub hold? 95mL or 95L
5. About how much juice does a small juice box hold? 100mL or 100L
6. About how much water does a child size swimming pool hold? 200mL or 200L
7. About how much liquid does a bucket hold? 10mL or 10L
8. About how much water does a small fish bowl hold? 2mL or 2L.





Circle the better estimate.

<p>9.</p>  <p>20 mL or 20L?</p>	<p>10.</p>  <p>5 mL or 5L?</p>
<p>11.</p>  <p>2 mL or 2L?</p>	<p>12.</p>  <p>5 mL or 5L?</p>

Answer Key
Skill 3 - 22C

1. Which is the best estimate of how much liquid a dropper holds? **2 mL** or 2 L
2. About how much liquid does a glass hold? **250 mL** or 250 L
3. Which is the best estimate of how much a water bottle will hold? 1 mL or **1L**
4. About how much water does a regular size bathtub hold? 95mL or **95L**
5. About how much juice does a small juice box hold? **100mL** or 100L
6. About how much water does a child size swimming pool hold? 200mL or **200L**
7. About how much liquid does a bucket hold? 10mL or **10L**
8. About how much water does a small fish bowl hold? 2mL or **2L**.

Circle the better estimate.

<p>9.</p>  <p>20 mL or 20L?</p>	<p>10.</p>  <p>5 mL or 5L?</p>
<p>11.</p>  <p>2 mL or 2L?</p>	<p>12.</p>  <p>5 mL or 5L?</p>