

Geometric Figures

Skill 3 - 23E

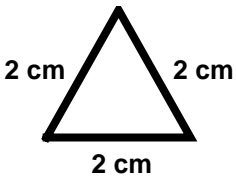
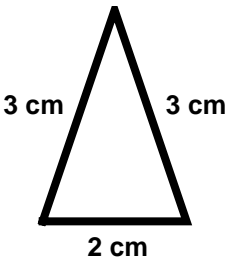
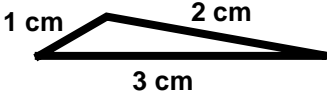
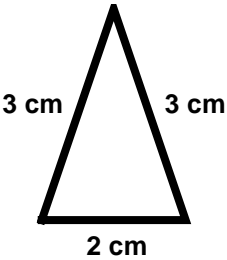
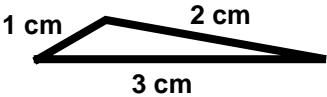
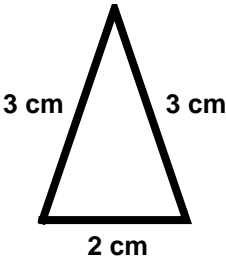
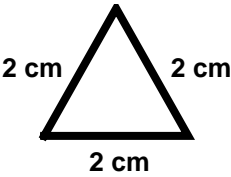
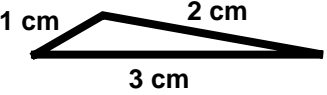
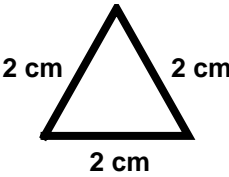
Triangles: Isosceles, Scalene, and Equilateral

Equilateral triangle – 3 sides are the same length.

Isosceles triangle – 2 sides are the same length.

Scalene triangle – No sides are the same length.

Directions: Identify the triangles. Write isosceles, scalene or equilateral under each triangle.

<p>1.</p> <div style="text-align: center;">  <p>2 cm 2 cm 2 cm</p> </div> <p style="text-align: center;">3 equal sides</p>	<p>2.</p> <div style="text-align: center;">  <p>3 cm 3 cm 2 cm</p> </div> <p style="text-align: center;">2 equal sides</p>	<p>3.</p> <div style="text-align: center;">  <p>1 cm 2 cm 3 cm</p> </div> <p style="text-align: center;">0 equal sides</p>
<p>4.</p> <div style="text-align: center;">  <p>3 cm 3 cm 2 cm</p> </div> <p style="text-align: center;">2 equal sides</p>	<p>5.</p> <div style="text-align: center;">  <p>1 cm 2 cm 3 cm</p> </div> <p style="text-align: center;">0 equal sides</p>	<p>6.</p> <div style="text-align: center;">  <p>3 cm 3 cm 2 cm</p> </div> <p style="text-align: center;">2 equal sides</p>
<p>7.</p> <div style="text-align: center;">  <p>2 cm 2 cm 2 cm</p> </div> <p style="text-align: center;">3 equal sides</p>	<p>8.</p> <div style="text-align: center;">  <p>1 cm 2 cm 3 cm</p> </div> <p style="text-align: center;">0 equal sides</p>	<p>9.</p> <div style="text-align: center;">  <p>2 cm 2 cm 2 cm</p> </div> <p style="text-align: center;">3 equal sides</p>

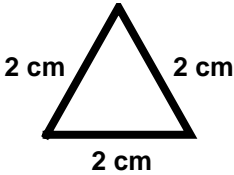
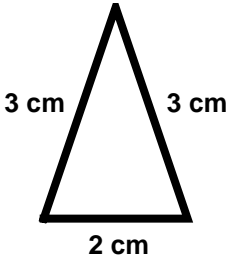
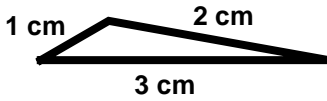
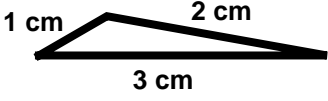
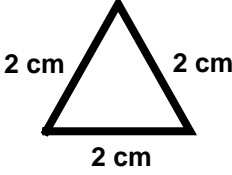
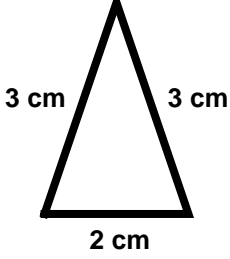
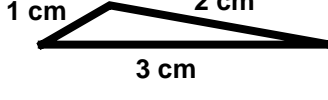
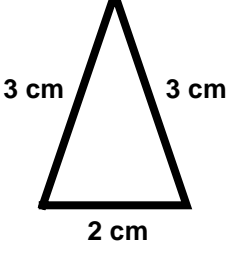
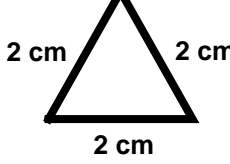
Name _____ Date _____

Geometric Figures

Skill 3 - 23E

Triangles: Isosceles, Scalene, and Equilateral

Directions: Identify the triangles. Write isosceles, scalene or equilateral under each triangle.

<p>10.</p> 	<p>11.</p> 	<p>12.</p> 
<p>13.</p> 	<p>14.</p> 	<p>15.</p> 
<p>16.</p> 	<p>17.</p> 	<p>18.</p> 

Answer Key
Skill 3 - 23E

- | | | |
|--------------------------|--------------------------|--------------------------|
| 1. equilateral triangle | 2. isosceles triangle | 3. scalene triangle |
| 4. isosceles triangle | 5. scalene triangle | 6. isosceles triangle |
| 7. equilateral triangle | 8. scalene triangle | 9. equilateral triangle |
| 10. equilateral triangle | 11. isosceles triangle | 12. scalene triangle |
| 13. scalene triangle | 14. equilateral triangle | 15. isosceles triangle |
| 16. scalene triangle | 17. isosceles triangle | 18. equilateral triangle |

Copyright © FreeMathProgram.com All rights reserved.