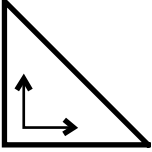

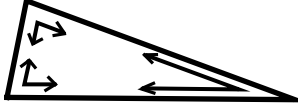


Geometric Figures

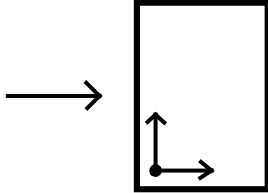
Skill 3 – 23F

Triangles: Right, Obtuse and Acute

Examples

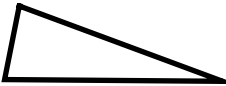


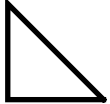

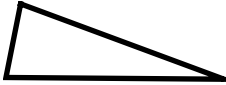

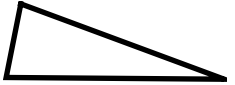
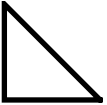
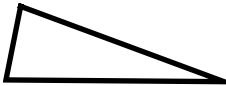
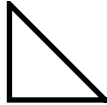

<p>right triangle</p>  <p>A right triangle has 1 right angle. (a right angle is exactly 90 degrees)</p>	<p>obtuse triangle</p>  <p>An obtuse triangle has 1 obtuse angle. (an obtuse angle is greater than 90 degrees)</p>	<p>acute triangle</p>  <p>An acute triangle has 3 acute angles. (an acute angle is less than 90 degrees)</p>
--	---	---

Use the corner of a piece of paper to tell if an angle is a right angle, obtuse angle or an acute angle.



note: the corner of a piece of paper equals a right angle or 90°.

Directions: Name the triangle. Write right triangle, obtuse triangle or acute triangle.


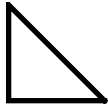



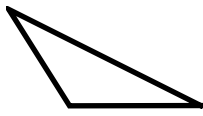




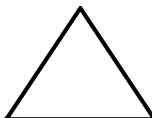
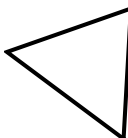
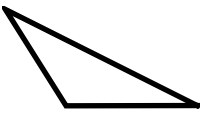

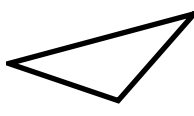
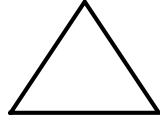

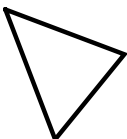
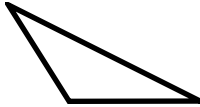


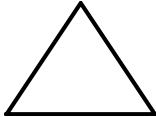

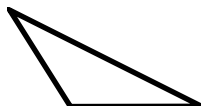
<p>1.</p>  <p>_____</p>	<p>2.</p>  <p>_____</p>	<p>3.</p>  <p>_____</p>	<p>4.</p>  <p>_____</p>
<p>5.</p>  <p>_____</p>	<p>6.</p>  <p>_____</p>	<p>7.</p>  <p>_____</p>	<p>8.</p>  <p>_____</p>
<p>9.</p>  <p>_____</p>	<p>10.</p>  <p>_____</p>	<p>11.</p>  <p>_____</p>	<p>12.</p>  <p>_____</p>

Geometric Figures

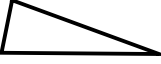




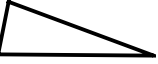

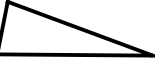

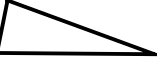




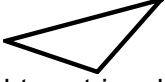


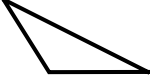


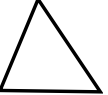



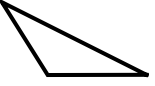





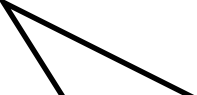




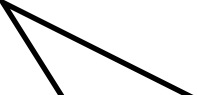
Skill 3 – 23F

Triangles: Right, Obtuse and Acute

Directions: Identify the triangle. Write acute triangle, obtuse triangle or right triangle under each triangle.

13.  _____	14.  _____	15.  _____	16.  _____
17.  _____	18.  _____	19.  _____	20.  _____
21.  _____	22.  _____	23.  _____	24.  _____
25.  _____	26.  _____	27.  _____	28.  _____
29.  _____	30.  _____	31.  _____	32.  _____
33.  _____	34.  _____	35.  _____	36.  _____

Answer Key
Skill 3 – 23F

1.  acute triangle	2.  right triangle	3.  obtuse triangle	4.  right triangle
5.  obtuse triangle	6.  acute triangle	7.  obtuse triangle	8.  acute triangle
9.  right triangle	10.  acute triangle	11.  right triangle	12.  obtuse triangle
13.  right triangle	14.  right triangle	15.  obtuse triangle	16.  acute triangle
17.  acute triangle	18.  obtuse triangle	19.  right triangle	20.  acute triangle
21.  acute triangle	22.  obtuse triangle	23.  acute triangle	24.  acute triangle
25.  obtuse triangle	26.  right triangle	27.  obtuse triangle	28.  acute triangle
29.  right triangle	30.  acute triangle	31.  obtuse triangle	32.  obtuse triangle
33.  acute triangle	34.  acute triangle	35.  obtuse triangle	36.  obtuse triangle