

Geometric Figures

Skill 3 – 23H

Line and Line Segments

Directions: Fill in the blank with the correct word from the list below.

angle

point


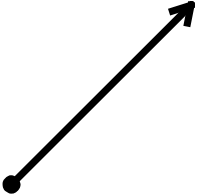


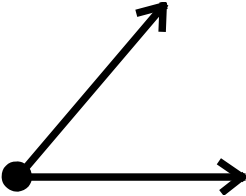

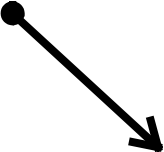



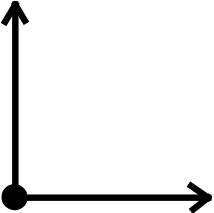
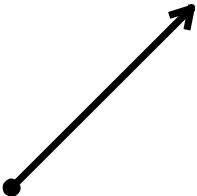
line

line segment

ray

1. A _____ is straight and endless.
2. A _____ is an exact location.
3. A _____ is straight and has 2 endpoints.
4. An _____ is formed when two line segments meet at one point.
5. A _____ is a part of a line that has one endpoint and goes on forever in one direction.

Directions: Write the name of each figure (angle, point, line, line segment or ray). Write in each box.

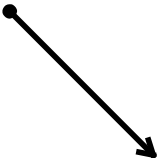

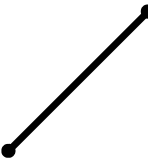
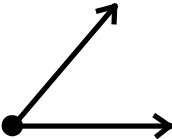

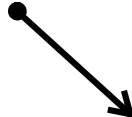
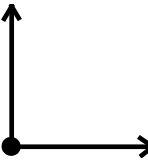

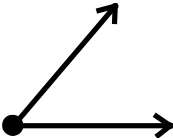


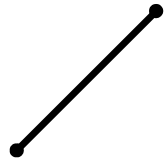

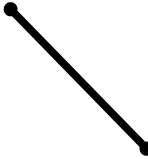

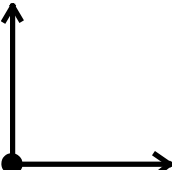

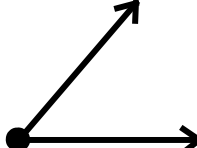


1.  _____	2.  _____	3.  _____	4.  _____
5.  _____	6.  _____	7.  _____	8.  _____
9.  _____	10.  _____	11.  _____	12.  _____

Geometric Figures

Skill 3 – 23H

Line and Line Segments

Directions: Write the name of each figure (angle, point, line, line segment or ray). Write in each box.

13.  _____	14.  _____	15.  _____	16.  _____
17.  _____	18.  _____	19.  _____	20.  _____
21.  _____	22.  _____	23.  _____	24.  _____
25.  _____	26.  _____	27.  _____	28.  _____
29.  _____	30.  _____	31.  _____	32.  _____

Answer Key 3-23H

1. A line is straight and endless.
2. A point is an exact location.
3. A line segment is straight and has 2 endpoints.
4. An angle is formed when two line segments meet at one point.
5. A ray is a part of a line that has one endpoint and goes on forever in one direction.

- | | | | |
|------------------|------------------|------------------|------------------|
| 1. line | 2. ray | 3. point | 4. line segment |
| 5. angle | 6. line | 7. ray | 8. point |
| 9. line segment | 10. line | 11. angle` | 12. ray |
| 13. ray | 14. line | 15. line segment | 16. angle |
| 17. line segment | 18. ray | 19. angle | 20. line |
| 21. angle | 22. point | 23. ray | 24. line segment |
| 25. line | 26. line segment | 27. ray | 28. angle |
| 29. line segment | 30. angle | 31. line | 32. point |