

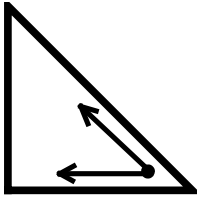
Geometric Figures

Skill 3 – 23I

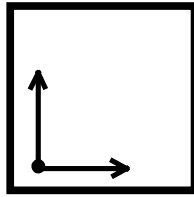
Angles

Directions: Write acute angle, obtuse angle or right angle on the line below each figure.

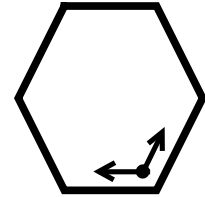
Examples



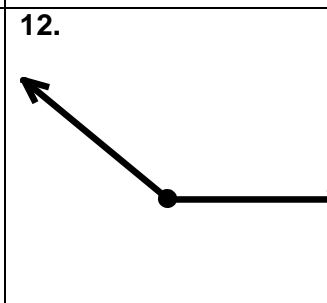
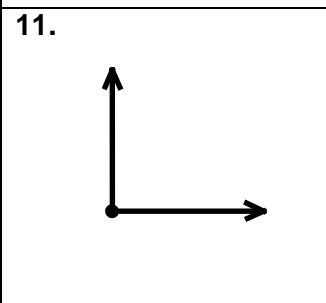
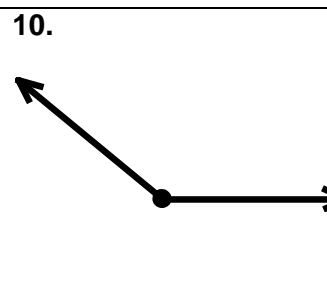
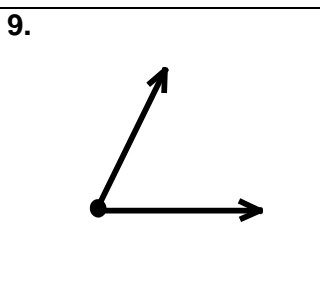
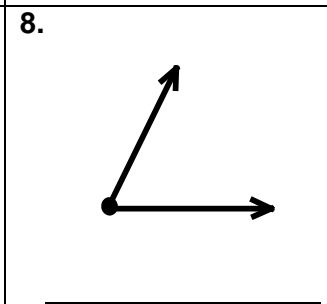
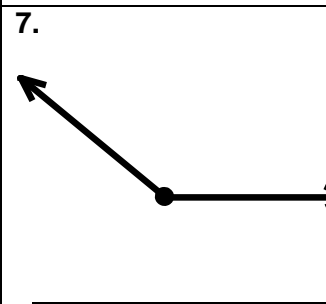
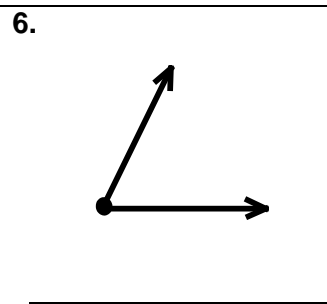
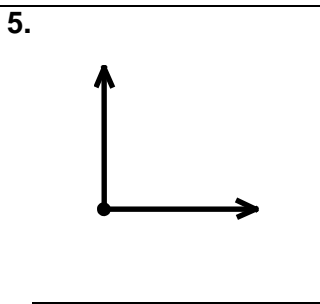
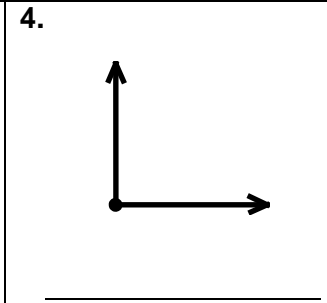
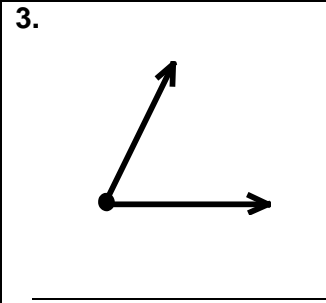
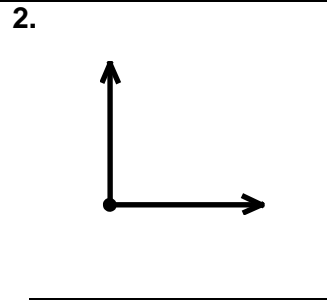
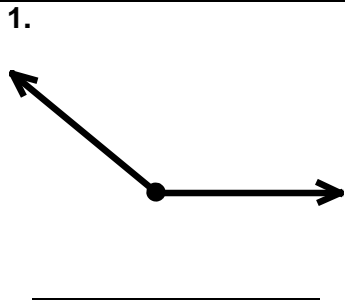
Acute Angle
(less than 90°)



Right Angle
(exactly 90°)



Obtuse Angle
(more than 90°)

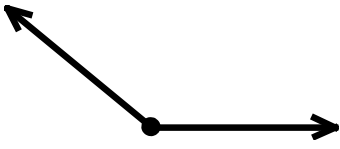
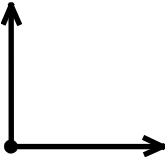
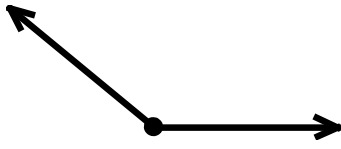
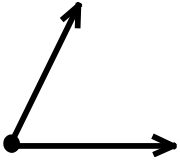
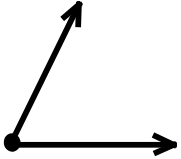
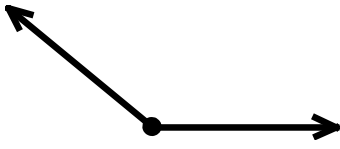
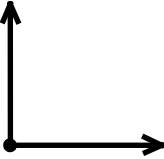
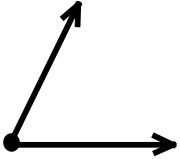
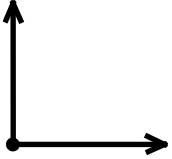
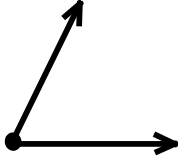
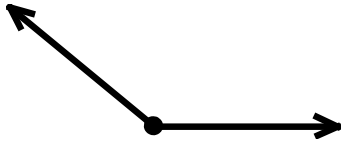
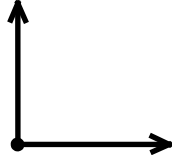
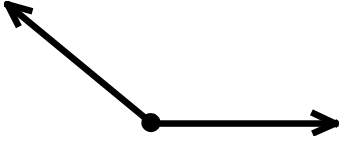
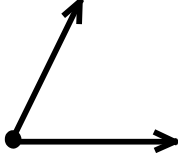
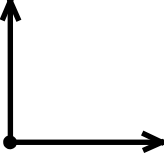
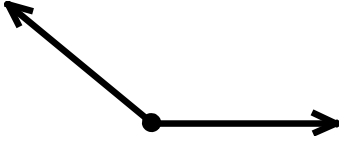


Geometric Figures

Skill 3 – 23I

Angles

Directions: Write acute angle, obtuse angle or right angle on the line below each figure.


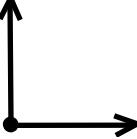
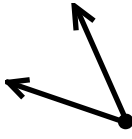
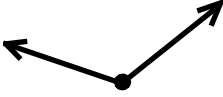
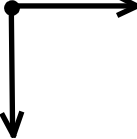
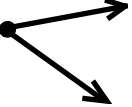

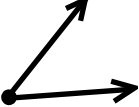
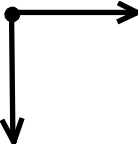
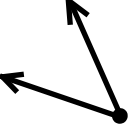
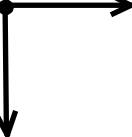
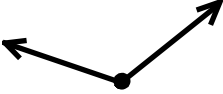
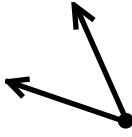
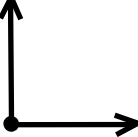

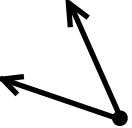
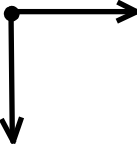
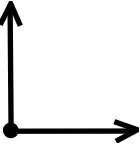
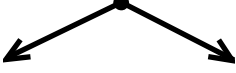
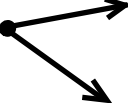
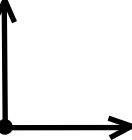
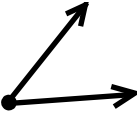
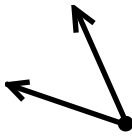
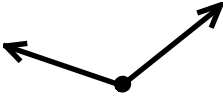
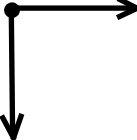
13.  _____	14.  _____	15.  _____	16.  _____
17.  _____	18.  _____	19.  _____	20.  _____
21.  _____	22.  _____	23.  _____	24.  _____
25.  _____	26.  _____	27.  _____	28.  _____

Geometric Figures

Skill 3 – 23I

Angles

Directions: Place a small check mark by each correct answer.

29.  acute angle obtuse angle right angle	30.  acute angle obtuse angle right angle	31.  acute angle obtuse angle right angle	32.  acute angle obtuse angle right angle	33.  acute angle obtuse angle right angle
34.  acute angle obtuse angle right angle	35.  acute angle obtuse angle right angle	36.  acute angle obtuse angle right angle	37.  acute angle obtuse angle right angle	38.  acute angle obtuse angle right angle
39.  acute angle obtuse angle right angle	40.  acute angle obtuse angle right angle	41.  acute angle obtuse angle right angle	42.  acute angle obtuse angle right angle	43.  acute angle obtuse angle right angle
44.  acute angle obtuse angle right angle	45.  acute angle obtuse angle right angle	46.  acute angle obtuse angle right angle	47.  acute angle obtuse angle right angle	48.  acute angle obtuse angle right angle
49.  acute angle obtuse angle right angle	50.  acute angle obtuse angle right angle	51.  acute angle obtuse angle right angle	52.  acute angle obtuse angle right angle	53.  acute angle obtuse angle right angle

Answer Key 3-23I

- | | | | | |
|------------|------------|------------|------------|------------|
| 1. obtuse | 2. right | 3. acute | 4. right | |
| 5. right | 6. acute | 7. obtuse | 8. acute | |
| 9. acute | 10. obtuse | 11. right | 12. obtuse | |
| 13. obtuse | 14. right | 15. obtuse | 16. acute | |
| 17. acute | 18. obtuse | 19. right | 20. acute | |
| 21. right | 22. acute | 23. obtuse | 24. right | |
| 25. obtuse | 26. acute | 27. right | 28. obtuse | |
| 29. obtuse | 30. right | 31. acute | 32. obtuse | 33. right |
| 34. acute | 35. obtuse | 36. acute | 37. right | 38. acute |
| 39. right | 40. obtuse | 41. acute | 42. right | 43. obtuse |
| 44. acute | 45. right | 46. right | 47. obtuse | 48. acute |
| 49. right | 50. acute | 51. acute | 52. obtuse | 53. right |