

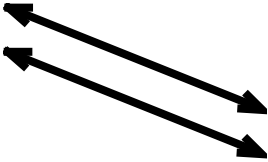
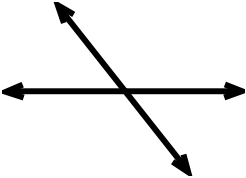


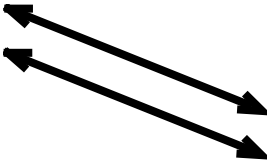
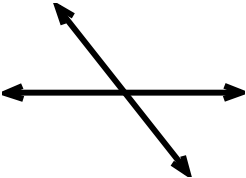

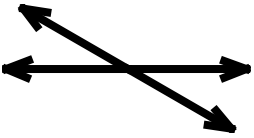

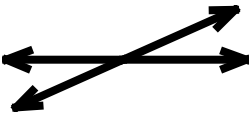
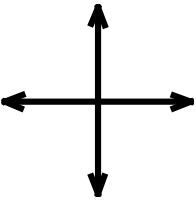

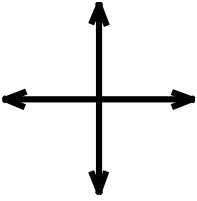
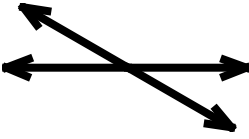
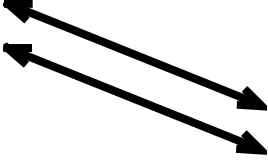
Geometric Figures

Skill 3 - 23J

Parallel and Intersecting Lines

Directions: Write parallel lines or intersecting lines on the line below each set of lines.

Write parallel lines or intersecting lines.

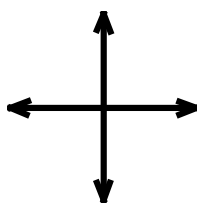

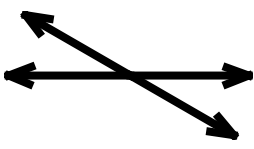

| | | | |
|---|---|--|---|
| 1.  _____ | 2.  _____ | 3.  _____ | |
| 4.  _____ | 5.  _____ | 6.  _____ | 7.  _____ |
| 8.  _____ | 9.  _____ | 10.  _____ | 11.  _____ |
| 12.  _____ | 13.  _____ | 14.  _____ | 15.  _____ |

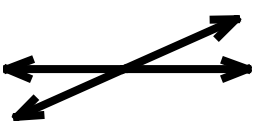


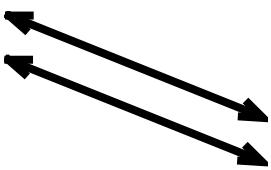
Geometric Figures

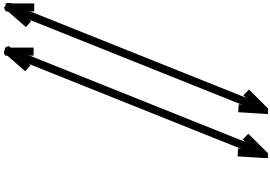
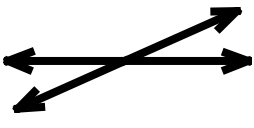
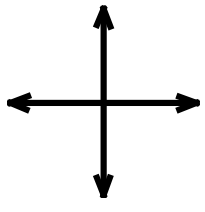
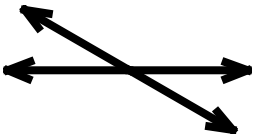
Skill 3 - 23J


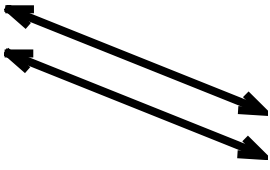
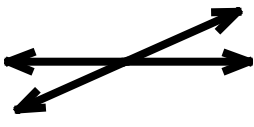

Parallel and Intersecting Lines

Directions: Write parallel lines or intersecting lines on the line below each set of lines.

| | | | |
|---|---|--|---|
| 16.  _____ | 17.  _____ | 18.  _____ | 19.  _____ |
|---|---|--|---|

| | | | |
|--|--|---|--|
| 20.  _____ | 21.  _____ | 22.  _____ | 23.  _____ |
|--|--|---|--|

| | | | |
|---|---|--|---|
| 24.  _____ | 25.  _____ | 26.  _____ | 27.  _____ |
|---|---|--|---|

| | | | |
|---|---|--|---|
| 28.  _____ | 29.  _____ | 30.  _____ | 31.  _____ |
|---|---|--|---|

Answer Key
Skill 3 - 23J

| | | | |
|------------------------------------|------------------------------------|------------------------------------|------------------------------------|
| 1. parallel lines | 2. intersecting lines | 3. parallel lines | |
| 4. parallel lines _____ | 5. parallel lines _____ | 6. intersecting lines _____ | 7. parallel lines _____ |
| 8. intersecting lines _____ | 9. parallel lines _____ | 10. intersecting lines _____ | 11. intersecting lines _____ |
| 12. parallel lines _____ | 13. intersecting lines _____ | 14. intersecting lines _____ | 15. parallel lines _____ |
| 16. intersecting lines _____ | 17. parallel lines _____ | 18. intersecting lines _____ | 19. parallel lines _____ |
| 20. intersecting lines _____ | 21. parallel lines _____ | 22. parallel lines _____ | 23. parallel lines _____ |
| 24. parallel lines _____ | 25. intersecting lines _____ | 26. intersecting lines _____ | 27. intersecting lines _____ |
| 28. parallel lines _____ | 29. parallel lines _____ | 30. intersecting lines _____ | 31. parallel lines _____ |