


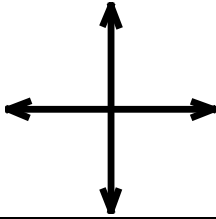



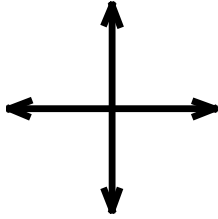

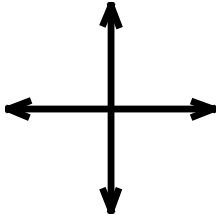
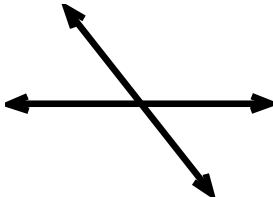
# Geometric Figures

## Skill 3 - 23K

### Perpendicular Lines

Perpendicular lines are lines that meet to form right angles.

**Directions:** Circle perpendicular or not perpendicular for each set of intersecting lines.

<p>1.</p> <p>perpendicular or not perpendicular</p> 	<p>2.</p> <p>perpendicular or not perpendicular</p> 	<p>3.</p> <p>perpendicular or not perpendicular</p> 
<p>4.</p> <p>perpendicular or not perpendicular</p> 	<p>5.</p> <p>perpendicular or not perpendicular</p> 	<p>6.</p> <p>perpendicular or not perpendicular</p> 
<p>7.</p> <p>perpendicular or not perpendicular</p> 	<p>8.</p> <p>perpendicular or not perpendicular</p> 	<p>9.</p> <p>perpendicular or not perpendicular</p> 

# Geometric Figures

## Skill 3 - 23K

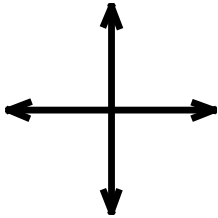
### Perpendicular Lines

Perpendicular lines are lines that meet to form right angles.

**Directions:** Circle perpendicular or not perpendicular for each set of intersecting lines.

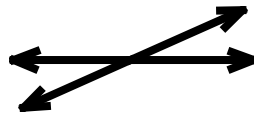
10.

perpendicular or  
not perpendicular




11.

perpendicular or  
not perpendicular




12.

perpendicular or  
not perpendicular



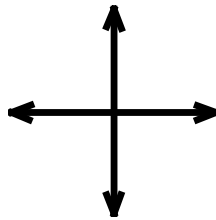
13.

perpendicular or  
not perpendicular



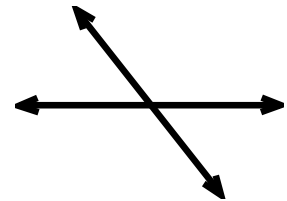
14.

perpendicular or  
not perpendicular



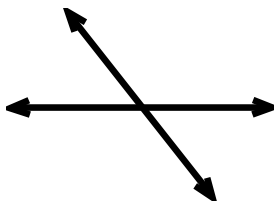
15.

perpendicular or  
not perpendicular



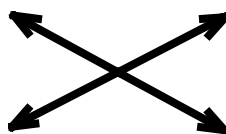
16.

perpendicular or  
not perpendicular



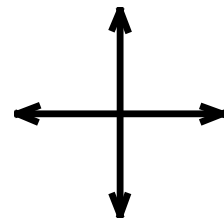
17.

perpendicular or  
not perpendicular



18.

perpendicular or  
not perpendicular



Answer Key  
Skill 3 - 23K

- |     |                                       |     |                                       |     |                                       |
|-----|---------------------------------------|-----|---------------------------------------|-----|---------------------------------------|
| 1.  | perpendicular or<br>not perpendicular | 2.  | perpendicular or<br>not perpendicular | 3.  | perpendicular or<br>not perpendicular |
| 4.  | perpendicular or<br>not perpendicular | 5.  | perpendicular or<br>not perpendicular | 6.  | perpendicular or<br>not perpendicular |
| 7.  | perpendicular or<br>not perpendicular | 8.  | perpendicular or<br>not perpendicular | 9.  | perpendicular or<br>not perpendicular |
| 10. | perpendicular or<br>not perpendicular | 11. | perpendicular or<br>not perpendicular | 12. | perpendicular or<br>not perpendicular |
| 13. | perpendicular or<br>not perpendicular | 14. | perpendicular or<br>not perpendicular | 15. | perpendicular or<br>not perpendicular |
| 16. | perpendicular or<br>not perpendicular | 17. | perpendicular or<br>not perpendicular | 18. | perpendicular or<br>not perpendicular |