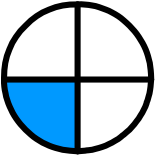

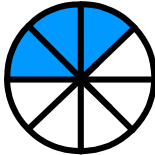




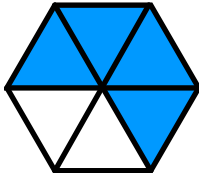
Fractions




Skill 3 - 25A


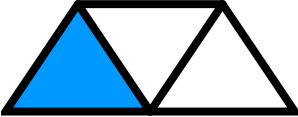
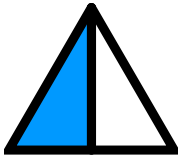
Parts of a Whole




Directions: Write a fraction for the shaded part.

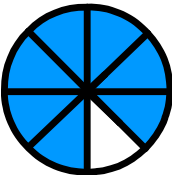
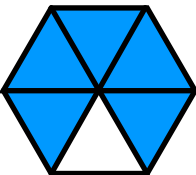

<p>EXAMPLE</p>  <p style="text-align: center; font-size: 2em;">$\frac{1}{4}$</p>	<p>EXAMPLE</p>  <p style="text-align: center; font-size: 2em;">$\frac{4}{5}$</p>	<p>1.</p> 
--	---	---

<p>2.</p> 	<p>3.</p> 	<p>4.</p> 
--	---	---

<p>5.</p> 	<p>6.</p> 	<p>7.</p> 
---	--	--

<p>8.</p> 	<p>9.</p> 	<p>10.</p> 
--	---	--

<p>11.</p> 	<p>12.</p> 	<p>13.</p> 
---	--	--

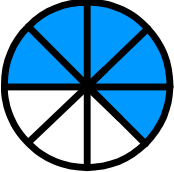
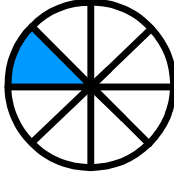

<p>14.</p> 	<p>15.</p> 	<p>16.</p> 
---	--	--




Fractions




Skill 3 - 25A




Parts of a Whole

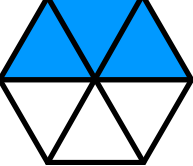
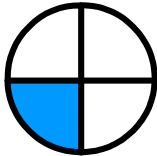

Directions: Write a fraction for the shaded part.


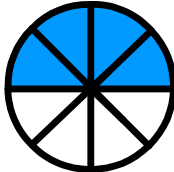

<p>17.</p> 	<p>18.</p> 	<p>19.</p> 
---	--	--

<p>20.</p> 	<p>21.</p> 	<p>22.</p> 
---	--	--

<p>23.</p> 	<p>24.</p> 	<p>25.</p> 
--	---	---

<p>26.</p> 	<p>27.</p> 	<p>28.</p> 
---	--	--

<p>29.</p> 	<p>30.</p> 	<p>31.</p> 
---	--	--

<p>32.</p> 	<p>33.</p> 	<p>34.</p> 
---	--	--

Answer Key
Skill 3 - 25A

		1. $3/8$
2. $1/2$	3. $3/5$	4. $4/6$
5. $3/5$	6. $3/4$	7. $3/4$
8. $5/8$	9. $1/3$	10. $1/2$
11. $3/4$	12. $2/4$	13. $7/8$
14. $7/8$	15. $5/6$	16. $1/5$
7. $5/8$	18. $1/8$	19. $2/5$
20. $2/4$	21. $3/4$	22. $1/8$
23. $1/2$	24. $4/5$	25. $3/4$
26. $1/4$	27. $1/4$	28. $4/4$
29. $3/6$	30. $1/4$	31. $4/8$
32. $1/4$	33. $4/8$	34. $4/4$