

# Probability

## Skill 3 - 26F

### Likely, Unlikely, Certain, Impossible


**Directions:** Read the problem. Circle the answer.

1. Which number is the pointer **most likely** to land on after spinning the spinner?

A. 1      B. 2      C. 3      D. 4

2. Which number is the pointer **least likely** to land on?

A. 1      B. 2      C. 3      D. 4




3. Which number is the pointer most likely to land on after spinning the spinner?

A. 1      B. 2      C. 3      D. 4

4. Which number is the pointer least likely to land on?

A. 1      B. 2      C. 3      D. 4




5. Which number is the pointer most likely to land on after spinning the spinner?

A. 1      B. 2      C. 3      D. 4

6. Which number is the pointer least likely to land on?

A. 1      B. 2      C. 3      D. 4




7. Which number is the pointer most likely to land on after spinning the spinner?

A. 1      B. 2      C. 3      D. 4

8. Which number is the pointer least likely to land on?

A. 1      B. 2      C. 3      D. 4



# Probability


## Skill 3 - 26F

### Likely, Unlikely, Certain, Impossible

**Directions:** Circle the answer that describes the probability of each event.

9.


Probability of pulling a white marble. Circle one.



certain  
likely  
unlikely  
impossible

10.


Probability of pulling a white marble. Circle one.



certain  
likely  
unlikely  
impossible

11.


Probability of pulling a black marble. Circle one.



certain  
likely  
unlikely  
impossible

12.


Probability of pulling a black marble. Circle one.



certain  
likely  
unlikely  
impossible

13.


Probability of pulling a black marble. Circle one.



certain  
likely  
unlikely  
impossible

14.

Probability of pulling a black marble. Circle one.



certain  
likely  
unlikely  
impossible

15.


Probability of pulling a gray marble. Circle one.



certain  
likely  
unlikely  
impossible

16.

Probability of pulling a white marble. Circle one.



certain  
likely  
unlikely  
impossible


# Probability

## Skill 3 - 26F

### Likely, Unlikely, Certain, Impossible


**Directions:** Circle the answer that describes the probability of each event.

17. Probability of pulling a black marble. Circle one.




certain  
likely  
unlikely  
impossible

18. Probability of pulling a white marble. Circle one.




certain  
likely  
unlikely  
impossible

19. Probability of pulling a gray marble. Circle one.




certain  
likely  
unlikely  
impossible

20. Probability of pulling a black marble. Circle one.




certain  
likely  
unlikely  
impossible

21. Probability of pulling a black marble. Circle one.




certain  
likely  
unlikely  
impossible

22. Probability of pulling a white marble. Circle one.




certain  
likely  
unlikely  
impossible

23. Probability of pulling a white marble. Circle one.



certain  
likely  
unlikely  
impossible

24. Probability of pulling a black marble. Circle one.




certain  
likely  
unlikely  
impossible

Answer Key  
Skill 3 - 26F

1. Which number is the pointer **most likely** to land on after spinning the spinner?

A. 1      B. 2      C. 3      D. 4




2. Which number is the pointer **least likely** to land on?

A. 1      B. 2      C. 3      D. 4

3. Which number is the pointer most likely to land on after spinning the spinner?

A. 1      B. 2      C. 3      D. 4




4. Which number is the pointer least likely to land on?

A. 1      B. 2      C. 3      D. 4

5. Which number is the pointer most likely to land on after spinning the spinner?

A. 1      B. 2      C. 3      D. 4




6. Which number is the pointer least likely to land on?

A. 1      B. 2      C. 3      D. 4

7. Which number is the pointer most likely to land on after spinning the spinner?

A. 1      B. 2      C. 3      D. 4







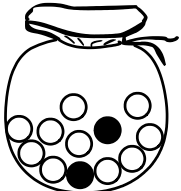



8. Which number is the pointer least likely to land on?

A. 1      B. 2      C. 3      D. 4

Answer Key  
Skill 3 - 26F

Likely, Unlikely, Certain, Impossible









Directions: Circle the answer that describes the probability of each event.

<p>9. Probability of pulling a white marble. Circle one.</p>  <p>certains likely <b>unlikely</b> impossible</p>	<p>10. Probability of pulling a white marble. Circle one.</p>  <p>certains <b>likely</b> unlikely impossible</p>
<p>11. Probability of pulling a black marble. Circle one.</p>  <p>certains likely unlikely <b>impossible</b></p>	<p>12. Probability of pulling a black marble. Circle one.</p>  <p><b>certains</b> likely unlikely impossible</p>
<p>13. Probability of pulling a black marble. Circle one.</p>  <p>certains likely <b>unlikely</b> impossible</p>	<p>14. Probability of pulling a black marble. Circle one.</p>  <p>certains <b>likely</b> unlikely impossible</p>
<p>15. Probability of pulling a gray marble. Circle one.</p>  <p>certains likely unlikely <b>impossible</b></p>	<p>16. Probability of pulling a white marble. Circle one.</p>  <p><b>certains</b> likely unlikely impossible</p>

Answer Key  
Skill 3 - 26F

Likely, Unlikely, Certain, Impossible

Directions: Circle the answer that describes the probability of each event.

<p>17. Probability of pulling a black marble. Circle one.</p>  <p>certain likely unlikely <b>impossible</b></p>	<p>18. Probability of pulling a white marble. Circle one.</p>  <p>certain likely <b>unlikely</b> impossible</p>
<p>19. Probability of pulling a gray marble. Circle one.</p>  <p>certain likely unlikely <b>impossible</b></p>	<p>20. Probability of pulling a black marble. Circle one.</p>  <p>certain <b>likely</b> unlikely impossible</p>
<p>21. Probability of pulling a black marble. Circle one.</p>  <p><b>certain</b> likely unlikely impossible</p>	<p>22. Probability of pulling a white marble. Circle one.</p>  <p>certain <b>likely</b> unlikely impossible</p>
<p>23. Probability of pulling a white marble. Circle one.</p>  <p>certain likely unlikely <b>impossible</b></p>	<p>24. Probability of pulling a black marble. Circle one.</p>  <p>certain likely <b>unlikely</b> impossible</p>