

Probability

Skill 3 - 26G

Outcomes


Directions: Read the questions and write the answer. Question 1 has been done for you.

1. List all possible outcomes of the spinner.

1, 1, 1, 2, 2, 2, 3, 3


Which outcomes are equally likely?

1,2




2. List all possible outcomes of the spinner.

Which outcomes are equally likely?




3. List all possible outcomes of the spinner.

Which outcomes are equally likely?




4. List all possible outcomes of the spinner.

Which outcomes are equally likely?




5. List all possible outcomes of the spinner.

Which outcomes are equally likely?




6. List all possible outcomes of the spinner.

Which outcomes are equally likely?




7. List all possible outcomes of the spinner.

Which outcomes are equally likely?



8. List all possible outcomes of the spinner.

Which outcomes are equally likely?



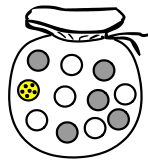
Probability

Skill 3 - 26G

Outcomes

Directions: Read the questions and write the answer. The marbles are gray, white, black and spotted.

9. Look at the possible outcomes from pulling marbles from this bag.

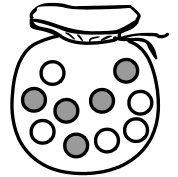


Which outcomes are equally likely?

Answer

Pulling a gray or white marble.

10. Look at the possible outcomes from pulling marbles from this bag.




Which outcomes are equally likely?

11. Look at the possible outcomes from pulling marbles from this bag.



Which outcomes are equally likely?

12. Look at the possible outcomes from pulling marbles from this bag.




Which outcomes are equally likely?

13. Look at the possible outcomes from pulling marbles from this bag.




Which outcomes are equally likely?

14. Look at the possible outcomes from pulling marbles from this bag.




Which outcomes are equally likely?

15. Look at the possible outcomes from pulling marbles from this bag.



Which outcomes are equally likely?

16. Look at the possible outcomes from pulling marbles from this bag.



Which outcomes are equally likely?

Probability

Skill 3 - 26G


Outcomes

Directions: Read the questions and write the answer.

17. Look at the possible outcomes from pulling marbles from this bag.


Which color marble are you **most** likely to pull from the bag?

Answer: gray




18. Look at the possible outcomes from pulling marbles from this bag.

Which color marble are you **least** likely to pull from the bag?




19. Look at the possible outcomes from pulling marbles from this bag.

Which color marble are you **most** likely to pull from the bag?




20. Look at the possible outcomes from pulling marbles from this bag.

Which color marble are you **least** likely to pull from the bag?




21. Look at the possible outcomes from pulling marbles from this bag.

Which color marble are you **most** likely to pull from the bag?




22. Look at the possible outcomes from pulling marbles from this bag.

Which color marble are you **least** likely to pull from the bag?




23. Look at the possible outcomes from pulling marbles from this bag.

Which color marble are you **most** likely to pull from the bag?



24. Look at the possible outcomes from pulling marbles from this bag.

Which color marble are you **least** likely to pull from the bag?



Answer Key
Skill 3 - 26G

<p>1. List all possible outcomes of the spinner. 1, 1, 1, 2, 2, 2, 3, 3 Which outcomes are equally likely? 1,2</p>	<p>2. List all possible outcomes of the spinner. 1,1,1,1,2,2,2,2 Which outcomes are equally likely? 1,2</p>
<p>3. List all possible outcomes of the spinner. 1,1,2,2,3,3,4,4 Which outcomes are equally likely? 1,2,3,4</p>	<p>4. List all possible outcomes of the spinner. 1,1,1,2,2,2,3,3 Which outcomes are equally likely? 1,2</p>
<p>5. List all possible outcomes of the spinner. 1,1,1,1,2,2,3,3 Which outcomes are equally likely? 2,3</p>	<p>6. List all possible outcomes of the spinner. 1,1,1,2,2,2,3,3 Which outcomes are equally likely? 1,2</p>
<p>7. List all possible outcomes of the spinner. 1,2,3,4,5,6,7,8 Which outcomes are equally likely? 1,2,3,4,5,6,7,8</p>	<p>8. List all possible outcomes of the spinner. 10,10,20,20,30,30,40,40 Which outcomes are equally likely? 10,20,30,40</p>
<p>9. Pulling a gray or white marble.</p>	<p>10. pulling a gray or white marble</p>
<p>11. pulling a black or spotted marble</p>	<p>12. pulling a white, gray, black or spotted marble</p>
<p>13. pulling a black, white or spotted marble</p>	<p>14. pulling a white or spotted marble</p>
<p>15. pulling a black, white or spotted marble</p>	<p>16. pulling a black or spotted marble</p>
<p>17. Answer: gray</p>	<p>18. white</p>
<p>19. gray</p>	<p>20. white</p>
<p>21. gray</p>	<p>22. gray</p>
<p>23. gray</p>	<p>24. gray</p>