

Probability


Skill 3 - 26H

Outcomes


Directions: Read the questions and write the answer. Problem 1 has been done for you.

1. What is the chance that the pointer will land on 3?


Answer: 2 out of 8




2. What is the chance that the pointer will land on 6?




3. What is the chance that the pointer will land on 20?




4. What is the chance that the pointer will land on 1?




5. What is the chance that the pointer will land on 1?




6. What is the chance that the pointer will land on 3?




7. What is the chance that the pointer will land on 2?




8. What is the chance that the pointer will land on 1?



9. What is the chance that the pointer will land on 10?




10. What is the chance that the pointer will land on 30?



Answer Key
Skill 3 - 26H


1. What is the chance that the pointer will land on 3?

Answer: 2 out of 8




2. What is the chance that the pointer will land on 6?

1 out of 8




3. What is the chance that the pointer will land on 20?

2 out of 8




4. What is the chance that the pointer will land on 1?

6 out of 8




5. What is the chance that the pointer will land on 1?

3 out of 8




6. What is the chance that the pointer will land on 3?

1 out of eight




7. What is the chance that the pointer will land on 2?

5 out of 8




8. What is the chance that the pointer will land on 1?

1 out of 8



9. What is the chance that the pointer will land on 10?

3 out of 8



10. What is the chance that the pointer will land on 30?

1 out of 8

