




Print in grayscale or color




Fractions and Decimals


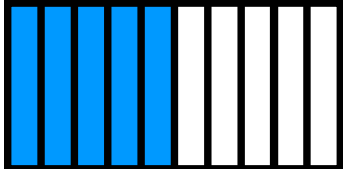

Skill 3 - 27A

Tenths

Directions: Write the fraction and the decimal as shown by the shaded parts of each model.

<p>1. Example</p>  <p>fraction decimal</p> <p>$\frac{3}{10}$ 0.3</p>	<p>2. Example</p>  <p>fraction decimal</p> <p>$\frac{6}{10}$ 0.6</p>	<p>3.</p>  <p>fraction decimal</p>
---	---	--

<p>4.</p>  <p>fraction decimal</p>	<p>5.</p>  <p>fraction decimal</p>	<p>6.</p>  <p>fraction decimal</p>
---	---	---


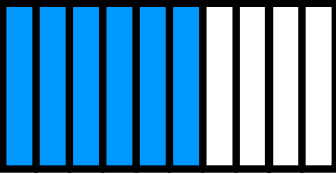

<p>7.</p>  <p>fraction decimal</p>	<p>8.</p>  <p>fraction decimal</p>	<p>9.</p>  <p>fraction decimal</p>
--	--	--




Fractions and Decimals




Skill 3 - 27A

Tenths

Directions: Write the fraction and the decimal as shown by the shaded parts of each model.

<p>10.</p>  <p>fraction decimal</p>	<p>11.</p>  <p>fraction decimal</p>	<p>12.</p>  <p>fraction decimal</p>
---	---	---

<p>13.</p>  <p>fraction decimal</p>	<p>14.</p>  <p>fraction decimal</p>	<p>15.</p>  <p>fraction decimal</p>
---	---	---

<p>16.</p>  <p>fraction decimal</p>	<p>17.</p>  <p>fraction decimal</p>	<p>18.</p>  <p>fraction decimal</p>
---	---	---


Fractions and Decimals

Skill 3 - 27A

Tenths

Directions: Write the fraction and the decimal as shown by the shaded parts of each model.


19.



fraction

decimal


20.



fraction

decimal


21.



fraction

decimal


22.



fraction

decimal


23.



fraction

decimal


24.



fraction

decimal

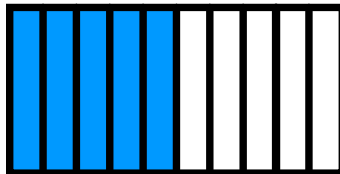
25.



fraction

decimal


26.



fraction

decimal

27.



fraction

decimal

Answer Key
Skill 3 - 27A

1.	$\frac{3}{10}$	0.3	2.	$\frac{6}{10}$	0.6	3.	$\frac{4}{10}$	0.4
4.	$\frac{8}{10}$	0.8	5.	$\frac{2}{10}$	0.2	6.	$\frac{9}{10}$	0.9
7.	$\frac{7}{10}$	0.7	8.	$\frac{5}{10}$	0.5	9.	$\frac{1}{10}$	0.1
10.	$\frac{9}{10}$	0.9	11.	$\frac{6}{10}$	0.6	12.	$\frac{10}{10}$	1.0
13.	$\frac{1}{10}$	0.1	14.	$\frac{5}{10}$	0.5	15.	$\frac{2}{10}$	0.2
16.	$\frac{8}{10}$	0.8	17.	$\frac{7}{10}$	0.7	18.	$\frac{4}{10}$	0.4
19.	$\frac{2}{10}$	0.2	20.	$\frac{8}{10}$	0.8	21.	$\frac{5}{10}$	0.5
22.	$\frac{9}{10}$	0.9	23.	$\frac{1}{10}$	0.1	24.	$\frac{4}{10}$	0.4
25.	$\frac{7}{10}$	0.7	26.	$\frac{5}{10}$	0.5	27.	$\frac{3}{10}$	0.3