

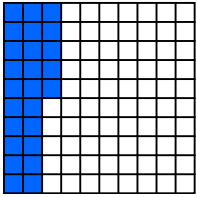
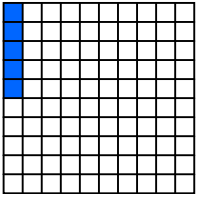
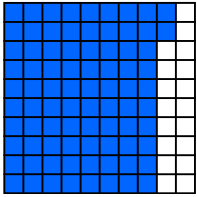
Print in grayscale or color.

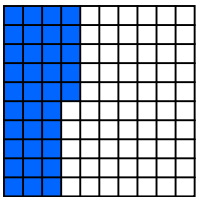
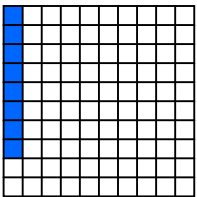
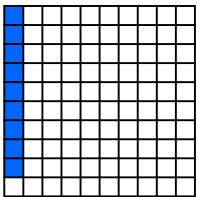
# Fractions and Decimals

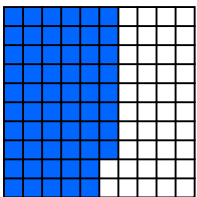

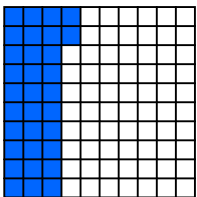
## Skill 3 - 27B

### Hundredths

**Directions:** Write the fraction and the decimal as shown by the shaded parts of each model.

<p>1. <b>Example</b></p>  <p style="text-align: center;">fraction                  decimal</p> <p style="text-align: center;"><math>\frac{24}{100}</math>                  0.24</p>	<p>2. <b>Example</b></p>  <p style="text-align: center;">fraction                  decimal</p> <p style="text-align: center;"><math>\frac{5}{100}</math>                  0.05</p>	<p>3.</p>  <p style="text-align: center;">fraction                  decimal</p>
--	---	--

<p>4.</p>  <p style="text-align: center;">fraction                  decimal</p>	<p>5.</p>  <p style="text-align: center;">fraction                  decimal</p>	<p>6.</p>  <p style="text-align: center;">fraction                  decimal</p>
---	---	---

<p>7.</p>  <p style="text-align: center;">fraction                  decimal</p>	<p>8.</p>  <p style="text-align: center;">fraction                  decimal</p>	<p>9.</p>  <p style="text-align: center;">fraction                  decimal</p>
--	--	--

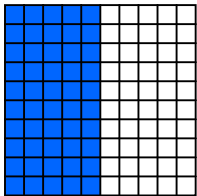
# Fractions and Decimals

## Skill 3 - 27B

### Hundredths

**Directions:** Write the fraction and the decimal as shown by the shaded parts of each model.

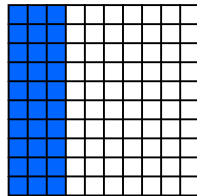
10.



fraction

decimal

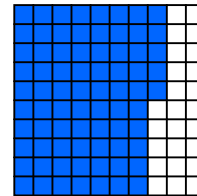
11.



fraction

decimal

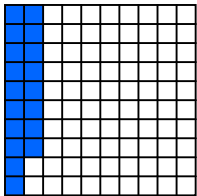
12.



fraction

decimal

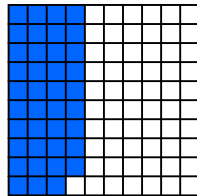
13.



fraction

decimal

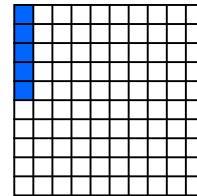
14.



fraction

decimal

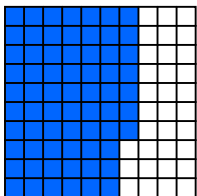
15.



fraction

decimal

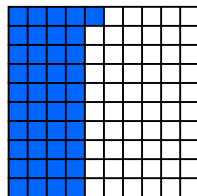
16.



fraction

decimal

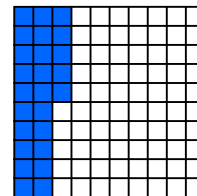
17.



fraction

decimal

18.



fraction

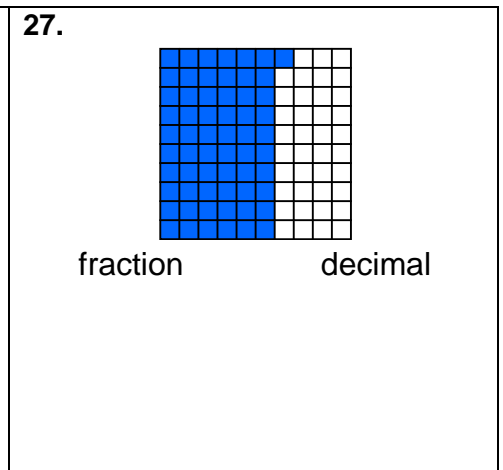
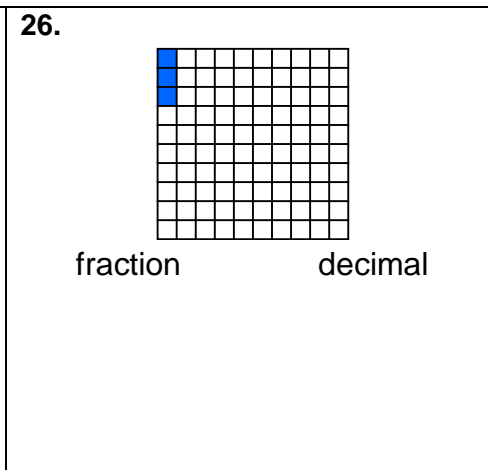
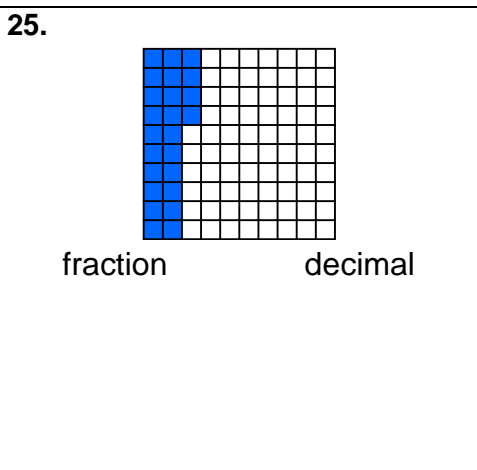
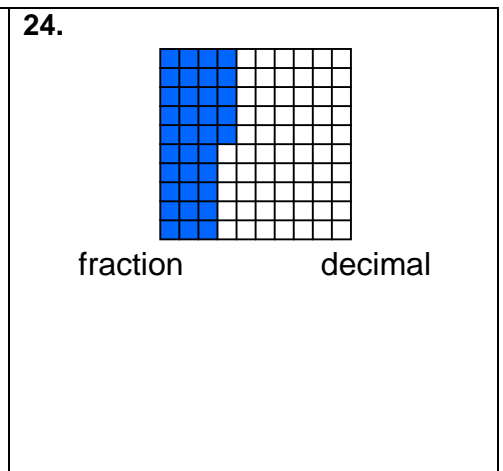
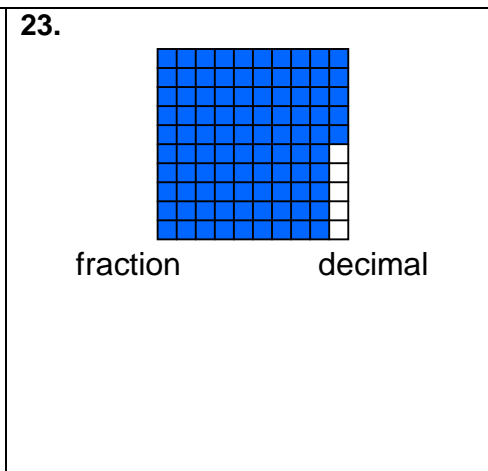
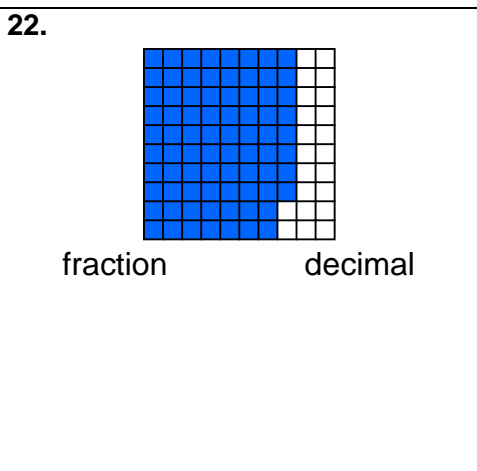
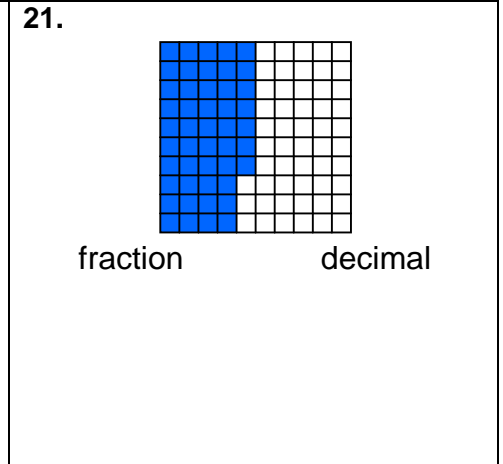
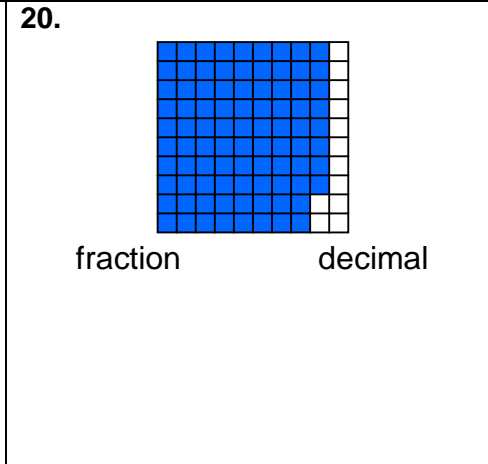
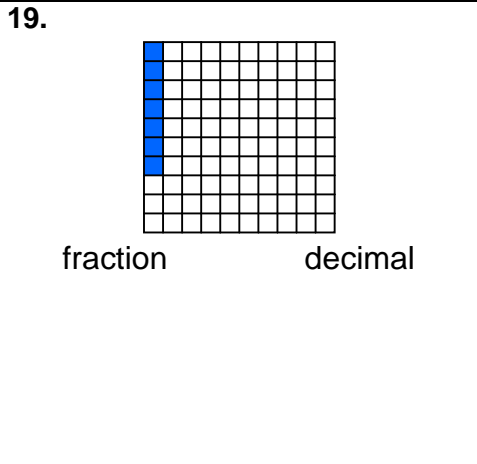
decimal

# Fractions and Decimals

## Skill 3 - 27B

### Hundredths

**Directions:** Write the fraction and the decimal as shown by the shaded parts of each model.



Answer Key  
Skill 3 - 27B

1. $\frac{24}{100}$ 0.24	2. $\frac{5}{100}$ 0.05	3. $\frac{82}{100}$ 0.82
4. $\frac{35}{100}$ 0.35	5. $\frac{8}{100}$ 0.08	6. $\frac{9}{100}$ 0.09
7. $\frac{58}{100}$ 0.58	8. $\frac{2}{10}$ 0.02	9. $\frac{32}{100}$ 0.32
10. $\frac{50}{100}$ 0.50	11. $\frac{30}{100}$ 0.30	12. $\frac{75}{100}$ 0.75
13. $\frac{18}{100}$ 0.18	14. $\frac{39}{100}$ 0.39	15. $\frac{5}{100}$ 0.05
16. $\frac{67}{100}$ 0.67	17. $\frac{41}{100}$ 0.41	18. $\frac{25}{100}$ 0.25
19. $\frac{7}{100}$ 0.07	20. $\frac{88}{100}$ 0.88	21. $\frac{47}{100}$ 0.47
22. $\frac{78}{100}$ 0.78	23. $\frac{95}{100}$ 0.95	24. $\frac{35}{100}$ 0.35
25. $\frac{24}{100}$ 0.24	26. $\frac{3}{100}$ 0.03	27. $\frac{61}{100}$ 0.61