


# Decimals

## Skill 3 - 27G

### Order Decimals

**Directions:** Write the decimals in order from least to greatest. Use the number line.



1.

0.8

0.3

0.1

0.9

\_\_\_\_\_

\_\_\_\_\_

\_\_\_\_\_

\_\_\_\_\_

2.

0.2

0.7

0.6

0.3

\_\_\_\_\_

\_\_\_\_\_

\_\_\_\_\_

\_\_\_\_\_

3.

0.5

0.3

0.1

0.7

\_\_\_\_\_

\_\_\_\_\_

\_\_\_\_\_

\_\_\_\_\_

4.

0.6

0.9

0.4

0.2

\_\_\_\_\_

\_\_\_\_\_

\_\_\_\_\_

\_\_\_\_\_

5.

0.9

0.3

0.7

0.4

\_\_\_\_\_

\_\_\_\_\_

\_\_\_\_\_

\_\_\_\_\_

6.

0.4

0.7

0.2

0.8

\_\_\_\_\_

\_\_\_\_\_

\_\_\_\_\_

\_\_\_\_\_

7.

0.3

0.9

0.2

0.6

\_\_\_\_\_

\_\_\_\_\_

\_\_\_\_\_

\_\_\_\_\_

8.

0.6

0.9

0.2

0.7

\_\_\_\_\_

\_\_\_\_\_

\_\_\_\_\_

\_\_\_\_\_

9.

0.7

0.2

0.6

0.9

\_\_\_\_\_

\_\_\_\_\_

\_\_\_\_\_

\_\_\_\_\_

10.

0.5

0.9

0.4

0.1

\_\_\_\_\_

\_\_\_\_\_

\_\_\_\_\_


\_\_\_\_\_

# Decimals

## Skill 3 - 27G

### Order Decimals

**Directions:** Write the decimals in order from least to greatest. Use the number line.



11.

0.19      0.12      0.15      0.05

\_\_\_\_\_

12.

0.16      0.20      0.09      0.02

\_\_\_\_\_

13.

0.15      0.21      0.10      0.20

\_\_\_\_\_

14.

0.21      0.19      0.10      0.14

\_\_\_\_\_

15.

0.20      0.11      0.13      0.01

\_\_\_\_\_

16.

0.05      0.19      0.12      0.07

\_\_\_\_\_

17.

0.18      0.02      0.10      0.12

\_\_\_\_\_

18.

0.18      0.04      0.12      0.17

\_\_\_\_\_

19.

0.20      0.02      0.09      0.19

\_\_\_\_\_

20.

0.15      0.03      0.18      0.07

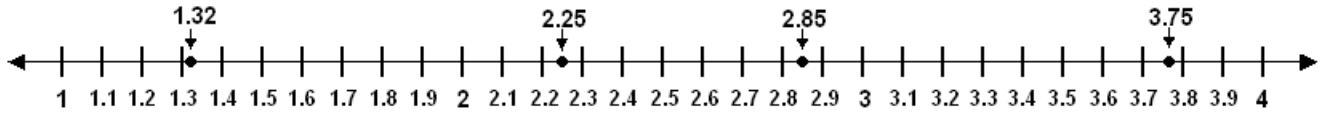
\_\_\_\_\_

# Decimals

## Skill 3 - 27G

### Order Decimals

**Directions:** Write the decimals in order from least to greatest. Use the number line.



<b>21.</b> <b>Example</b> 2.85      1.32      2.25      3.75 <u>1.32</u> <u>2.25</u> <u>2.85</u> <u>3.75</u>	<b>22.</b> 3.93      2.15      1.18      2.95 _____
--	---

<b>23.</b> 1.32      1.56      1.11      1.48 _____	<b>24.</b> 3.31      3.52      3.25      3.75 _____
---	---

<b>25.</b> 1.74      1.61      2.15      2.62 _____	<b>26.</b> 2.63      3.12      1.55      3.58 _____
---	---

<b>27.</b> 2.51      3.47      3.45      1.82 _____	<b>28.</b> 2.29      2.36      2.25      2.14 _____
---	---

<b>29.</b> 1.98      1.33      1.76      1.18 _____	<b>30.</b> 1.65      2.19      3.75      2.84 _____
---	---

Answer Key  
Skill 3 - 27G

1. 0.1, 0.3, 0.8, 0.9	2. 0.2, 0.3, 0.6, 0.7
3. 0.1, 0.3, 0.5, 0.7	4. 0.2, 0.4, 0.6, 0.9
5. 0.3, 0.4, 0.7, 0.9	6. 0.2, 0.4, 0.7, 0.8
7. 0.2, 0.3, 0.6, 0.9	8. 0.2, 0.6, 0.7, 0.9
9. 0.2, 0.6, 0.7, 0.9	10. 0.1, 0.4, 0.5, 0.9
11. 0.05, 0.12, 0.15, 0.19	12. 0.02, 0.09, 0.16, 0.20
13. 0.10, 0.15, 0.20, 0.21	14. 0.10, 0.14, 0.19, 0.21
15. 0.01, 0.11, 0.13, 0.20	16. 0.05, 0.07, 0.12, 0.19
17. 0.02, 0.10, 0.12, 0.18	18. 0.04, 0.12, 0.17, 0.18
19. 0.02, 0.09, 0.19, 0.20	20. 0.03, 0.07, 0.15, 0.18
21. Example <u>1.32</u> <u>2.25</u> <u>2.85</u> <u>3.75</u>	22. 1.18, 2.15, 2.95, 3.93
23. 1.11, 1.32, 1.48, 1.56	24. 3.25, 3.31, 3.52, 3.75
25. 1.16, 1.74, 2.15, 2.62	26. 1.55, 2.63, 3.12, 3.58
27. 1.82, 2.51, 3.45, 3.47	28. 2.14, 2.25, 2.29, 2.36
29. 1.18, 1.33, 1.76, 1.98	30. 1.65, 2.19, 2.84, 3.75