


Telling Time

Skill 4 - 4A

Circle two of the times that show the time on the clock.

1.



A. 8:48

B. 15 minutes before seven

C. 7:48


D. 9:38

E. 12 minutes before eight

F. 7:45

G. 12 minutes after seven

2.



A. 10:23

B. 18 minutes after nine

C. 9:18

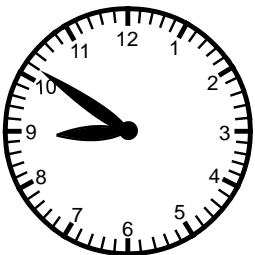
D. 10:43

E. 13 minutes before ten

F. 10:18

G. 18 minutes after ten

3.



A. 9:51

B. 9:46

C. 9:08


D. 8:51

E. 9 minutes before nine

F. 9 minutes after nine

G. 9 minutes before eight

4.



A. 11:15

B. 15 minutes before ten

C. 9:45


D. 10:15

E. 15 minutes after ten

F. 10:45

G. 15 minutes after nine

5.



A. 9:32

B. 12 minutes before ten

C. 9:37

D. 9:42

E. 15 minutes after ten

F. 9:45


G. 23 minutes before ten

Telling Time

Skill 4 - 4A

Circle two of the times that show the time on the clock.

6.



A. 5:02

B. 2 minutes before four

C. 7:48


D. 4:12

E. 2 minutes after 4

F. 4:02

G. 7 minutes after four

7.



A. 5:45

B. 15 minutes after five

C. 4:50

D. 4:45

E. quarter after four

F. 5:15

G. quarter to five

8.



A. 3:55

B. 3:05

C. 9:08

D. 3:10

E. 5 minutes before three

F. 10 minutes after five

G. 5 minutes after three

9.



A. 10:02

B. 2 minutes before ten

C. 10:05


D. 9:58

E. 3 minutes before ten

F. 10:56

G. 2 minutes after ten

10.



A. 9:32

B. 12 minutes before ten

C. 9:37

D. 9:42

E. 15 minutes after ten

F. 9:45

G. none of the answers are correct

