

Bar Graphs

Skill 4 - 5F


Make a Double Bar Graph

Directions: Use the data in the table below to complete the double bar graph.

- Draw a bar on the graph using the data from the column labeled Team 1.
- Draw a bar on the graph using the data from the column labeled Team 2.

Below is an example that is done for you. Use this to help you complete the graphs below.

Boxes of Cookies Sold		
Day	Team 1	Team 2
Monday	20	25
Tuesday	25	20
Wednesday	30	35
Thursday	35	20
Friday	30	40




Key: ■ Team 1 ■ Team 2

1. Directions: Use the data in the table below to complete the bar graph. Completely fill in each graph so that it looks like the example above.

- Draw a bar on the graph using the data from the column labeled Team 1.
- Draw a bar on the graph using the data from the column labeled Team 2.
- Label the scale. (look at the example above)

Number of Books Sold		
Day	Team 1	Team 2
Monday	30	20
Tuesday	25	35
Wednesday	10	20
Thursday	40	35
Friday	25	15



Key: ■ Team 1 ■ Team 2

Bar Graphs

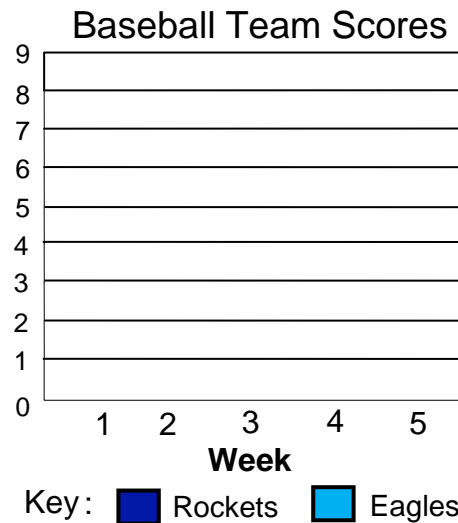
Skill 4 - 5F

Make a Double Bar Graph

2. Directions: Use the data in the table below to complete the bar graph.

- Draw a bar on the graph using the data from the column labeled Rockets.
- Draw a bar on the graph using the data from the column labeled Eagles. Continue until graph is complete.

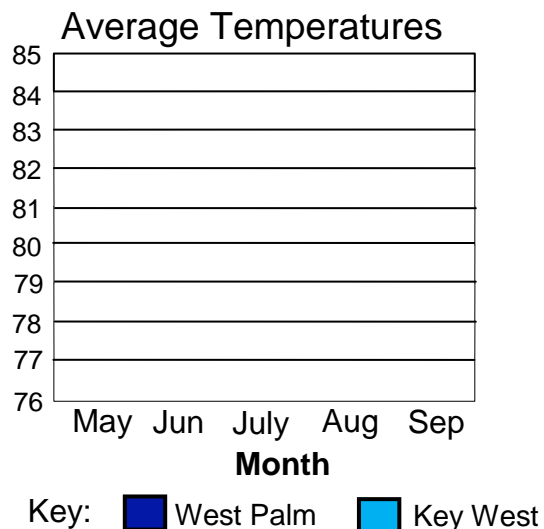
Baseball Team Scores		
Week	Rockets	Eagles
1	3	6
2	7	5
3	8	4
4	5	7
5	6	1



3. Directions: Use the data in the table below to complete the bar graph.

- Draw a bar on the graph using the data from the column labeled West Palm Beach.
- Draw a bar on the graph using the data from the column labeled Key West.
- Label the scale.

Average Monthly Temperatures		
Month	West Palm Beach	Key West
May	77	80
June	80	83
July	82	84
August	82	83
September	81	80



Bar Graphs

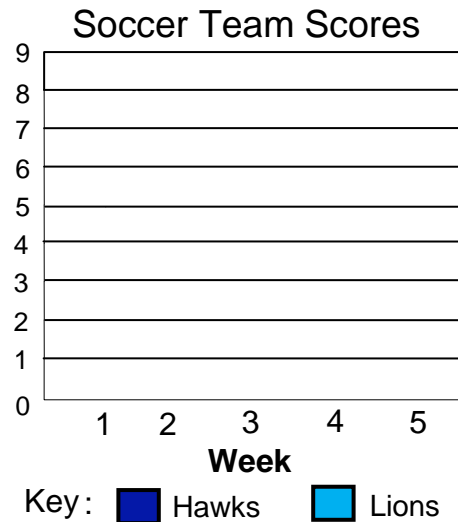
Skill 4 - 5F

Make a Double Bar Graph

4. Directions: Use the data in the table below to complete the bar graph.

- Draw a bar on the graph using the data from the column labeled Hawks.
- Draw a bar on the graph using the data from the column labeled Lions. Continue until graph is complete.
- Label the scale.

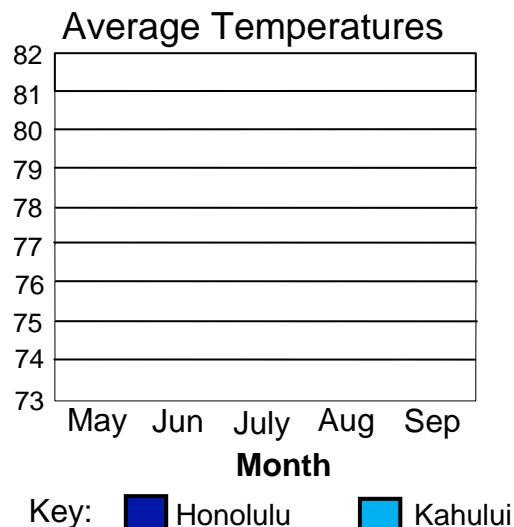
Soccer Team Scores		
Week	Hawks	Lions
1	5	8
2	3	6
3	7	2
4	8	5
5	2	7



5. Directions: Use the data in the table below to complete the bar graph.

- Draw a bar on the graph using the data from the column labeled Honolulu Hawaii.
- Draw a bar on the graph using the data from the column labeled Kahului Hawaii. Continue until graph is complete.
- Label the scale.

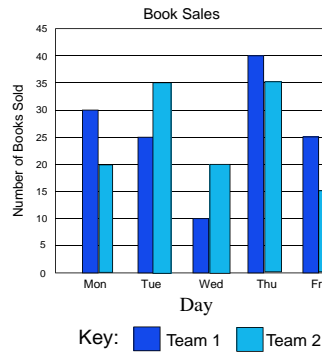
Average Monthly Temperatures		
Month	Honolulu Hawaii	Kahului Hawaii
May	77	75
June	79	77
July	80	78
August	81	79
September	81	78



Answer Key
Bar Graphs
Skill 4 5F

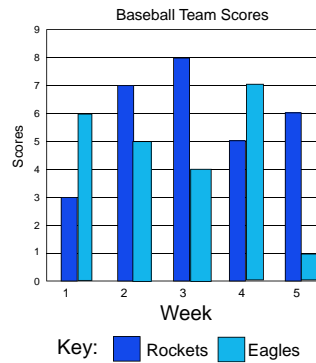
Page 1
1.

Number of Books Sold		
Day	Team 1	Team 2
Monday	30	20
Tuesday	25	35
Wednesday	10	20
Thursday	40	35
Friday	25	15



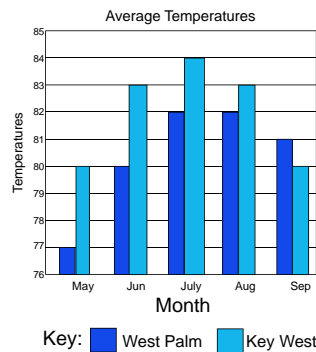
Page 2
2.

Baseball Team Scores		
Week	Rockets	Eagles
1	3	6
2	7	5
3	8	4
4	5	7
5	6	1



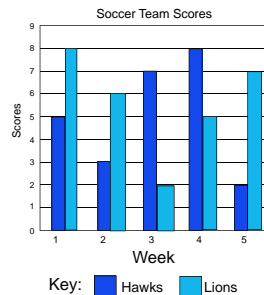
3.

Average Monthly Temperatures		
Month	West Palm Beach	Key West
May	77	80
June	80	83
July	82	84
August	82	83
September	81	80



Page 3
4.

Soccer Team Scores		
Week	Hawks	Lions
1	5	8
2	3	6
3	7	2
4	8	5
5	2	7



Answer Key
Bar Graphs
Skill 4 5F

Page 3
5.

Average Monthly Temperatures		
Month	Honolulu Hawaii	Kahului Hawaii
May	77	75
June	79	77
July	80	78
August	81	79
May	81	78

