
















Geometric Figures

Skill 4 - 19G

Lines and Rays

Definitions	Draw	Read	Write
Point – A point is an exact location in space.	$\bullet A$	point A	point A
Line - A line is straight and has no beginning point or end point.		line AB	\overleftrightarrow{AB}
Line Segment – A line segment has a beginning point and an end point.		line segment BC	\overline{BC}
Ray – A ray has a beginning point but no end point.		ray BC	\overrightarrow{BC}













Directions: Write the name of each figure. Write for example point A , line AB , line segment AB or ray AB . Write in each box.

1. 	2. 	3. $\bullet A$	4. 
5. 	6. $\bullet P$	7. 	8. 
9. 	10. 	11. 	12. $\bullet A$
13. 	14. 	15. $\bullet C$	16. 

Geometric Figures

Skill 4 - 19G

Lines and Rays

17. 	18. 	19. 	20. 
21. 	22. 	23. 	24. 
25. 	26. 	27. 	28. 

Directions: Draw and label each of the following.

29. point A 30. line AB 31. ray XY 32. line segment CD 33. point C 34. line EF 35. ray KL 36. line segment RS 37. point D 38. line BC 39. line RS 40. ray PQ

Answers: Skill 19G Grade 4

- | | | | |
|---------------------|---------------------|---------------------|---------------------|
| 1. line ST | 2. ray CD | 3. point A | 4. line segment AB |
| 5. line segment RS | 6. point P | 7. ray BC | 8. line KL |
| 9. ray ST | 10. line ST | 11. line segment PQ | 12. point A |
| 13. line segment PQ | 14. ray CD | 15. point C | 16. line JK |
| 17. point J | 18. line JK | 19. ray JK | 20. line segment XY |
| 21. ray BC | 22. line segment BC | 23. point A | 24. line BC |
| 25. line AE | 26. line segment RS | 27. ray PQ | 28. point P |

29. point A $\bullet A$	30. line AB \longleftrightarrow A B
31. ray XY \bullet \longrightarrow X Y	32. line segment CD \bullet \bullet C D
33. point C $\bullet C$	34. line EF \longleftrightarrow E F
35. ray KL \bullet \longrightarrow K L	36. line segment RS \bullet \bullet R S
37. point D $\bullet D$	38. line BC \longleftrightarrow B C
39. line RS \longleftrightarrow R S	40. ray PQ \bullet \longrightarrow P Q