

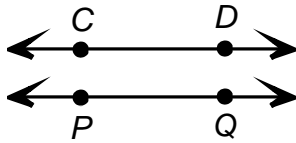
Geometric Figures

Skill 4 - 19I

Classify Lines

Answer to test question 19I: The parallel lines are (a). The intersecting lines are (b). The perpendicular lines are (a).

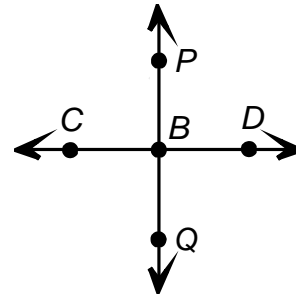
Parallel lines – Lines that stay the same distance apart.



Read – line CD is parallel to line PQ.

Write – $\overleftrightarrow{CD} \parallel \overleftrightarrow{PQ}$

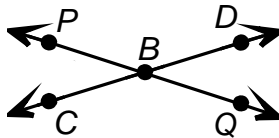
Perpendicular lines – Intersecting lines that form four right angles.



Read – Line CD is perpendicular to line PQ.

Write – $\overleftrightarrow{CD} \perp \overleftrightarrow{PQ}$

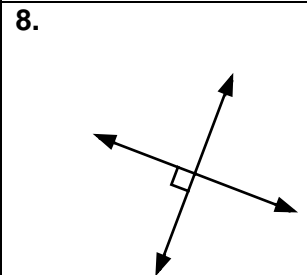
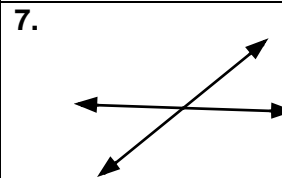
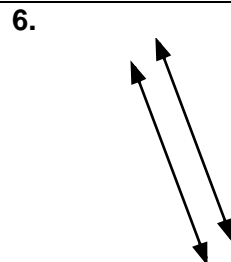
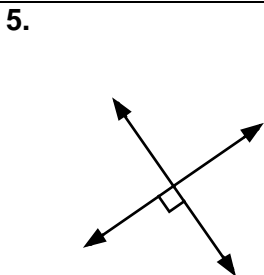
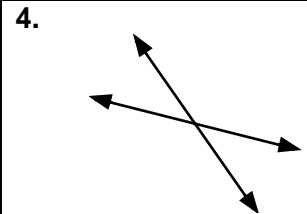
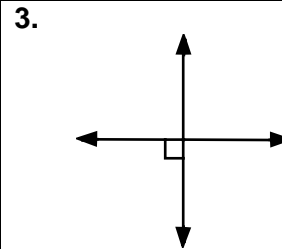
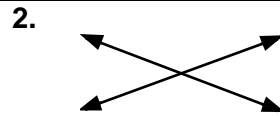
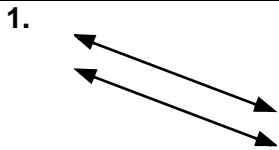
Intersecting lines – Lines that meet or cross each other. They meet at exactly one point.



Read – line CD intersects line PQ.

Write – Line \overleftrightarrow{CD} intersects line \overleftrightarrow{PQ}

Directions: Write parallel, intersecting or perpendicular in each box.

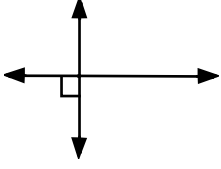
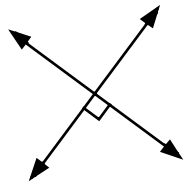

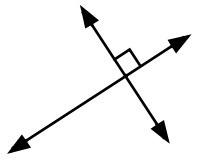
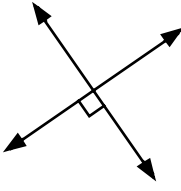
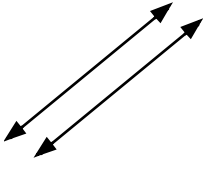
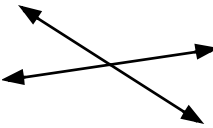
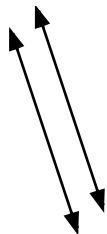


Geometric Figures

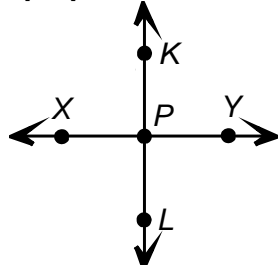
Skill 4 - 19I

Classify Lines

Directions: Write parallel, intersecting or perpendicular in each box.

<p>9.</p> 	<p>10.</p> 	<p>11.</p> 	<p>12.</p> 
<p>13.</p> 	<p>14.</p> 	<p>15.</p> 	<p>16.</p> 

Directions: Draw, label and name each. The first one is completed as an example. Review top of page 1 to see how to do this.

<p>17. perpendicular lines</p>  <p>$\overleftrightarrow{XY} \perp \overleftrightarrow{KL}$</p>	<p>18. parallel lines</p>
<p>19. perpendicular lines</p>	<p>20. intersecting lines</p>
<p>21. intersecting lines</p>	<p>22. parallel lines</p>

Answers: Skill 19I Grade 4

- | | | | |
|-------------------|-------------------|------------------|-------------------|
| 1. parallel | 2. intersecting | 3. perpendicular | 4. intersecting |
| 5. perpendicular | 6. parallel | 7. intersecting | 8. perpendicular |
| 9. perpendicular | 10. perpendicular | 11. intersecting | 12. perpendicular |
| 13. perpendicular | 14. parallel | 15. intersecting | 16. parallel |

17. $\overleftrightarrow{XY} \perp \overleftrightarrow{KL}$

18. $\overleftrightarrow{YY} \parallel \overleftrightarrow{YY}$

19. $\overleftrightarrow{YY} \perp \overleftrightarrow{YY}$

20. Line \overleftrightarrow{YY} intersects line \overleftrightarrow{YY}

21. Line \overleftrightarrow{YY} intersects line \overleftrightarrow{YY}

22. $\overleftrightarrow{YY} \parallel \overleftrightarrow{YY}$