











Probability Skill 4 - 22B

Likely, Equally Likely, Unlikely, Certain, Impossible

Directions: Circle the answer that describes the probability of each event.

<p>1. Without looking, you pull a white marble from the bag. Circle one.</p>  <p style="text-align: right;"> certain likely unlikely impossible </p>	<p>2. Without looking, you pull a black marble from the bag. Circle one.</p>  <p style="text-align: right;"> certain likely unlikely impossible </p>
<p>3. Without looking, you pull a black marble from the bag. Circle one.</p>  <p style="text-align: right;"> certain likely unlikely impossible </p>	<p>4. Without looking, you pull a gray marble from the bag. Circle one.</p>  <p style="text-align: right;"> certain likely unlikely equally likely </p>
<p>5. Without looking, you pull a black, spotted or white marble from the bag. Circle one.</p>  <p style="text-align: right;"> certain likely unlikely impossible </p>	<p>6. Without looking, you pull a black marble from the bag. Circle one.</p>  <p style="text-align: right;"> certain likely unlikely impossible </p>
<p>7. Without looking, you pull a black or gray marble from the bag. Circle one.</p>  <p style="text-align: right;"> likely unlikely equally likely impossible </p>	<p>8. Without looking, you pull a spotted marble from the bag. Circle one.</p>  <p style="text-align: right;"> certain likely unlikely impossible </p>
<p>9. Without looking, you pull a spotted marble from the bag. Circle one.</p>  <p style="text-align: right;"> certain likely unlikely impossible </p>	<p>10. Without looking, you pull a white or spotted marble from the bag. Circle one.</p>  <p style="text-align: right;"> likely unlikely equally likely impossible </p>


Probability Skill 4 - 22B

Likely, Equally Likely, Unlikely, Certain, Impossible

Directions: Circle the answer that describes the probability of each event.

11.


Joey pulls a marble from the bag without looking. Which color is Joey most likely to pull?



- gray
- white
- spotted
- black

12.


Marcia pulls a marble from the bag without looking. Which color is she least likely to pull?



- spotted
- black
- gray

13.


If you pick a marble from the bag without looking which color are you least likely to pick?



- gray
- white
- spotted
- black

14.


Circle the answer that describes the probability of pulling a black marble from the bag.



- certain
- likely
- unlikely
- impossible

15.


Mike pulls a marble from the bag without looking. Which color is Mike certain to pull?



- gray
- white
- spotted
- black

16.


Circle the answer that describes the probability of pulling a spotted marble from the bag.



- certain
- likely
- unlikely
- impossible

17.


Circle the answer that describes the probability of pulling a spotted marble from the bag.



- certain
- likely
- unlikely
- impossible

18.

Circle the answer that describes the probability of pulling a spotted marble from the bag.



- certain
- likely
- unlikely
- impossible

Answer Key: Skill 22B Grade 4

- | | | | | |
|---------------|-------------------|---------------|-------------------|--------------------|
| 1. impossible | 2. unlikely | 3. impossible | 4. equally likely | 5. certain |
| 6. likely | 7. equally likely | 8. unlikely | 9. unlikely | 10. equally likely |
| 11. spotted | 12. gray | 13. white | 14. likely | 15. black |
| 16. unlikely | 17. impossible | 18. likely | | |