


Fractions  
Skill 1-20C

**One Third**

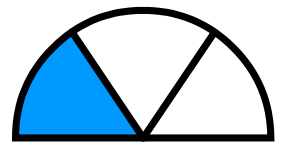
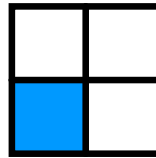

This shape has 3 equal parts.

$\frac{1}{3}$  is shaded or one third is shaded.


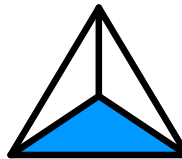

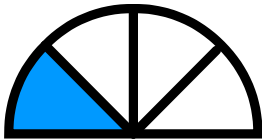


**Three equal parts are called thirds.**

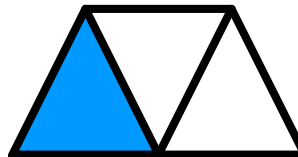
1. Circle the shapes that have one third shaded.




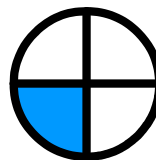

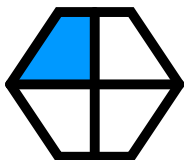
2. Circle the shapes that have  $\frac{1}{3}$  shaded.



3. Circle the shapes that have one third shaded.



4. Circle the shapes that have  $\frac{1}{3}$  shaded.

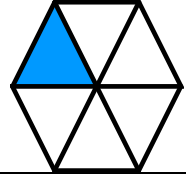




Fractions  
Skill 1-20C



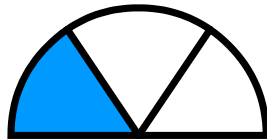
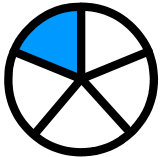
One Third

Three equal parts are called thirds.


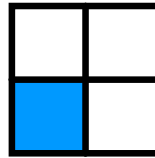
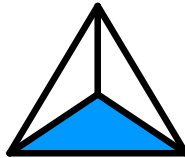
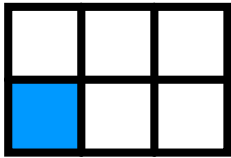
5. Circle the shapes that have one third shaded.



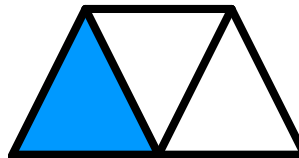

6. Circle the shapes that have  $\frac{1}{3}$  shaded.




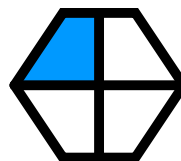
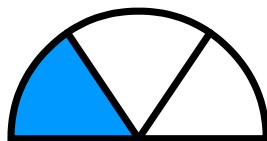
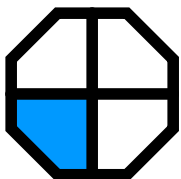
7. Circle the shapes that have one third shaded.



8. Circle the shapes that have  $\frac{1}{3}$  shaded.



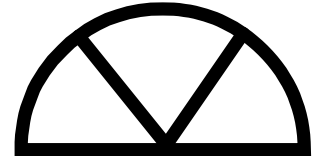
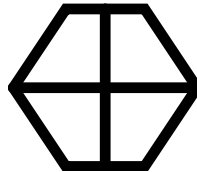
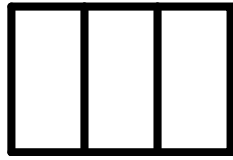

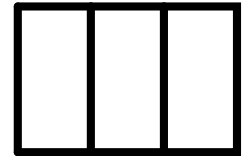
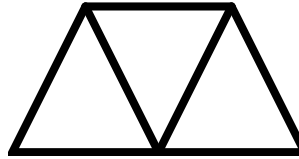
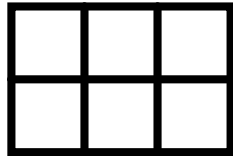
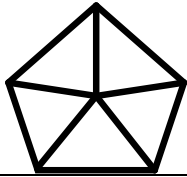


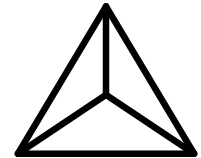
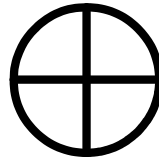
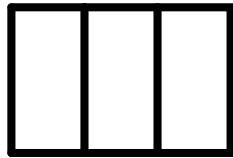
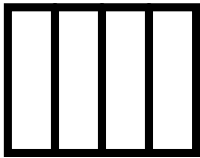
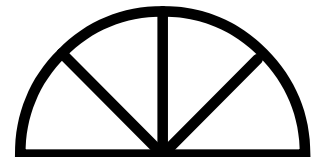
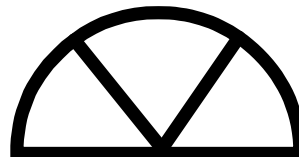
9. Circle the shapes that have one third shaded.



Fractions  
Skill 1-20C









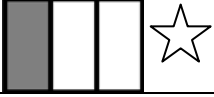









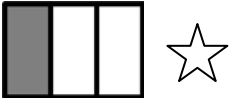









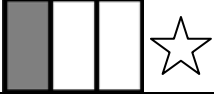



## One Third

Three equal parts are called thirds.

10. Find the shapes that show thirds. Then color  $\frac{1}{3}$ .11. Find the shapes that show thirds. Then color  $\frac{1}{3}$ .12. Find the shapes that show thirds. Then color  $\frac{1}{3}$ .13. Find the shapes that show thirds. Then color  $\frac{1}{3}$ .14. Find the shapes that show thirds. Then color  $\frac{1}{3}$ .

Answer Key  
Skill 1-20C

Shapes with one third shaded have a star beside them.

<p>1. Circle the shapes that have one third shaded.</p> 			
<p>2. Circle the shapes that have <math>\frac{1}{3}</math> shaded.</p>			
			
<p>3. Circle the shapes that have one third shaded.</p>			
			
<p>4. Circle the shapes that have <math>\frac{1}{3}</math> shaded.</p>			
			
<p>5. Circle the shapes that have one third shaded.</p>			
			
<p>6. Circle the shapes that have <math>\frac{1}{3}</math> shaded.</p>			
			
<p>7. Circle the shapes that have one third shaded.</p>			
			
<p>8. Circle the shapes that have <math>\frac{1}{3}</math> shaded.</p>			
			
<p>9. Circle the shapes that have one third shaded.</p>			
