







Money Skill 1- 21G

Count Dimes, Nickels and Pennies






Directions: Count the coins. Write the total in the box. Complete problem number 1 first.

1.






¢






10 ¢
15 ¢
_____ ¢
_____ ¢
_____ ¢
_____ ¢

2.





¢






_____ ¢
_____ ¢
_____ ¢
_____ ¢
_____ ¢

3.





¢

_____ ¢
_____ ¢
_____ ¢
_____ ¢
_____ ¢

4.





¢

_____ ¢
_____ ¢
_____ ¢
_____ ¢
_____ ¢

Money
Skill 1- 21G

Count Dimes, Nickels and Pennies

Directions: Count the coins. Write the total in the box.

5.



¢

_____ ¢

_____ ¢

_____ ¢

_____ ¢

_____ ¢

_____ ¢

6.



¢

_____ ¢

_____ ¢

_____ ¢

_____ ¢

_____ ¢

_____ ¢

7.



¢

_____ ¢

_____ ¢

_____ ¢

_____ ¢

_____ ¢

_____ ¢

8.



¢

_____ ¢

_____ ¢

_____ ¢

_____ ¢

_____ ¢







_____ ¢

Money
Skill 1- 21G







Count Dimes, Nickels and Pennies

Directions: Count the coins. Write the total in the box.







9.

						☹
_____ ☹	_____ ☹	_____ ☹	_____ ☹	_____ ☹	_____ ☹	







10.

						☹
_____ ☹	_____ ☹	_____ ☹	_____ ☹	_____ ☹	_____ ☹	

11.

						☹
_____ ☹	_____ ☹	_____ ☹	_____ ☹	_____ ☹	_____ ☹	

12.

						☹
_____ ☹	_____ ☹	_____ ☹	_____ ☹	_____ ☹	_____ ☹	

Answer Key
Skill 1-21G

Pg 1

1. 27¢ 2. 22¢ 3. 27¢ 4. 31¢

Pg 2

5. 37¢ 6. 36¢ 7. 41¢ 8. 31¢

Pg 3

9. 27¢ 10. 46¢ 11. 28¢ 12. 27¢