

Addition
Skill 2 - 1E

Print in black and white or color.

Write an Addition Number Sentence

Directions: Write an addition number sentence that would go with the pictures below.

Example



4

+

3

=


7

1.



_____ _____ _____

2.



_____ _____ _____

3.



_____ _____ _____

Addition
Skill 2 - 1E

Write an Addition Number Sentence

Directions: Write an addition number sentence that would go with the pictures below.

4.



_____ _____ _____

5.



_____ _____ _____

6.



_____ _____ _____

7.



_____ _____ _____

Addition
Skill 2 - 1E

Write an Addition Number Sentence


Directions: Write an addition number sentence that would go with the pictures below.

8.



_____ _____ _____

9.



_____ _____ _____

10.



_____ _____ _____

11.




_____ _____ _____

Addition
Skill 2 - 1E

Write an Addition Number Sentence


Directions: Write an addition number sentence that would go with the pictures below.

12.




_____ _____ _____

13.




_____ _____ _____

14.



_____ _____ _____

15.



_____ _____ _____

Answer Key
Skill 2: 1E

1. $3 + 4 = 7$

2. $2 + 6 = 8$

3. $3 + 3 = 6$

Pg. 2

4. $5 + 3 = 8$

5. $2 + 4 = 6$

6. $4 + 4 = 8$

7. $3 + 4 = 7$

Pg. 3

8. $4 + 3 = 7$

9. $1 + 6 = 7$

10. $5 + 2 = 7$

11. $2 + 4 = 6$

Pg. 4

12. $2 + 5 = 7$

13. $4 + 5 = 9$

14. $3 + 6 = 9$

15. $3 + 5 = 8$

Copyright © freemathprogram.com All rights reserved.