







Subtraction
Skill 2 - 11

Use Pictures to Write a Subtraction Number Sentence.

Directions: Write a subtraction sentence that would go with the picture.



11 4 7

<p>1.</p>  <p>___ <input type="text"/> ___ <input type="text"/> ___</p>	<p>2.</p>  <p>___ <input type="text"/> ___ <input type="text"/> ___</p>
<p>3.</p>  <p>___ <input type="text"/> ___ <input type="text"/> ___</p>	<p>4.</p>  <p>___ <input type="text"/> ___ <input type="text"/> ___</p>
<p>5.</p>  <p>___ <input type="text"/> ___ <input type="text"/> ___</p>	<p>6.</p>  <p>___ <input type="text"/> ___ <input type="text"/> ___</p>

Name _____


Date _____

Subtraction Skill 2 - 1I

Use Pictures to Write a Subtraction Number Sentence.


Directions: Write a subtraction sentence that would go with the picture.

7.




_____ _____ _____

8.




_____ _____ _____

9.




_____ _____ _____

10.




_____ _____ _____

11.




_____ _____ _____

12.




_____ _____ _____

13.



_____ _____ _____

14.




_____ _____ _____

Subtraction
Skill 2 - 11

Use Pictures to Write a Subtraction Number Sentence.


Directions: Write a subtraction sentence that would go with the picture.

15.




_____ _____ _____

16.




_____ _____ _____

17.




_____ _____ _____

18.




_____ _____ _____

19.




_____ _____ _____

20.




_____ _____ _____

21.



_____ _____ _____

22.



_____ _____ _____

Answer Key
Skill 2 - 1I

Page 1

1. $3 - 2 = 1$

2. $4 - 2 = 2$

3. $3 - 3 = 0$

4. $4 - 1 = 3$

5. $5 - 4 = 1$

6. $5 - 5 = 0$

Page 2

7. $6 - 3 = 3$

8. $7 - 4 = 3$

9. $7 - 3 = 4$

10. $6 - 6 = 0$

11. $8 - 2 = 6$

12. $9 - 3 = 6$

13. $8 - 7 = 1$

14. $9 - 5 = 4$

Page 3

15. $10 - 5 = 5$

16. $13 - 4 = 9$

17. $14 - 6 = 8$

18. $15 - 2 = 13$

19. $15 - 10 = 5$

20. $10 - 10 = 0$

21. $15 - 12 = 3$

22. $15 - 5 = 10$