

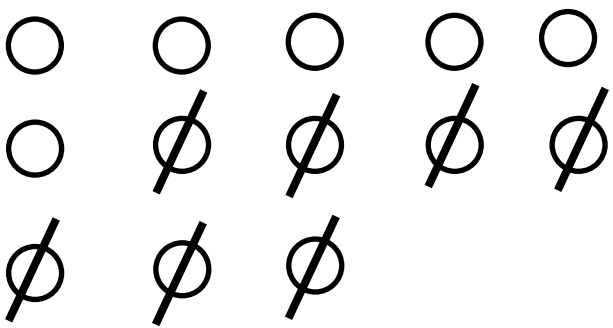
Name _____

Date _____

Skill 2 - 4D: Problem Solving

Write a Number Sentence

Directions: Read the paragraph below. Draw a picture to help solve the problem.

<p>1. There are 13 butterflies on a bush. Then 7 fly away. How many are on the bush now?</p> <p><u>13</u> \square <u>-</u> <u>7</u> \square <u>=</u> <u>6</u></p>	<p>Draw a picture here.</p> 
---	--

<p>2. There are 8 sparrows in a tree. Then 5 fly away. How many are in the tree now?</p> <p>___ \square ___ \square ___</p>	<p>Draw a picture here.</p>
---	-----------------------------

<p>3. John has 9 apples. He gives 3 of them away. How many apples does John have now?</p> <p>___ \square ___ \square ___</p>	<p>Draw a picture here.</p>
--	-----------------------------

Name _____ Date _____

Skill 2 - 4D: Problem Solving

Write a Number Sentence

Directions: Read the paragraph below. Draw a picture to help solve the problem.

4.
Cindy has 10 pencils. She gives 4 of them away. How many pencils does Cindy have now?

____ □ ____ □ ____

Draw a picture here.

5.
Ken has 11 books. He gives 5 of them away. How many books does he have now?

____ □ ____ □ ____

Draw a picture here.

6.
Miguel has 14 apples. He gives 6 of them away. How many apples does Miguel have now?

____ □ ____ □ ____

Draw a picture here.

Name _____

Date _____

Skill 2 - 4D: Problem Solving

Write a Number Sentence

Directions: Read the paragraph below. Draw a picture to help solve the problem.

7.
Martha has 15 roses. She gives 8 of them away. How many roses does Martha have now?

___ □ ___ □ ___

Draw a picture here.

8.
Jonathan has 12 sheets of paper. He gives 8 of them away. How many sheets of paper does Jonathan have now?

___ □ ___ □ ___

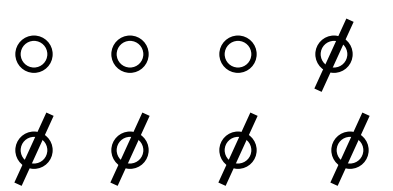
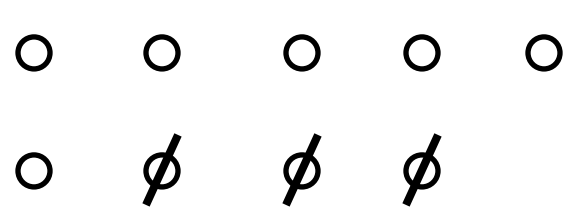
Draw a picture here.

9.
Carlos has 18 marbles. He gives 7 of them away. How many marbles does Carlos have now?

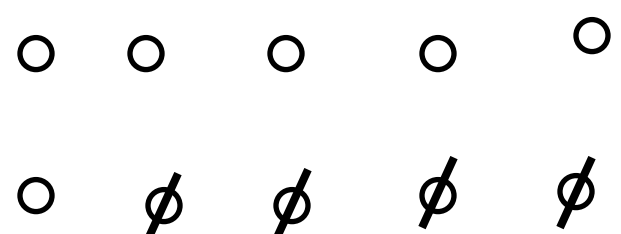
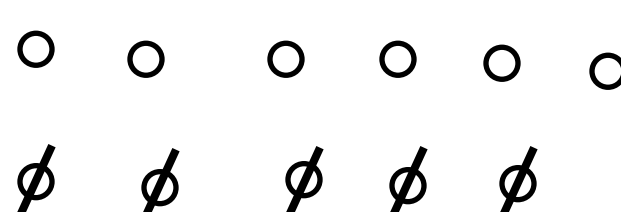
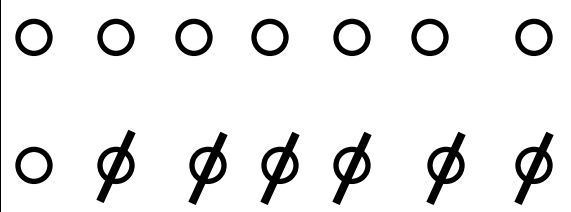
___ □ ___ □ ___

Draw a picture here.

Answer Key: Skill 2 - 4D

<p>2. There are 8 sparrows in a tree. Then 5 fly away. How many are in the tree now?</p> <p><u>8</u> - <u>5</u> = <u>3</u></p>	<p>Draw a picture here.</p> 
<p>3. John has 9 apples. He gives 3 of them away. How many apples does John have now?</p> <p><u>9</u> - <u>3</u> = <u>6</u></p>	<p>Draw a picture here.</p> 

Page 2

<p>4. Cindy has 10 pencils. She gives 4 of them away. How many pencils does Cindy have now?</p> <p><u>10</u> - <u>4</u> = <u>6</u></p>	<p>Draw a picture here.</p> 
<p>5. Ken has 11 books. He gives 5 of them away. How many books does he have now?</p> <p><u>11</u> - <u>5</u> = <u>6</u></p>	<p>Draw a picture here.</p> 
<p>6. Miguel has 14 apples. He gives 6 of them away. How many apples does Miguel have now?</p> <p><u>14</u> - <u>6</u> = <u>8</u></p>	<p>Draw a picture here.</p> 

<p>7. Martha has 15 roses. She gives 8 of them away. How many roses does Martha have now?</p> <p><u>15</u> - <u>8</u> = <u>7</u></p>	<p>Draw a picture here.</p>
--	-----------------------------

<p>8. Jonathan has 12 sheets of paper. He gives 8 of them away. How many sheets of paper does Jonathan have now?</p> <p><u>12</u> - <u>8</u> = <u>4</u></p>	<p>Draw a picture here.</p>
---	-----------------------------

<p>9. Carlos has 18 marbles. He gives 7 of them away. How many marbles does Carlos have now?</p> <p><u>18</u> - <u>7</u> = <u>11</u></p>	<p>Draw a picture here.</p>
--	-----------------------------