

Name _____

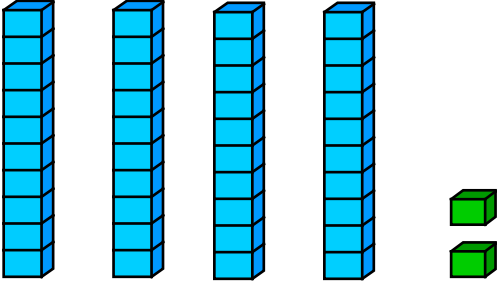
Date _____

Skill 2 - 5A: Place Value

Print in black and white or color.

Tens and Ones

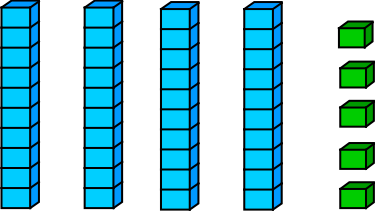
Directions: Write how many tens and ones and then write the answer on the line below.



Tens	Ones
4	2

= 42

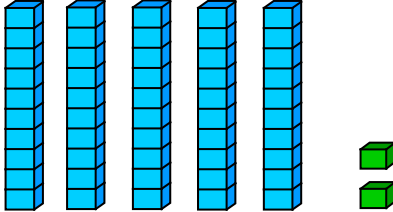
1.



Tens	Ones

= _____

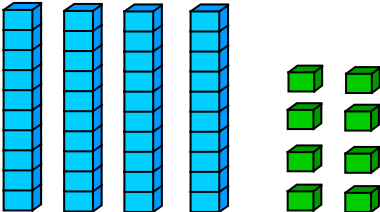
2.



Tens	Ones

= _____

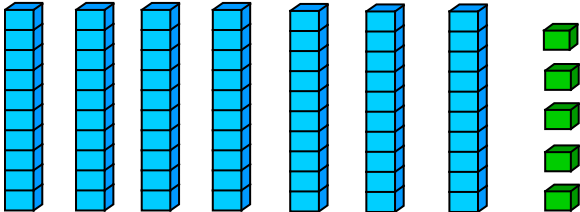
3.



Tens	Ones

= _____

4.



Tens	Ones

= _____

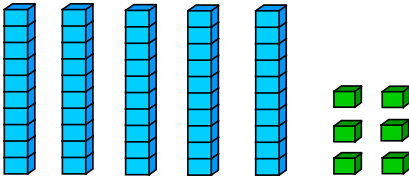
Name _____

Date _____

Skill 2 - 5A: Place Value

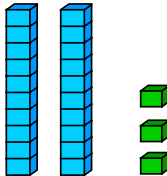
Tens and Ones

Directions: Write how many tens and ones and then write the answer on the line below.

5. 

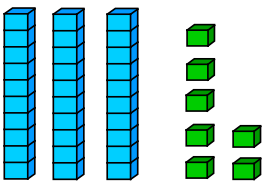
Tens	Ones

 = _____

6. 

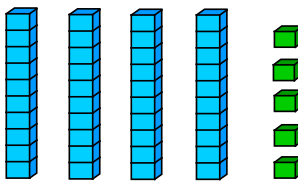
Tens	Ones

 = _____

7. 


Tens	Ones

 = _____

8. 

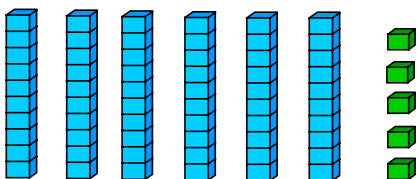
Tens	Ones

 = _____

9. 

Tens	Ones

 = _____

10. 

Tens	Ones

 = _____

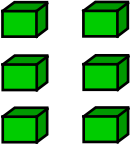
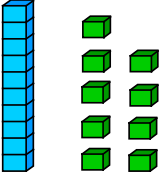
Name _____

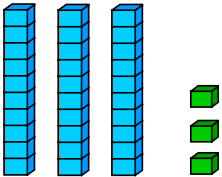
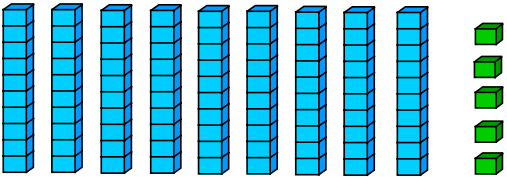
Date _____

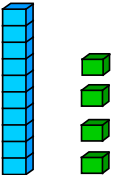
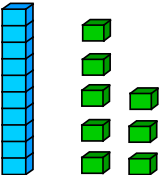
Skill 2 - 5A: Place Value

Tens and Ones

Directions: Write how many tens and ones and then write the answer on the line below.

<p>11.</p>  <table border="1" style="width: 100%; margin-top: 10px;"> <thead> <tr> <th style="width: 50%;">Tens</th> <th style="width: 50%;">Ones</th> </tr> </thead> <tbody> <tr> <td style="height: 40px;"></td> <td style="height: 40px;"></td> </tr> </tbody> </table> <p style="text-align: right; margin-top: 10px;">= _____</p>	Tens	Ones			<p>12.</p>  <table border="1" style="width: 100%; margin-top: 10px;"> <thead> <tr> <th style="width: 50%;">Tens</th> <th style="width: 50%;">Ones</th> </tr> </thead> <tbody> <tr> <td style="height: 40px;"></td> <td style="height: 40px;"></td> </tr> </tbody> </table> <p style="text-align: right; margin-top: 10px;">= _____</p>	Tens	Ones		
Tens	Ones								
Tens	Ones								

<p>13.</p>  <table border="1" style="width: 100%; margin-top: 10px;"> <thead> <tr> <th style="width: 50%;">Tens</th> <th style="width: 50%;">Ones</th> </tr> </thead> <tbody> <tr> <td style="height: 40px;"></td> <td style="height: 40px;"></td> </tr> </tbody> </table> <p style="text-align: right; margin-top: 10px;">= _____</p>	Tens	Ones			<p>14.</p>  <table border="1" style="width: 100%; margin-top: 10px;"> <thead> <tr> <th style="width: 50%;">Tens</th> <th style="width: 50%;">Ones</th> </tr> </thead> <tbody> <tr> <td style="height: 40px;"></td> <td style="height: 40px;"></td> </tr> </tbody> </table> <p style="text-align: right; margin-top: 10px;">= _____</p>	Tens	Ones		
Tens	Ones								
Tens	Ones								

<p>15.</p>  <table border="1" style="width: 100%; margin-top: 10px;"> <thead> <tr> <th style="width: 50%;">Tens</th> <th style="width: 50%;">Ones</th> </tr> </thead> <tbody> <tr> <td style="height: 40px;"></td> <td style="height: 40px;"></td> </tr> </tbody> </table> <p style="text-align: right; margin-top: 10px;">= _____</p>	Tens	Ones			<p>16.</p>  <table border="1" style="width: 100%; margin-top: 10px;"> <thead> <tr> <th style="width: 50%;">Tens</th> <th style="width: 50%;">Ones</th> </tr> </thead> <tbody> <tr> <td style="height: 40px;"></td> <td style="height: 40px;"></td> </tr> </tbody> </table> <p style="text-align: right; margin-top: 10px;">= _____</p>	Tens	Ones		
Tens	Ones								
Tens	Ones								

Answer Key
Skill 2 - 5A

1.	<table border="1"><tr><th>Tens</th><th>Ones</th></tr><tr><td>4</td><td>5</td></tr></table> = <u>45</u>	Tens	Ones	4	5	2.	<table border="1"><tr><th>Tens</th><th>Ones</th></tr><tr><td>5</td><td>2</td></tr></table> = <u>52</u>	Tens	Ones	5	2
Tens	Ones										
4	5										
Tens	Ones										
5	2										
3.	<table border="1"><tr><th>Tens</th><th>Ones</th></tr><tr><td>4</td><td>8</td></tr></table> = <u>48</u>	Tens	Ones	4	8	4.	<table border="1"><tr><th>Tens</th><th>Ones</th></tr><tr><td>7</td><td>5</td></tr></table> = <u>75</u>	Tens	Ones	7	5
Tens	Ones										
4	8										
Tens	Ones										
7	5										

Page 2

5.	<table border="1"><tr><th>Tens</th><th>Ones</th></tr><tr><td>5</td><td>6</td></tr></table> = <u>56</u>	Tens	Ones	5	6	6.	<table border="1"><tr><th>Tens</th><th>Ones</th></tr><tr><td>2</td><td>3</td></tr></table> = <u>23</u>	Tens	Ones	2	3
Tens	Ones										
5	6										
Tens	Ones										
2	3										
7.	<table border="1"><tr><th>Tens</th><th>Ones</th></tr><tr><td>3</td><td>7</td></tr></table> = <u>37</u>	Tens	Ones	3	7	8.	<table border="1"><tr><th>Tens</th><th>Ones</th></tr><tr><td>4</td><td>5</td></tr></table> = <u>45</u>	Tens	Ones	4	5
Tens	Ones										
3	7										
Tens	Ones										
4	5										
9.	<table border="1"><tr><th>Tens</th><th>Ones</th></tr><tr><td>8</td><td>4</td></tr></table> = <u>84</u>	Tens	Ones	8	4	10.	<table border="1"><tr><th>Tens</th><th>Ones</th></tr><tr><td>6</td><td>5</td></tr></table> = <u>65</u>	Tens	Ones	6	5
Tens	Ones										
8	4										
Tens	Ones										
6	5										

Page 3

11.	<table border="1"><tr><th>Tens</th><th>Ones</th></tr><tr><td>0</td><td>6</td></tr></table> = <u>6</u>	Tens	Ones	0	6	12.	<table border="1"><tr><th>Tens</th><th>Ones</th></tr><tr><td>1</td><td>9</td></tr></table> = <u>19</u>	Tens	Ones	1	9
Tens	Ones										
0	6										
Tens	Ones										
1	9										
13.	<table border="1"><tr><th>Tens</th><th>Ones</th></tr><tr><td>3</td><td>3</td></tr></table> = <u>33</u>	Tens	Ones	3	3	14.	<table border="1"><tr><th>Tens</th><th>Ones</th></tr><tr><td>9</td><td>5</td></tr></table> = <u>95</u>	Tens	Ones	9	5
Tens	Ones										
3	3										
Tens	Ones										
9	5										
15.	<table border="1"><tr><th>Tens</th><th>Ones</th></tr><tr><td>1</td><td>4</td></tr></table> = <u>14</u>	Tens	Ones	1	4	16.	<table border="1"><tr><th>Tens</th><th>Ones</th></tr><tr><td>1</td><td>8</td></tr></table> = <u>18</u>	Tens	Ones	1	8
Tens	Ones										
1	4										
Tens	Ones										
1	8										