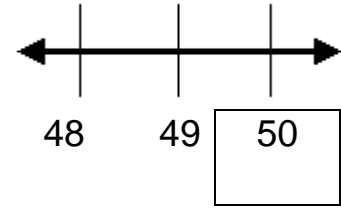
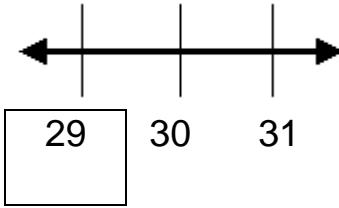
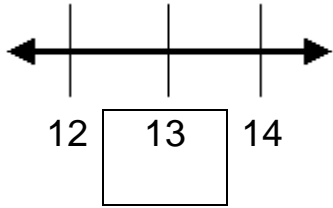
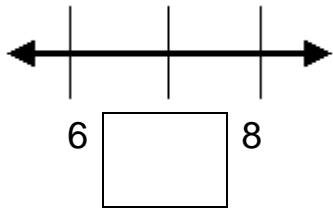


## Skill 2 - 6C: Order Numbers

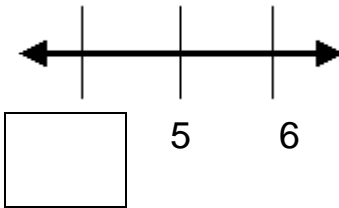
## Find the Missing Number to 50

**Directions:** Write the missing number in the box on the number line.**Examples**

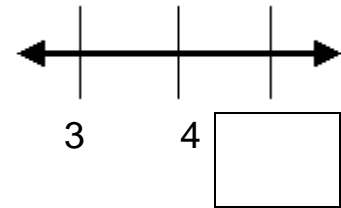
1.



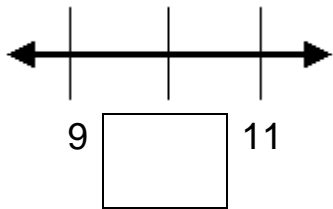
2.



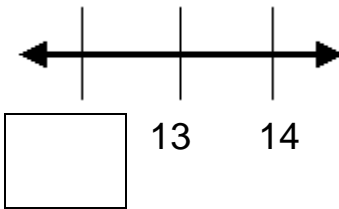
3.



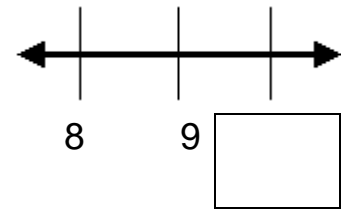
4.



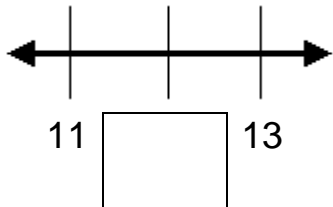
5.



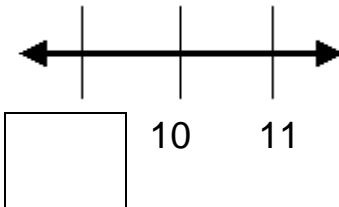
6.



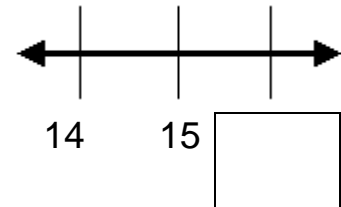
7.



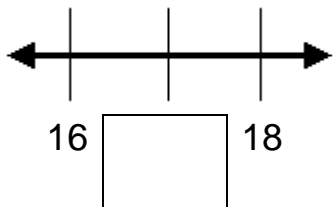
8.



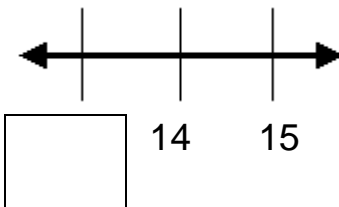
9.



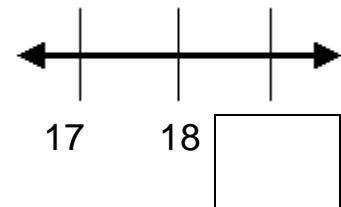
10.



11.



12.

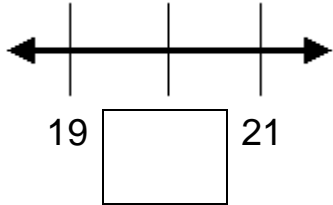


## Skill 2 - 6C: Order Numbers

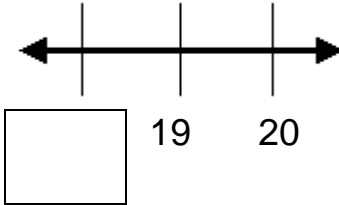
## Find the Missing Number to 50

**Directions:** Write the missing number in the box on the number line.

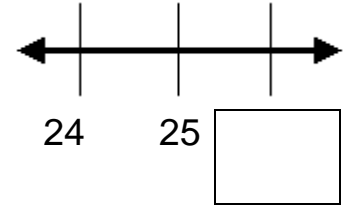
13.



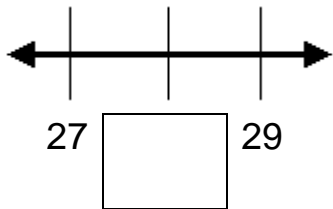
14.



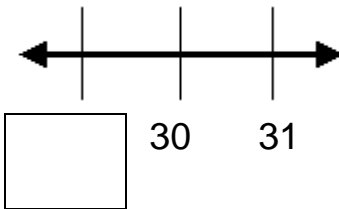
15.



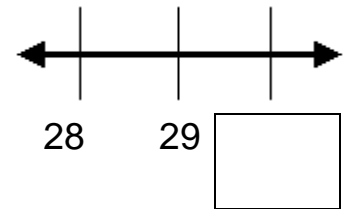
16.



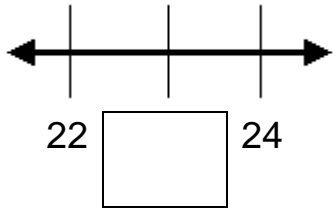
17.



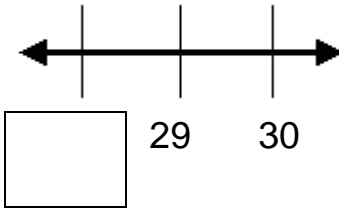
18.



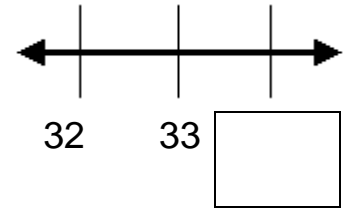
19.



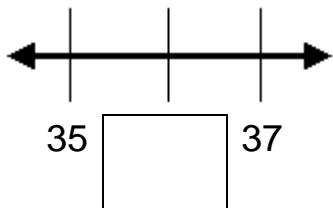
20.



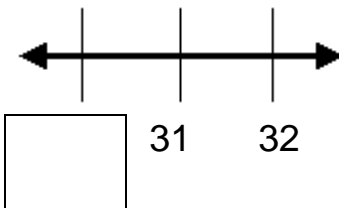
21.



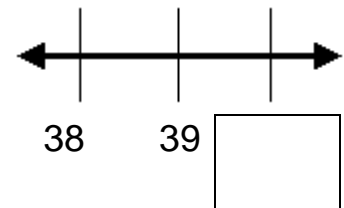
22.



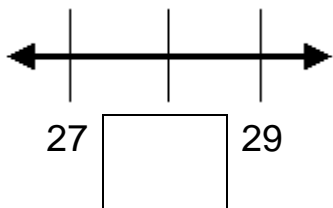
23.



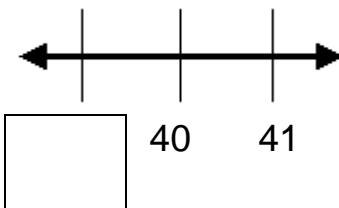
24.



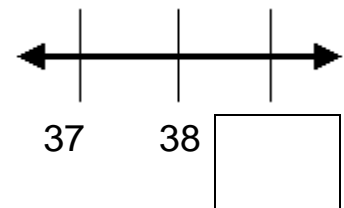
25.



26.



27.

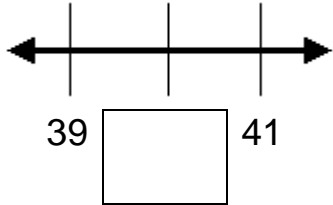


## Skill 2 - 6C: Order Numbers

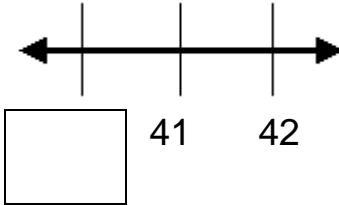
## Find the Missing Number to 50

**Directions:** Write the missing number in the box on the number line.

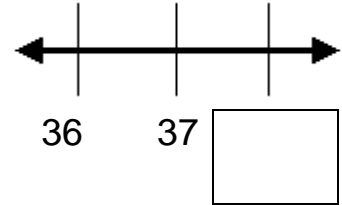
28.



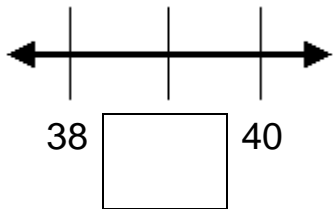
29.



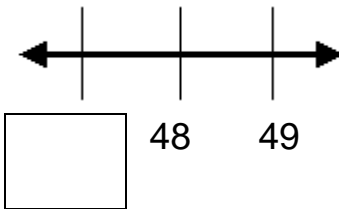
30.



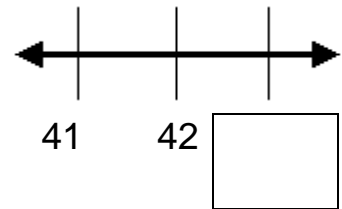
31.



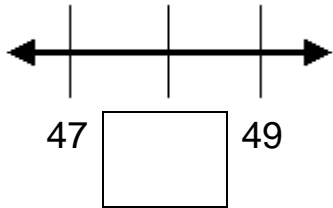
32.



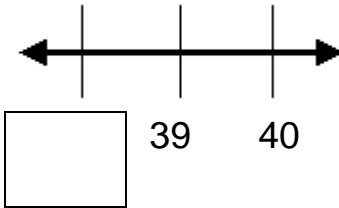
33.



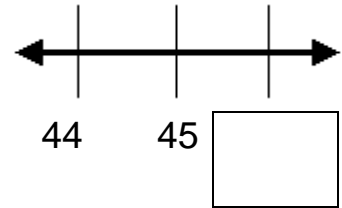
34.



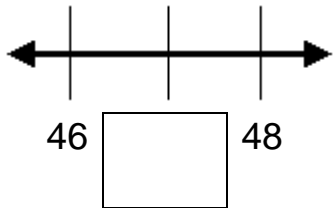
35.



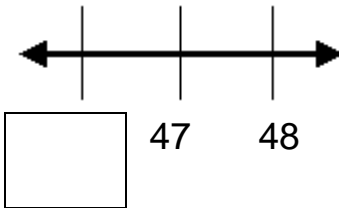
36.



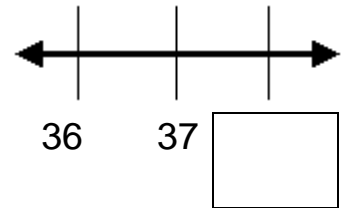
37.



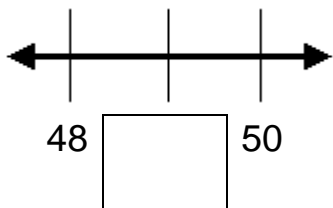
38.



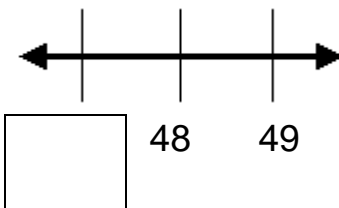
39.



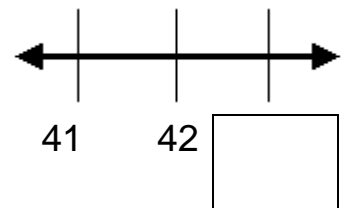
40.



41.



42.



Answer Key  
Skill 2 - 6C

<b>1. 7</b>	<b>2. 4</b>	<b>3. 5</b>	<b>4. 10</b>	<b>5. 11</b>	<b>6. 10</b>
<b>7. 12</b>	<b>8. 9</b>	<b>9. 16</b>	<b>10. 17</b>	<b>11. 13</b>	<b>12. 19</b>

Page 2

<b>13. 20</b>	<b>14. 18</b>	<b>15. 26</b>	<b>16. 28</b>	<b>17. 29</b>	<b>18. 30</b>
<b>19. 23</b>	<b>20. 28</b>	<b>21. 34</b>	<b>22. 36</b>	<b>23. 30</b>	<b>24. 40</b>
<b>25.28</b>	<b>26. 39</b>	<b>27. 39</b>			

Page 3

<b>28. 40</b>	<b>29. 40</b>	<b>30. 38</b>	<b>31. 39</b>	<b>32. 47</b>	<b>33. 43</b>
<b>34. 48</b>	<b>35. 38</b>	<b>36. 46</b>	<b>37. 47</b>	<b>38. 46</b>	<b>39. 38</b>
<b>40.49</b>	<b>41. 47</b>	<b>43. 43</b>			